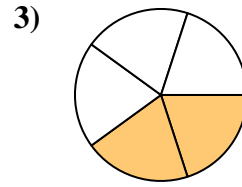
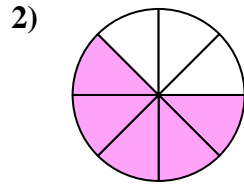
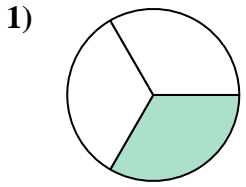




Find the angle (in degrees) of the shaded portion of the circle.

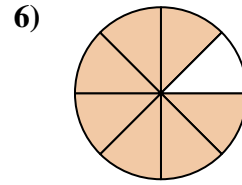
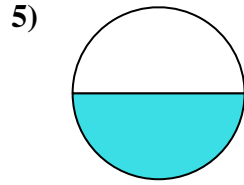
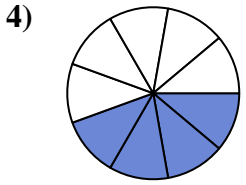
Answers



1. _____

2. _____

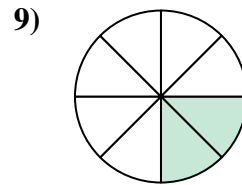
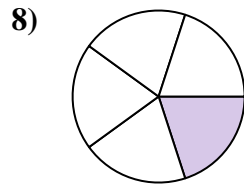
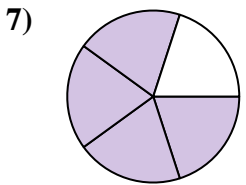
3. _____



4. _____

5. _____

6. _____

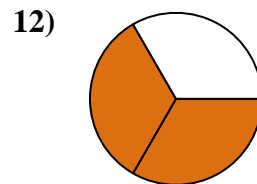
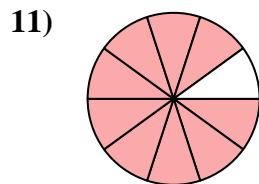
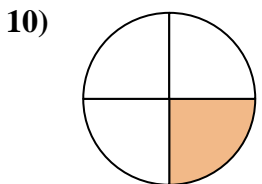


7. _____

8. _____

9. _____

10. _____



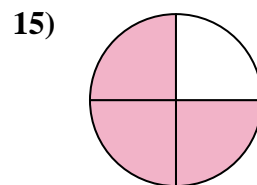
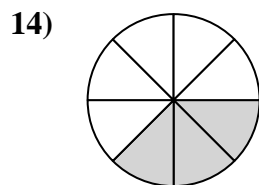
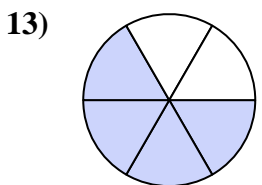
11. _____

12. _____

13. _____

14. _____

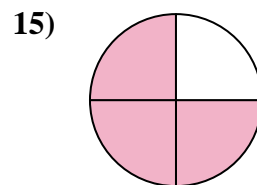
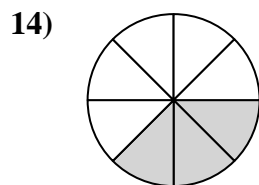
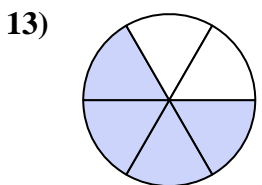
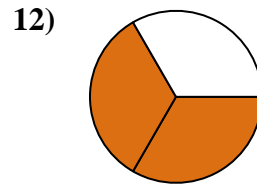
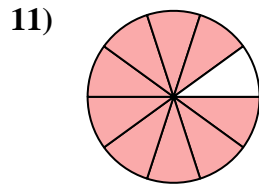
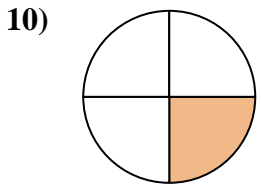
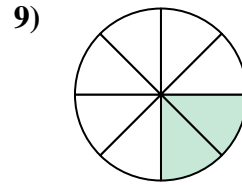
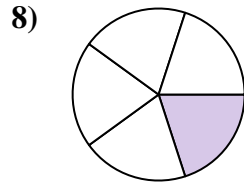
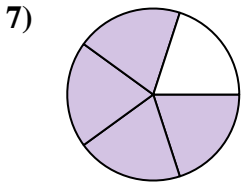
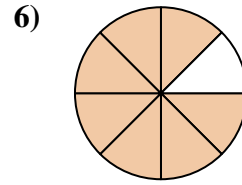
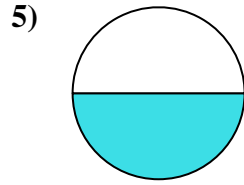
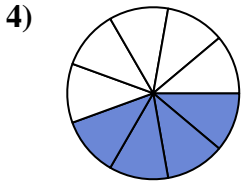
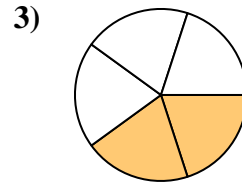
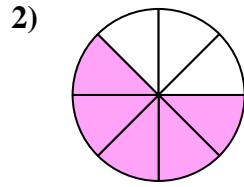
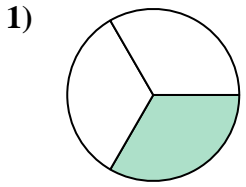
15. _____





Find the angle (in degrees) of the shaded portion of the circle.

Answers



1. 120

2. 225

3. 144

4. 160

5. 180

6. 315

7. 288

8. 72

9. 90

10. 90

11. 324

12. 240

13. 240

14. 135

15. 270



Find the angle (in degrees) of the shaded portion of the circle.

Answers

315

120

240

72

90

225

324

160

180

288

90

144

1. _____

2. _____

3. _____

4. _____

5. _____

6. _____

7. _____

8. _____

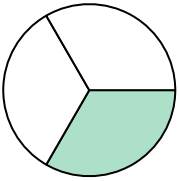
9. _____

10. _____

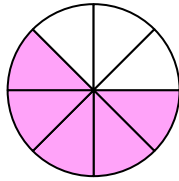
11. _____

12. _____

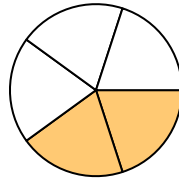
1)



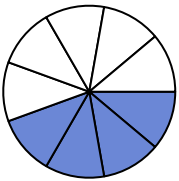
2)



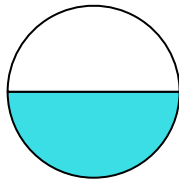
3)



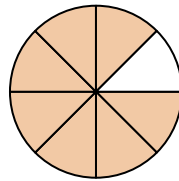
4)



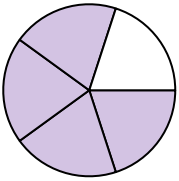
5)



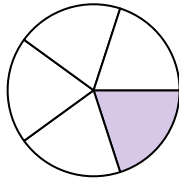
6)



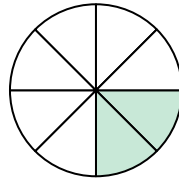
7)



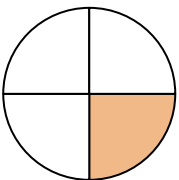
8)



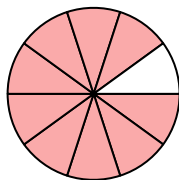
9)



10)



11)



12)

