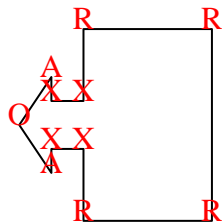




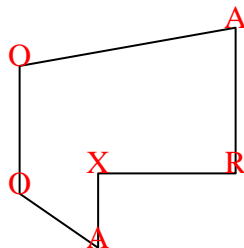


Count the number of Acute, Obtuse, Right and Reflex angles in each shape.

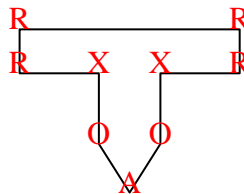
Ex)



1)



2)



Answers

Ex. 2 1 4 4

1. 2 2 1 1

2. 1 2 4 2

3. 0 2 3 0

4. 2 3 0 1

5. 1 1 2 0

6. 2 4 4 0

7. 0 0 6 0

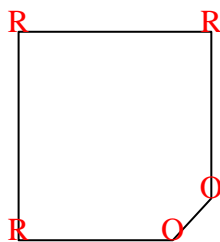
8. 0 3 2 0

9. 2 2 1 2

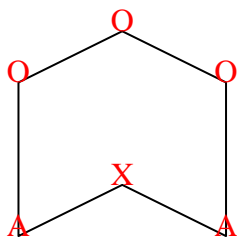
10. 1 3 4 3

11. 2 2 0 0

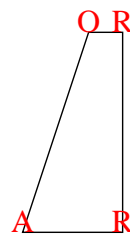
3)



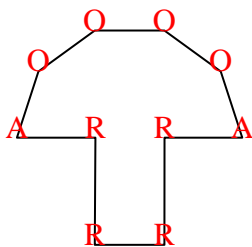
4)



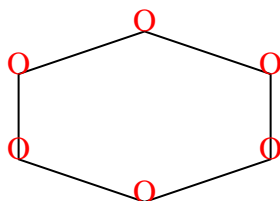
5)



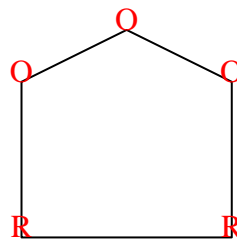
6)



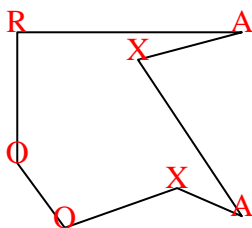
7)



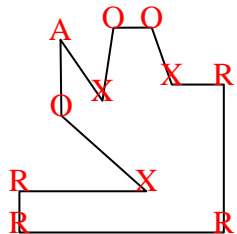
8)



9)



10)



11)

