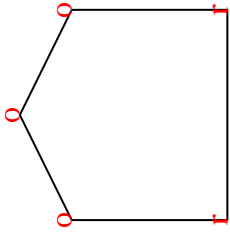




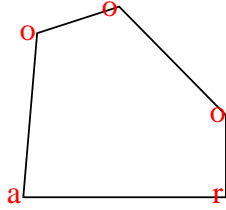


Count the number of Acute, Obtuse and Right angles inside each shape.

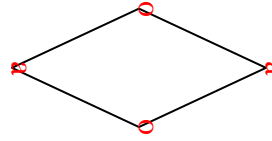
Ex)



1)



2)



Answers

Ex. 0 3 2

1. 1 3 1

2. 2 2 0

3. 2 2 0

4. 1 1 2

5. 0 6 0

6. 0 0 4

7. 0 8 0

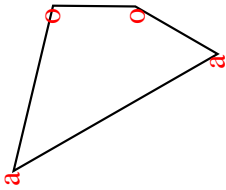
8. 0 2 3

9. 2 2 0

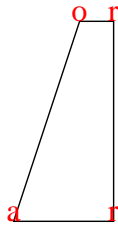
10. 1 2 1

11. 0 6 0

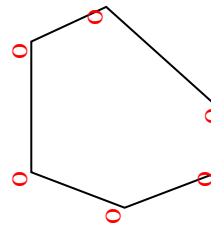
3)



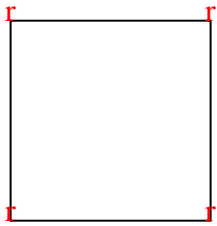
4)



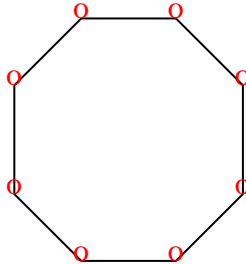
5)



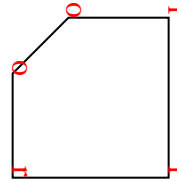
6)



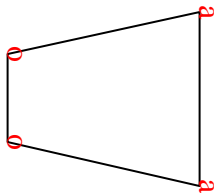
7)



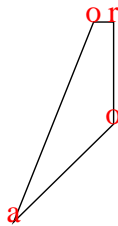
8)



9)



10)



11)

