



Solve each problem using a tape diagram.

Answers

Ex) Luke's Ice Cream Hut had Chocolate or Vanilla shakes. On the 4th of July they sold 611 shakes total with the ratio of chocolate to vanilla being 6:7. How many chocolate shakes did they sell?

Ex. 282

1) A store had 451 sodas, both diet and regular. The ratio of diet sodas to regular sodas was 3:8. How many diet sodas were there?

1. _____

2. _____

3. _____

4. _____

5. _____

2) At the fair the ratio of male to females was 6:7. If there are 1,157 people at the fair how many males are there?

3) Mike was looking at his streaming music stats. The ratio of songs he liked to disliked was 2:7. If he listened to 450 songs total how many did he like?

4) During an local election the ratio of teens to adults who voted was 7:9. If 1,200 people voted how many were teens?

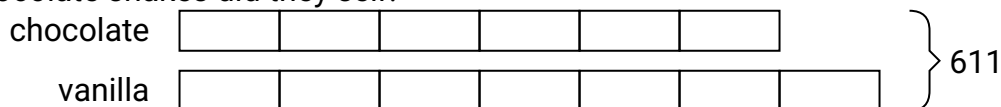
5) In August, Tiffany's Clothing Store sold 228 shirts with the ratio of short sleeve to long sleeve being 7:5. How many short sleeve shirts were sold?




Solve each problem using a tape diagram.

Answers

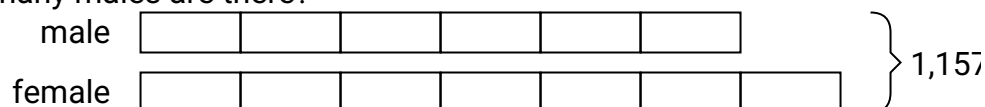
- Ex) Luke's Ice Cream Hut had Chocolate or Vanilla shakes. On the 4th of July they sold 611 shakes total with the ratio of chocolate to vanilla being 6:7. How many chocolate shakes did they sell?

Ex. 282


- 1) A store had 451 sodas, both diet and regular. The ratio of diet sodas to regular sodas was 3:8. How many diet sodas were there?

1. 1232. 5343. 1004. 5255. 133

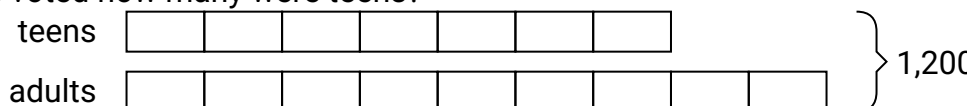
- 2) At the fair the ratio of male to females was 6:7. If there are 1,157 people at the fair how many males are there?



- 3) Mike was looking at his streaming music stats. The ratio of songs he liked to disliked was 2:7. If he listened to 450 songs total how many did he like?



- 4) During an local election the ratio of teens to adults who voted was 7:9. If 1,200 people voted how many were teens?



- 5) In August, Tiffany's Clothing Store sold 228 shirts with the ratio of short sleeve to long sleeve being 7:5. How many short sleeve shirts were sold?

