



Solve each problem using a tape diagram.

Answers

- 1) At the fair the ring toss booth took in \$18 the first hour. The second hour they took \$5 less than the first hour. And the third hour they took 4 times the amount in the first hour. How much money did the ring toss booth take in the first 3 hours.

- 2) In one day a restaurant used 29 knives. They used 6 more forks than they used knives. They also used 2 as many spoons as knives. How many utensils do they use in a day?

- 3) Amy, Billy and Carl were working on a school project. Amy spent 23 minutes on her portion. Billy spent 6 times as long on his portion. And Carl spent 2 minutes fewer than Billy did. How many minutes total were they working?

- 4) While playing a video game Aaron, Bianca and Cathy counted the enemies they defeated. Aaron defeated 18. Bianca defeated 9 more than Aaron. And Cathy defeated 3 times as many as Aaron. How many enemies did they defeat total?

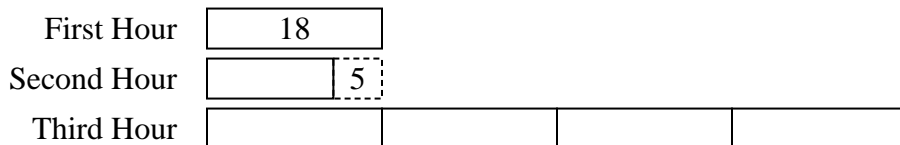
- 5) Emily's TV emporium was running a contest to see which employee could sell the most TVs. Frank sold 8 times as many TVs as Danny. Edward sold 4 fewer than Frank. And Danny sold 18 TVs. How many TVs did they sell total?

1. _____
2. _____
3. _____
4. _____
5. _____




Solve each problem using a tape diagram.


- 1) At the fair the ring toss booth took in \$18 the first hour. The second hour they took \$5 less than the first hour. And the third hour they took 4 times the amount in the first hour. How much money did the ring toss booth take in the first 3 hours.



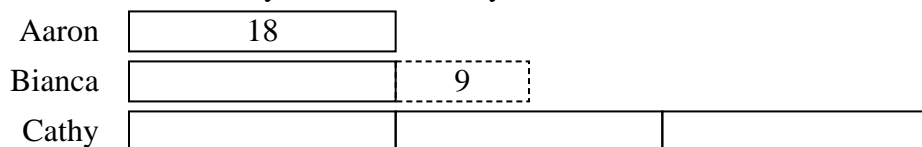
- 2) In one day a restaurant used 29 knives. They used 6 more forks than they used knives. They also used 2 as many spoons as knives. How many utensils do they use in a day?



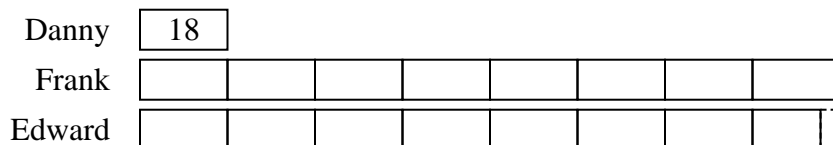
- 3) Amy, Billy and Carl were working on a school project. Amy spent 23 minutes on her portion. Billy spent 6 times as long on his portion. And Carl spent 2 minutes fewer than Billy did. How many minutes total were they working?



- 4) While playing a video game Aaron, Bianca and Cathy counted the enemies they defeated. Aaron defeated 18. Bianca defeated 9 more than Aaron. And Cathy defeated 3 times as many as Aaron. How many enemies did they defeat total?



- 5) Emily's TV emporium was running a contest to see which employee could sell the most TVs. Frank sold 8 times as many TVs as Danny. Edward sold 4 fewer than Frank. And Danny sold 18 TVs. How many TVs did they sell total?



Answers

1. **103**
2. **122**
3. **297**
4. **99**
5. **302**