

**Solve each problem.****Answers**

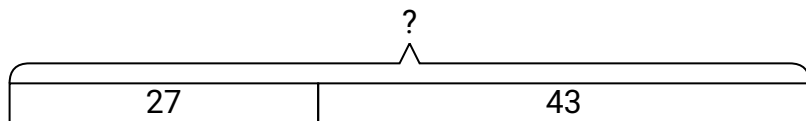
- 1) Sarah had 43 books. If she bought 27 more at a yard sale how many would she have total?
- 2) A pet store had 31 kittens. If they got another 18 kittens, how many would they have total?
- 3) On Saturday Adam bought 22 trading cards. On Sunday he bought 17 more. How many cards did he buy total?
- 4) A clown gave away 33 balloons to girls and 21 balloons to boys. How many balloons did he give away total?
- 5) At the arcade Mike had won 13 tickets. Later he won 19 more tickets. How many tickets did Mike have total?
- 6) Faye went to the movies 50 times last year and 23 times this year. How many times did Faye go to the movies total?
- 7) For Halloween Ned got 12 ounces of candy and Janet got 23 ounces of candy. What is the combined weight they received?

1. _____
2. _____
3. _____
4. _____
5. _____
6. _____
7. _____

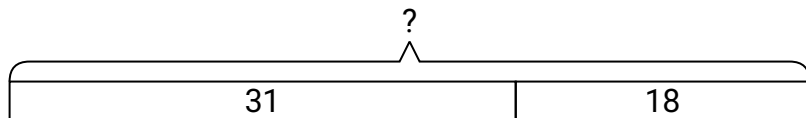


Solve each problem.

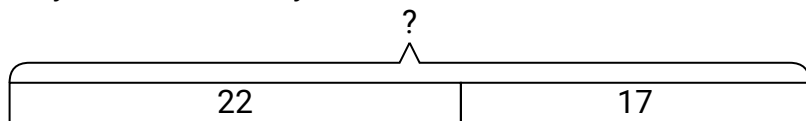
- 1) Sarah had 43 books. If she bought 27 more at a yard sale how many would she have total?



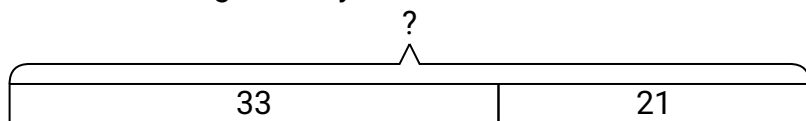
- 2) A pet store had 31 kittens. If they got another 18 kittens, how many would they have total?



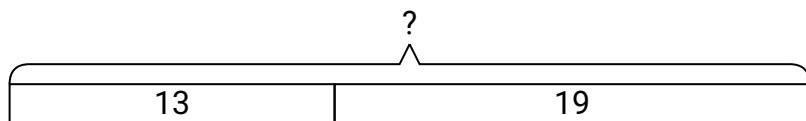
- 3) On Saturday Adam bought 22 trading cards. On Sunday he bought 17 more. How many cards did he buy total?



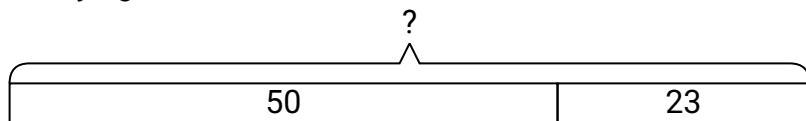
- 4) A clown gave away 33 balloons to girls and 21 balloons to boys. How many balloons did he give away total?



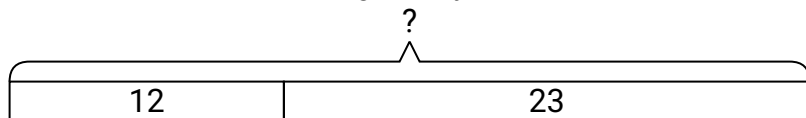
- 5) At the arcade Mike had won 13 tickets. Later he won 19 more tickets. How many tickets did Mike have total?



- 6) Faye went to the movies 50 times last year and 23 times this year. How many times did Faye go to the movies total?



- 7) For Halloween Ned got 12 ounces of candy and Janet got 23 ounces of candy. What is the combined weight they received?

**Answers**

1. **70**
2. **49**
3. **39**
4. **54**
5. **32**
6. **73**
7. **35**