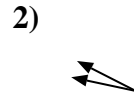
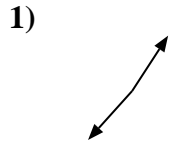




Determine if the angle shown is 'less', 'more' or 'equal' to 90°.

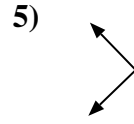
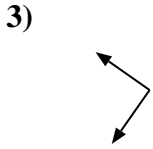
Answers



Ex. less

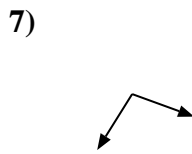
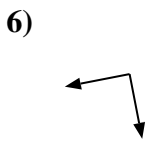
1. _____

2. _____



3. _____

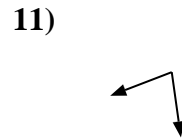
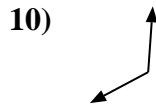
4. _____



5. _____

6. _____

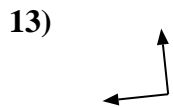
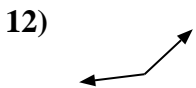
7. _____



8. _____

9. _____

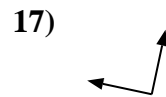
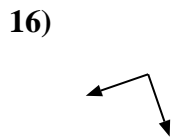
10. _____



11. _____

12. _____

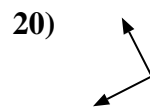
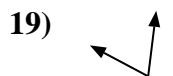
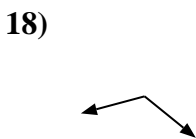
13. _____



14. _____

15. _____

16. _____



17. _____

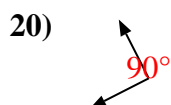
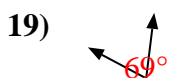
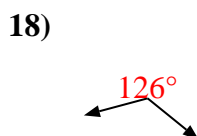
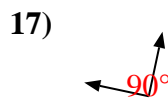
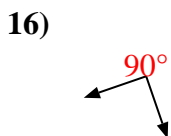
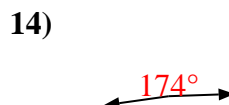
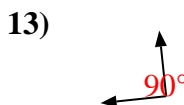
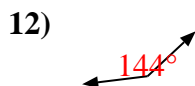
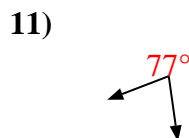
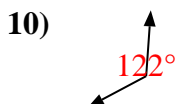
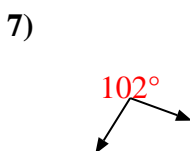
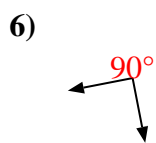
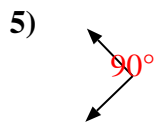
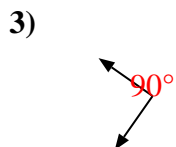
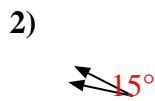
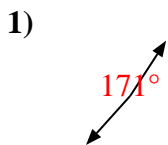

18. _____

19. _____

20. _____



Determine if the angle shown is 'less', 'more' or 'equal' to 90°.



Answers

Ex. less

1. more

2. less

3. equal

4. less

5. equal

6. equal

7. more

8. less

9. less

10. more

11. less

12. more

13. equal

14. more

15. equal

16. equal

17. equal

18. more

19. less

20. equal