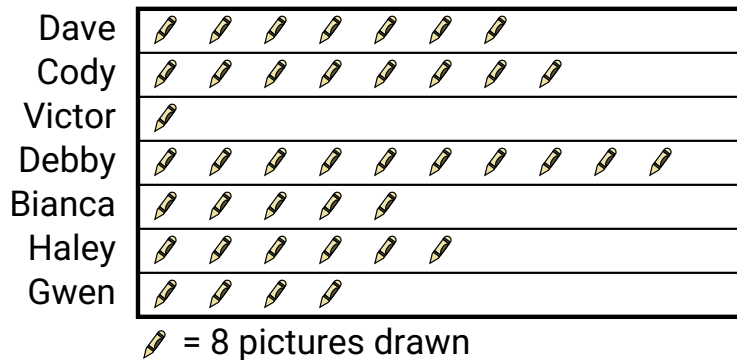


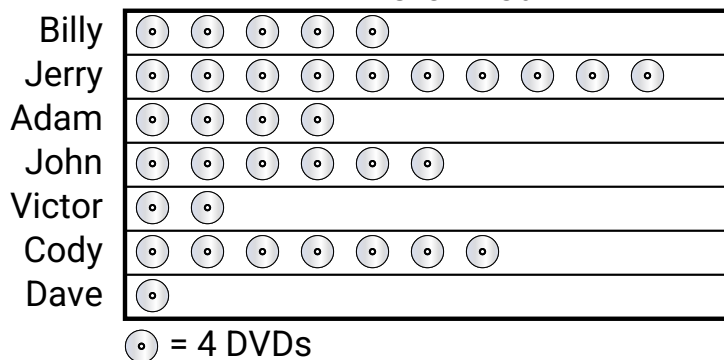


Several students were helping to decorate the school halls by drawing pictures to hang up. The pictograph below shows the number of pictures each student drew.

Pictures Drawn

- 1) Who drew exactly 80 pictures?
- 2) Did Dave or Cody draw more pictures?
- 3) Who drew the most pictures?
- 4) Who drew the fewest pictures?
- 5) How many pictures did Victor draw?

Billy and his friends were comparing the number of movies they owned. They organized the information in the pictograph below.

DVDs owned

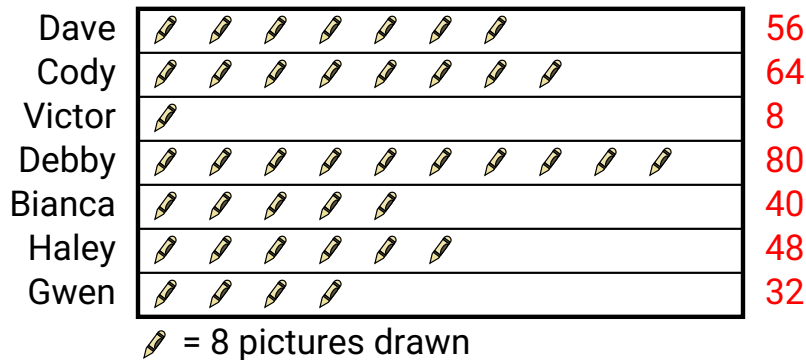
- 6) Who owned the largest number of DVDs?
- 7) Who owned exactly 24 DVDs?
- 8) How many DVDs did Adam own?
- 9) Who owned the fewest DVDs?
- 10) Who had more DVDs, Billy or Jerry?

Answers

1. _____
2. _____
3. _____
4. _____
5. _____
6. _____
7. _____
8. _____
9. _____
10. _____

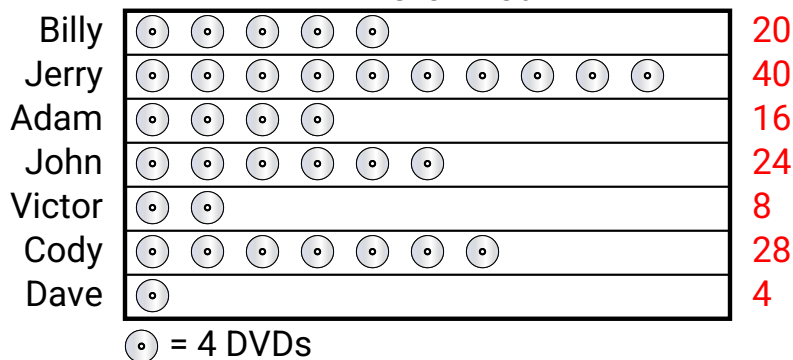


Several students were helping to decorate the school halls by drawing pictures to hang up. The pictograph below shows the number of pictures each student drew.

Pictures Drawn

- 1) Who drew exactly 80 pictures?
- 2) Did Dave or Cody draw more pictures?
- 3) Who drew the most pictures?
- 4) Who drew the fewest pictures?
- 5) How many pictures did Victor draw?

Billy and his friends were comparing the number of movies they owned. They organized the information in the pictograph below.

DVDs owned

- 6) Who owned the largest number of DVDs?
- 7) Who owned exactly 24 DVDs?
- 8) How many DVDs did Adam own?
- 9) Who owned the fewest DVDs?
- 10) Who had more DVDs, Billy or Jerry?

Answers

1. **Debby**
2. **Cody**
3. **Debby**
4. **Victor**
5. **8**
6. **Jerry**
7. **John**
8. **16**
9. **Dave**
10. **Jerry**