



Determine which letter best represents the weight.

Gram (g)

A gram is about the weight of a paperclip.



Kilogram (kg)

A kilogram is about the weight of a thick book.




Remember:

Kilo means 1,000. So a kilogram is 1,000 grams.
1 Kilogram is also about the same weight as 2 pounds.

Answers

1)



Apple

- A. 5 grams
- B. 5 kilograms
- C. 200 kilograms
- D. 200 grams

2)



Vacuum

- A. 90 grams
- B. 20 kilograms
- C. 500 kilograms
- D. 50 grams


3)



Pen

- A. 5 kilograms
- B. 500 grams
- C. 5 grams
- D. 5000 grams

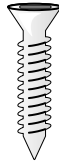
4)



2 Liter of Soda

- A. 3 grams
- B. 50 grams
- C. 100 grams
- D. 2 kilograms

5)



Screw

- A. 500 grams
- B. 1 gram
- C. 500 kilograms
- D. 1 kilogram

6)



Stove

- A. 70 grams
- B. 15 kilograms
- C. 15 grams
- D. 70 kilograms

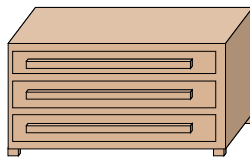
7)



Strawberry

- A. 12 kilograms
- B. 12 grams
- C. 1 gram
- D. 1 kilogram

8)



Dresser

- A. 500 kilograms
- B. 70 kilograms
- C. 20 grams
- D. 350 grams

9)



Bicycle

- A. 100 grams
- B. 15 kilograms
- C. 100 kilograms
- D. 15 grams

- 1. _____
- 2. _____
- 3. _____
- 4. _____
- 5. _____
- 6. _____
- 7. _____
- 8. _____
- 9. _____



Determine which letter best represents the weight.

Gram (g)

A gram is about the weight of a paperclip.



Kilogram (kg)


A kilogram is about the weight of a thick book.



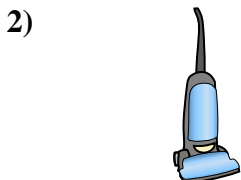
Remember:

Kilo means 1,000. So a kilogram is 1,000 grams.
1 Kilogram is also about the same weight as 2 pounds.

Answers



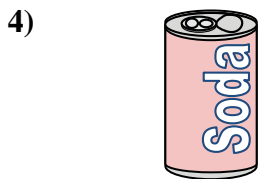
- Apple
- A. 5 grams
 - B. 5 kilograms
 - C. 200 kilograms
 - D. 200 grams



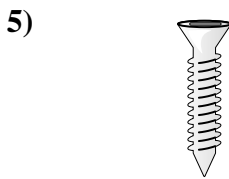
- Vacuum
- A. 90 grams
 - B. 20 kilograms
 - C. 500 kilograms
 - D. 50 grams



- Pen
- A. 5 kilograms
 - B. 500 grams
 - C. 5 grams
 - D. 5000 grams



- 2 Liter of Soda
- A. 3 grams
 - B. 50 grams
 - C. 100 grams
 - D. 2 kilograms



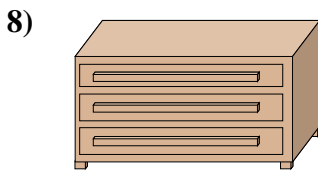
- Screw
- A. 500 grams
 - B. 1 gram
 - C. 500 kilograms
 - D. 1 kilogram



- Stove
- A. 70 grams
 - B. 15 kilograms
 - C. 15 grams
 - D. 70 kilograms



- Strawberry
- A. 12 kilograms
 - B. 12 grams
 - C. 1 gram
 - D. 1 kilogram



- Dresser
- A. 500 kilograms
 - B. 70 kilograms
 - C. 20 grams
 - D. 350 grams



- Bicycle
- A. 100 grams
 - B. 15 kilograms
 - C. 100 kilograms
 - D. 15 grams

- 1. **D**
- 2. **B**
- 3. **C**
- 4. **D**
- 5. **B**
- 6. **D**
- 7. **B**
- 8. **B**
- 9. **B**