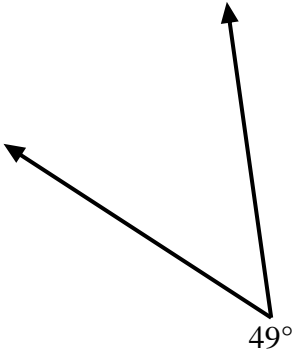


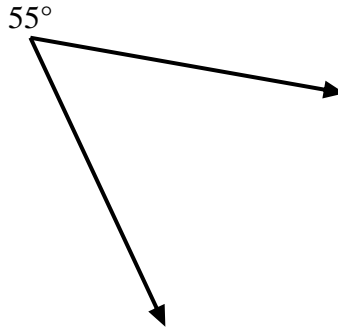


Use a protractor to create a triangle from the figure shown. Answer with the missing angles. Answers will vary.

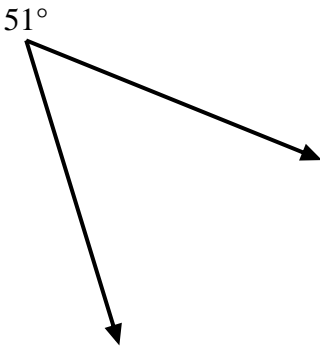
1)



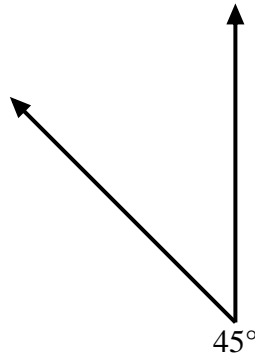
2)



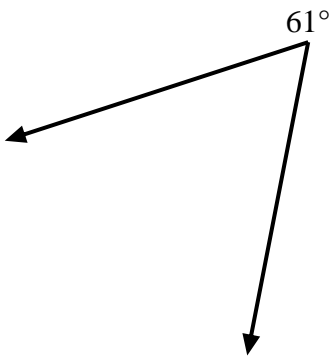
3)



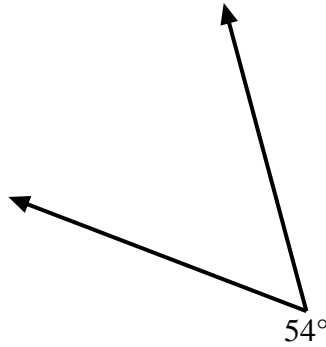
4)



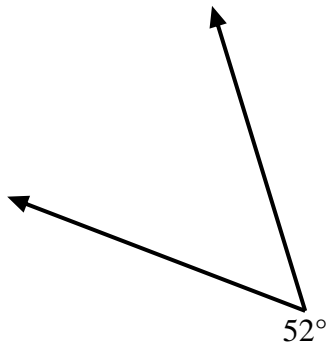
5)



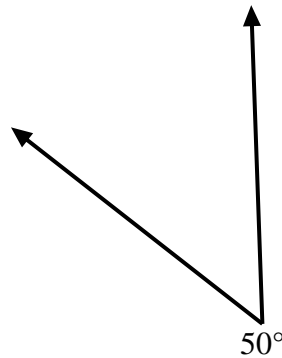
6)



7)



8)



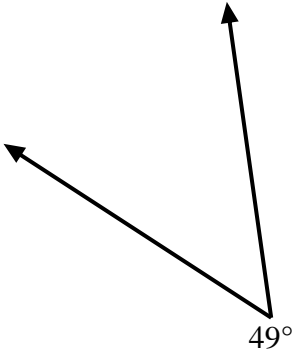
Answers

- 1. \_\_\_\_\_
- 2. \_\_\_\_\_
- 3. \_\_\_\_\_
- 4. \_\_\_\_\_
- 5. \_\_\_\_\_
- 6. \_\_\_\_\_
- 7. \_\_\_\_\_
- 8. \_\_\_\_\_

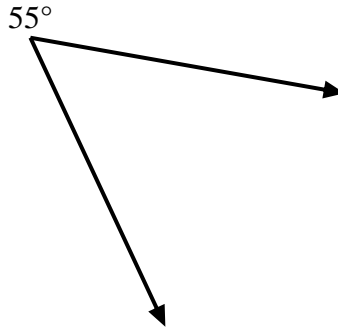


Use a protractor to create a triangle from the figure shown. Answer with the missing angles. Answers will vary.

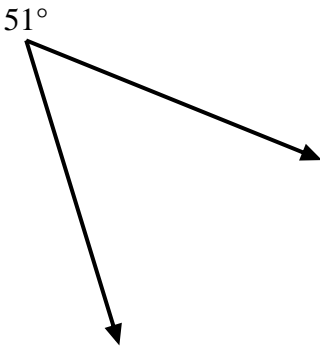
1)



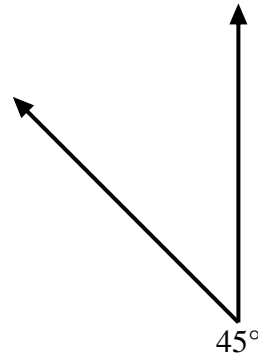
2)



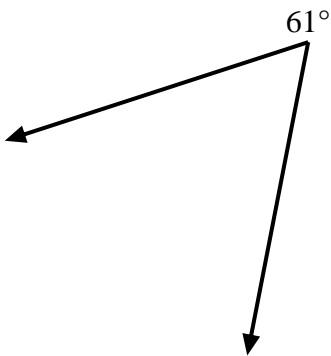
3)



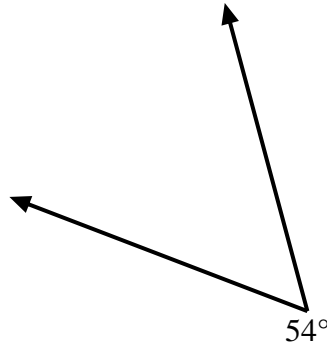
4)



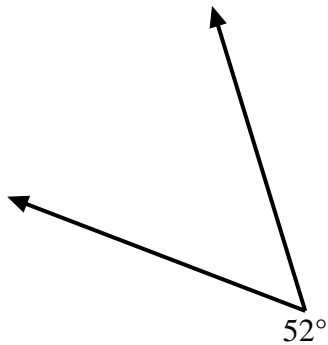
5)



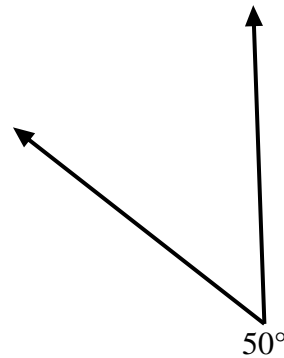
6)



7)



8)



Answers

1.     =131    

2.     =125    

3.     =129    

4.     =135    

5.     =119    

6.     =126    

7.     =128    

8.     =130