



Solve each problem.

1)  $3 + 2 = \underline{\quad}$

2)  $5 + 0 = \underline{\quad}$

3)  $2 + 1 = \underline{\quad}$

4)  $2 + 3 = \underline{\quad}$

5)  $1 + 2 = \underline{\quad}$

6)  $3 + 0 = \underline{\quad}$

7)  $4 + 0 = \underline{\quad}$

8)  $2 + 0 = \underline{\quad}$

9)  $1 - 1 = \underline{\quad}$

10)  $5 - 4 = \underline{\quad}$

11)  $5 - 5 = \underline{\quad}$

12)  $3 - 1 = \underline{\quad}$

13)  $2 - 2 = \underline{\quad}$

14)  $4 - 4 = \underline{\quad}$

15)  $5 - 2 = \underline{\quad}$

16)  $5 - 1 = \underline{\quad}$

**Answers**

1. \_\_\_\_\_

2. \_\_\_\_\_

3. \_\_\_\_\_

4. \_\_\_\_\_

5. \_\_\_\_\_

6. \_\_\_\_\_

7. \_\_\_\_\_

8. \_\_\_\_\_

9. \_\_\_\_\_

10. \_\_\_\_\_

11. \_\_\_\_\_

12. \_\_\_\_\_

13. \_\_\_\_\_

14. \_\_\_\_\_

15. \_\_\_\_\_

16. \_\_\_\_\_



Solve each problem.

1)  $3 + 2 = \underline{5}$

2)  $5 + 0 = \underline{5}$

3)  $2 + 1 = \underline{3}$

4)  $2 + 3 = \underline{5}$

5)  $1 + 2 = \underline{3}$

6)  $3 + 0 = \underline{3}$

7)  $4 + 0 = \underline{4}$

8)  $2 + 0 = \underline{2}$

9)  $1 - 1 = \underline{0}$

10)  $5 - 4 = \underline{1}$

11)  $5 - 5 = \underline{0}$

12)  $3 - 1 = \underline{2}$

13)  $2 - 2 = \underline{0}$

14)  $4 - 4 = \underline{0}$

15)  $5 - 2 = \underline{3}$


16)  $5 - 1 = \underline{4}$

**Answers**1. 52. 53. 34. 55. 36. 37. 48. 29. 010. 111. 012. 213. 014. 015. 316. 4




Solve each problem.


1)  $3 + 2 = \underline{\quad}$




2)  $5 + 0 = \underline{\quad}$




3)  $2 + 1 = \underline{\quad}$




4)  $2 + 3 = \underline{\quad}$




5)  $1 + 2 = \underline{\quad}$




6)  $3 + 0 = \underline{\quad}$




7)  $4 + 0 = \underline{\quad}$




8)  $2 + 0 = \underline{\quad}$



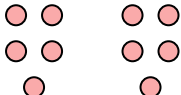
9)  $1 - 1 = \underline{\quad}$




10)  $5 - 4 = \underline{\quad}$




11)  $5 - 5 = \underline{\quad}$




12)  $3 - 1 = \underline{\quad}$



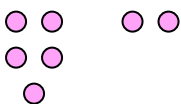
13)  $2 - 2 = \underline{\quad}$



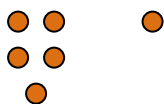
14)  $4 - 4 = \underline{\quad}$



15)  $5 - 2 = \underline{\quad}$



16)  $5 - 1 = \underline{\quad}$



Answers

1. \_\_\_\_\_

2. \_\_\_\_\_

3. \_\_\_\_\_

4. \_\_\_\_\_

5. \_\_\_\_\_

6. \_\_\_\_\_

7. \_\_\_\_\_

8. \_\_\_\_\_

9. \_\_\_\_\_

10. \_\_\_\_\_

11. \_\_\_\_\_

12. \_\_\_\_\_

13. \_\_\_\_\_

14. \_\_\_\_\_

15. \_\_\_\_\_

16. \_\_\_\_\_