


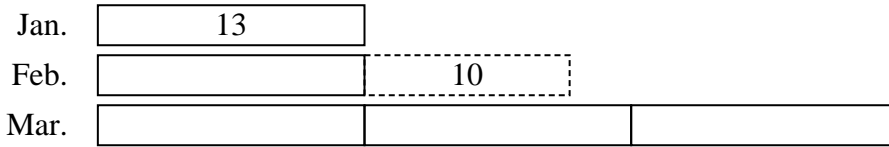


Solve each problem using a tape diagram.

- 1) On Friday a game store sold 29 copies of the new Mario game. On Saturday they sold 4 times as many as on Friday. And then on Sunday they sold 8 less than the amount on Friday. How many did they sell total?



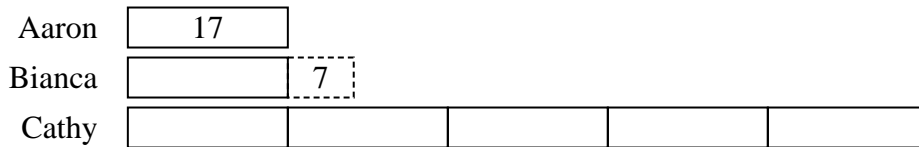
- 2) A musician spent 13 hours practicing in January. In February he practiced for 10 hours longer than he did in January. Then in March he practiced for 3 times as long as January. How hours did he spend practicing?



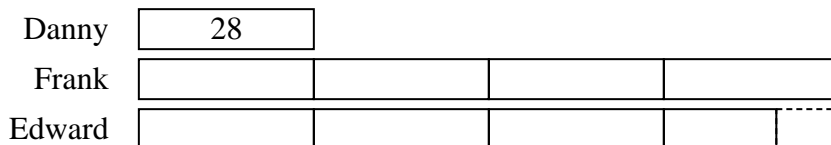
- 3) On Monday morning a store had 28 customer. In the afternoon they had 8 fewer customers than the morning. In the evening they had 4 times as many customers as the morning. How many customers did they have total?



- 4) While playing a video game Aaron, Bianca and Cathy counted the enemies they defeated. Aaron defeated 17. Bianca defeated 7 more than Aaron. And Cathy defeated 5 times as many as Aaron. How many enemies did they defeat total?



- 5) Emily's TV emporium was running a contest to see which employee could sell the most TVs. Frank sold 4 times as many TVs as Danny. Edward sold 10 fewer than Frank. And Danny sold 28 TVs. How many TVs did they sell total?



Answers

1. 166
2. 75
3. 160
4. 126
5. 242



Solve each problem using a tape diagram.

- 1) On Friday a game store sold 26 copies of the new Mario game. On Saturday they sold 5 times as many as on Friday. And then on Sunday they sold 5 less than the amount on Friday. How many did they sell total?

- 2) Janet created an app that she put on the app store. In the first day 15 people downloaded it. On the second day she had 2 times as many downloads. On the third day she had 9 fewer downloads than day 2. How many people downloaded the app in the first 3 days?

- 3) The school book fair sold 27 books on Wednesday. On Friday they sold 5 fewer than Thursday. On Thursday they sold 3 times as many as on Wednesday. How many books did they sell in those three days?

- 4) In a school district the elementary school earned \$27 fundraising. The high school earned 4 times as much as the elementary school and the middle school earned \$5 less than the elementary. How much did they earn total?

- 5) Emily was organizing her pictures on her computer. In folder 1 she had 13 pictures. In folder 2 she had 5 more pictures than folder 1. And in folder 3 she had 4 times as many pictures as folder 1. How many pictures does she have total?

Answers

1. _____

2. _____

3. _____

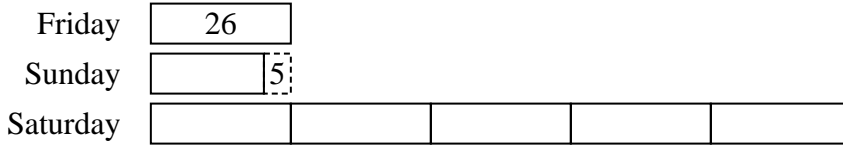
4. _____

5. _____

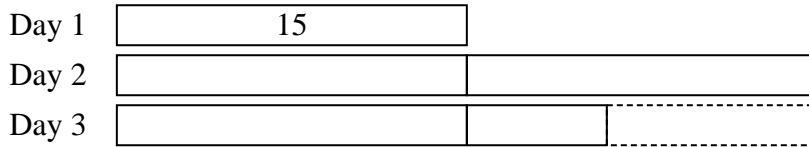


Solve each problem using a tape diagram.

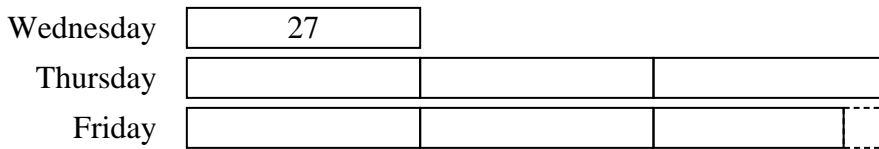
- 1) On Friday a game store sold 26 copies of the new Mario game. On Saturday they sold 5 times as many as on Friday. And then on Sunday they sold 5 less than the amount on Friday. How many did they sell total?



- 2) Janet created an app that she put on the app store. In the first day 15 people downloaded it. On the second day she had 2 times as many downloads. On the third day she had 9 fewer downloads than day 2. How many people downloaded the app in the first 3 days?



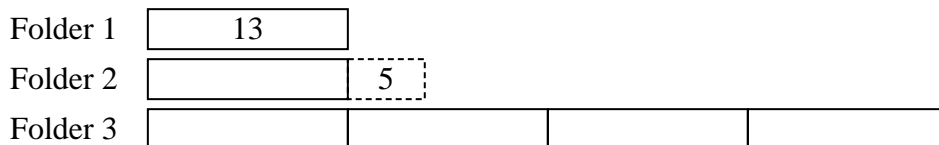
- 3) The school book fair sold 27 books on Wednesday. On Friday they sold 5 fewer than Thursday. On Thursday they sold 3 times as many as on Wednesday. How many books did they sell in those three days?



- 4) In a school district the elementary school earned \$27 fundraising. The high school earned 4 times as much as the elementary school and the middle school earned \$5 less than the elementary. How much did they earn total?



- 5) Emily was organizing her pictures on her computer. In folder 1 she had 13 pictures. In folder 2 she had 5 more pictures than folder 1. And in folder 3 she had 4 times as many pictures as folder 1. How many pictures does she have total?



Answers

1. 177

2. 66

3. 184

4. 157

5. 83



Solve each problem using a tape diagram.

- 1) Faye uploaded a video to youtube that was 22 minutes long. The next week she uploaded a video that was 8 minutes longer. Then the following week she uploaded a video that was 5 times as long as the first week. How many minutes did she upload total?

Week 1	<input type="text" value="22"/>				
Week 2	<input type="text"/>	<input type="text" value="8"/>			
Week 3	<input type="text"/>	<input type="text"/>	<input type="text"/>	<input type="text"/>	<input type="text"/>

- 2) A musician spent 10 hours practicing in January. In February he practiced for 9 hours longer than he did in January. Then in March he practiced for 5 times as long as January. How hours did he spend practicing?

Jan.	<input type="text" value="10"/>				
Feb.	<input type="text"/>	<input type="text" value="9"/>			
Mar.	<input type="text"/>	<input type="text"/>	<input type="text"/>	<input type="text"/>	<input type="text"/>

- 3) On Monday morning a store had 28 customer. In the afternoon they had 10 fewer customers than the morning. In the evening they had 5 times as many customers as the morning. How many customers did they have total?

Morning	<input type="text" value="28"/>				
Afternoon	<input type="text"/>	<input type="text" value="10"/>			
Evening	<input type="text"/>	<input type="text"/>	<input type="text"/>	<input type="text"/>	<input type="text"/>

- 4) Amy, Billy and Carl were working on a school project. Amy spent 17 minutes on her portion. Billy spent 5 times as long on his portion. And Carl spent 7 minutes fewer than Billy did. How many minutes total were they working?

Amy	<input type="text" value="17"/>				
Billy	<input type="text"/>	<input type="text"/>	<input type="text"/>	<input type="text"/>	<input type="text"/>
Carl	<input type="text"/>	<input type="text"/>	<input type="text"/>	<input type="text"/>	<input type="text"/>

- 5) At the fair the ring toss booth took in \$26 the first hour. The second hour they took \$9 less than the first hour. And the third hour they took 5 times the amount in the first hour. How much money did the ring toss booth take in the first 3 hours.

First Hour	<input type="text" value="26"/>				
Second Hour	<input type="text"/>	<input type="text" value="9"/>			
Third Hour	<input type="text"/>	<input type="text"/>	<input type="text"/>	<input type="text"/>	<input type="text"/>

Answers

1. 162
2. 79
3. 186
4. 180
5. 173



Solve each problem using a tape diagram.

- 1) Faye uploaded a video to youtube that was 22 minutes long. The next week she uploaded a video that was 9 minutes longer. Then the following week she uploaded a video that was 2 times as long as the first week. How many minutes did she upload total?

- 2) A musician spent 25 hours practicing in January. In February he practiced for 9 hours longer than he did in January. Then in March he practiced for 2 times as long as January. How hours did he spend practicing?

- 3) The school book fair sold 30 books on Wednesday. On Friday they sold 5 fewer than Thursday. On Thursday they sold 5 times as many as on Wednesday. How many books did they sell in those three days?

- 4) Amy, Billy and Carl were working on a school project. Amy spent 19 minutes on her portion. Billy spent 3 times as long on his portion. And Carl spent 6 minutes fewer than Billy did. How many minutes total were they working?

- 5) At the fair the ring toss booth took in \$13 the first hour. The second hour they took \$7 less than the first hour. And the third hour they took 2 times the amount in the first hour. How much money did the ring toss booth take in the first 3 hours.

Answers

1. _____

2. _____

3. _____

4. _____

5. _____

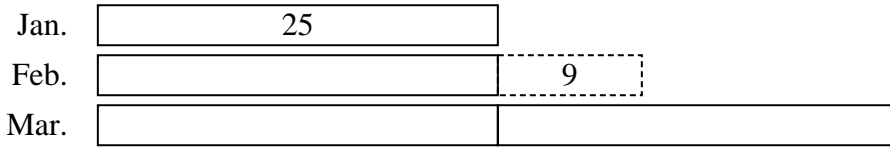


Solve each problem using a tape diagram.

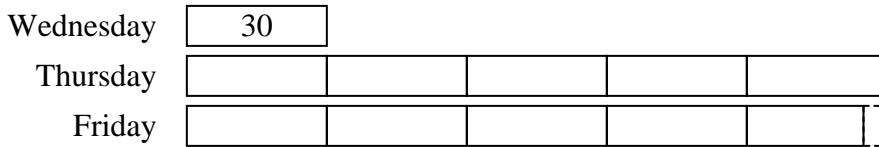
- 1) Faye uploaded a video to youtube that was 22 minutes long. The next week she uploaded a video that was 9 minutes longer. Then the following week she uploaded a video that was 2 times as long as the first week. How many minutes did she upload total?



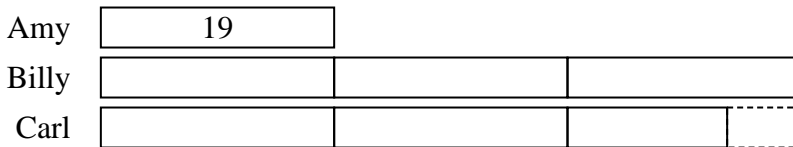
- 2) A musician spent 25 hours practicing in January. In February he practiced for 9 hours longer than he did in January. Then in March he practiced for 2 times as long as January. How hours did he spend practicing?



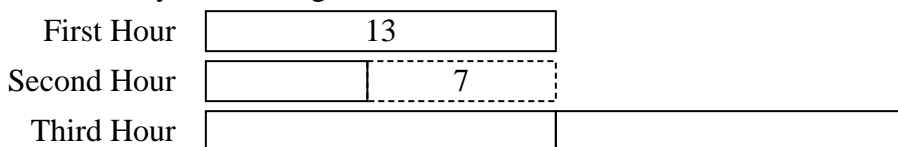
- 3) The school book fair sold 30 books on Wednesday. On Friday they sold 5 fewer than Thursday. On Thursday they sold 5 times as many as on Wednesday. How many books did they sell in those three days?



- 4) Amy, Billy and Carl were working on a school project. Amy spent 19 minutes on her portion. Billy spent 3 times as long on his portion. And Carl spent 6 minutes fewer than Billy did. How many minutes total were they working?



- 5) At the fair the ring toss booth took in \$13 the first hour. The second hour they took \$7 less than the first hour. And the third hour they took 2 times the amount in the first hour. How much money did the ring toss booth take in the first 3 hours.



Answers

1. 97
2. 109
3. 325
4. 127
5. 45



Solve each problem using a tape diagram.

- 1) Faye uploaded a video to youtube that was 30 minutes long. The next week she uploaded a video that was 9 minutes longer. Then the following week she uploaded a video that was 4 times as long as the first week. How many minutes did she upload total?

- 2) Janet created an app that she put on the app store. In the first day 16 people downloaded it. On the second day she had 2 times as many downloads. On the third day she had 5 fewer downloads than day 2. How many people downloaded the app in the first 3 days?

- 3) The school book fair sold 19 books on Wednesday. On Friday they sold 5 fewer than Thursday. On Thursday they sold 2 times as many as on Wednesday. How many books did they sell in those three days?

- 4) In a school district the elementary school earned \$18 fundraising. The high school earned 4 times as much as the elementary school and the middle school earned \$7 less than the elementary. How much did they earn total?

- 5) Emily was organizing her pictures on her computer. In folder 1 she had 29 pictures. In folder 2 she had 5 more pictures than folder 1. And in folder 3 she had 4 times as many pictures as folder 1. How many pictures does she have total?

Answers

1. _____

2. _____

3. _____

4. _____

5. _____

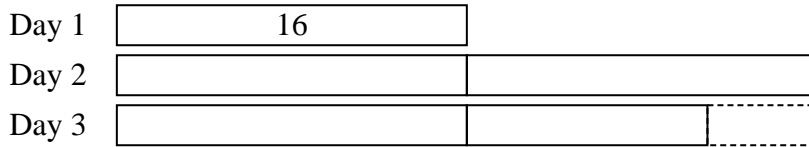


Solve each problem using a tape diagram.


- 1) Faye uploaded a video to youtube that was 30 minutes long. The next week she uploaded a video that was 9 minutes longer. Then the following week she uploaded a video that was 4 times as long as the first week. How many minutes did she upload total?



- 2) Janet created an app that she put on the app store. In the first day 16 people downloaded it. On the second day she had 2 times as many downloads. On the third day she had 5 fewer downloads than day 2. How many people downloaded the app in the first 3 days?



- 3) The school book fair sold 19 books on Wednesday. On Friday they sold 5 fewer than Thursday. On Thursday they sold 2 times as many as on Wednesday. How many books did they sell in those three days?



- 4) In a school district the elementary school earned \$18 fundraising. The high school earned 4 times as much as the elementary school and the middle school earned \$7 less than the elementary. How much did they earn total?



- 5) Emily was organizing her pictures on her computer. In folder 1 she had 29 pictures. In folder 2 she had 5 more pictures than folder 1. And in folder 3 she had 4 times as many pictures as folder 1. How many pictures does she have total?



Answers

1. 189
2. 75
3. 90
4. 101
5. 179



Solve each problem using a tape diagram.

- 1) On Friday a game store sold 24 copies of the new Mario game. On Saturday they sold 4 times as many as on Friday. And then on Sunday they sold 8 less than the amount on Friday. How many did they sell total?

- 2) Janet created an app that she put on the app store. In the first day 25 people downloaded it. On the second day she had 2 times as many downloads. On the third day she had 10 fewer downloads than day 2. How many people downloaded the app in the first 3 days?

- 3) On Monday morning a store had 16 customer. In the afternoon they had 5 fewer customers than the morning. In the evening they had 4 times as many customers as the morning. How many customers did they have total?

- 4) Amy, Billy and Carl were working on a school project. Amy spent 15 minutes on her portion. Billy spent 5 times as long on his portion. And Carl spent 10 minutes fewer than Billy did. How many minutes total were they working?

- 5) Emily was organizing her pictures on her computer. In folder 1 she had 10 pictures. In folder 2 she had 7 more pictures than folder 1. And in folder 3 she had 4 times as many pictures as folder 1. How many pictures does she have total?

Answers

1. _____

2. _____

3. _____


4. _____

5. _____

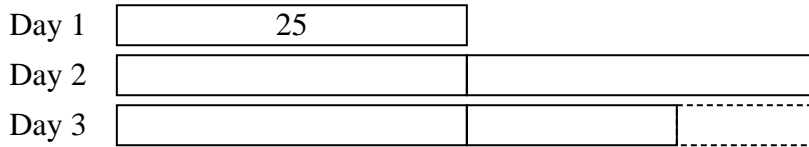


Solve each problem using a tape diagram.

- 1) On Friday a game store sold 24 copies of the new Mario game. On Saturday they sold 4 times as many as on Friday. And then on Sunday they sold 8 less than the amount on Friday. How many did they sell total?



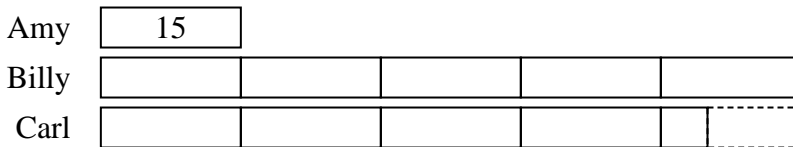
- 2) Janet created an app that she put on the app store. In the first day 25 people downloaded it. On the second day she had 2 times as many downloads. On the third day she had 10 fewer downloads than day 2. How many people downloaded the app in the first 3 days?



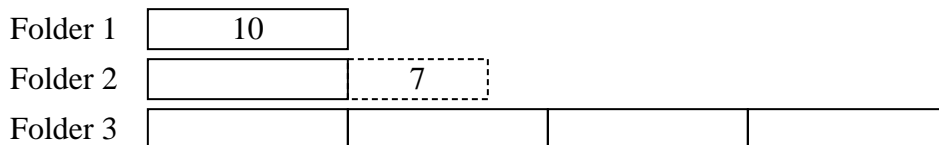
- 3) On Monday morning a store had 16 customer. In the afternoon they had 5 fewer customers than the morning. In the evening they had 4 times as many customers as the morning. How many customers did they have total?



- 4) Amy, Billy and Carl were working on a school project. Amy spent 15 minutes on her portion. Billy spent 5 times as long on his portion. And Carl spent 10 minutes fewer than Billy did. How many minutes total were they working?



- 5) Emily was organizing her pictures on her computer. In folder 1 she had 10 pictures. In folder 2 she had 7 more pictures than folder 1. And in folder 3 she had 4 times as many pictures as folder 1. How many pictures does she have total?



Answers

1. **136**
2. **115**
3. **91**
4. **155**
5. **67**



Solve each problem using a tape diagram.

- 1) On Friday a game store sold 27 copies of the new Mario game. On Saturday they sold 5 times as many as on Friday. And then on Sunday they sold 7 less than the amount on Friday. How many did they sell total?

- 2) A musician spent 11 hours practicing in January. In February he practiced for 5 hours longer than he did in January. Then in March he practiced for 5 times as long as January. How hours did he spend practicing?

- 3) Alice, Bobby and Charles were collecting cans. Charles collected 4 times as many cans as Alice. Alice collected 20 cans. And Bobby collected 10 more cans than Alice. How many cans did they collect total?

- 4) Amy, Billy and Carl were working on a school project. Amy spent 30 minutes on her portion. Billy spent 5 times as long on his portion. And Carl spent 9 minutes fewer than Billy did. How many minutes total were they working?

- 5) Emily's TV emporium was running a contest to see which employee could sell the most TVs. Frank sold 5 times as many TVs as Danny. Edward sold 9 fewer than Frank. And Danny sold 21 TVs. How many TVs did they sell total?

Answers

1. _____

2. _____

3. _____

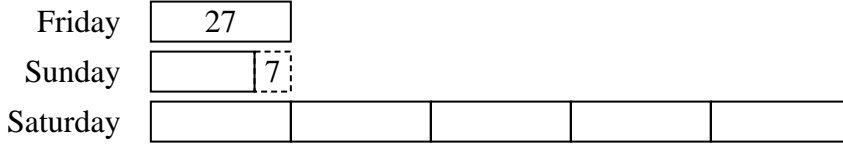
4. _____

5. _____

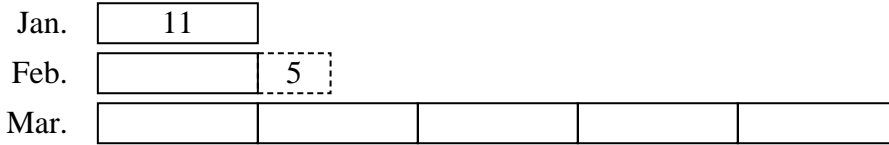


Solve each problem using a tape diagram.

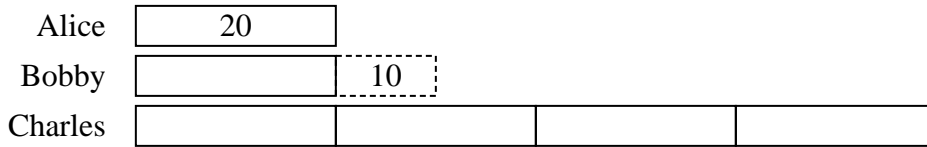
- 1) On Friday a game store sold 27 copies of the new Mario game. On Saturday they sold 5 times as many as on Friday. And then on Sunday they sold 7 less than the amount on Friday. How many did they sell total?



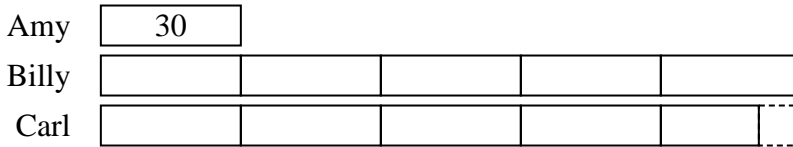
- 2) A musician spent 11 hours practicing in January. In February he practiced for 5 hours longer than he did in January. Then in March he practiced for 5 times as long as January. How hours did he spend practicing?



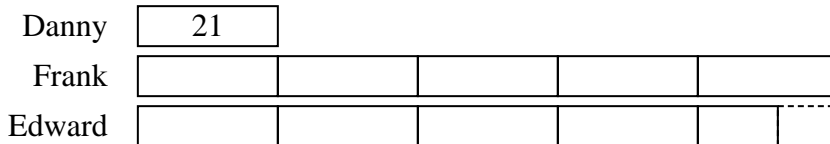
- 3) Alice, Bobby and Charles were collecting cans. Charles collected 4 times as many cans as Alice. Alice collected 20 cans. And Bobby collected 10 more cans than Alice. How many cans did they collect total?



- 4) Amy, Billy and Carl were working on a school project. Amy spent 30 minutes on her portion. Billy spent 5 times as long on his portion. And Carl spent 9 minutes fewer than Billy did. How many minutes total were they working?



- 5) Emily's TV emporium was running a contest to see which employee could sell the most TVs. Frank sold 5 times as many TVs as Danny. Edward sold 9 fewer than Frank. And Danny sold 21 TVs. How many TVs did they sell total?



Answers

1. 182
2. 82
3. 130
4. 321
5. 222



Solve each problem using a tape diagram.

- 1) Victor was reading a book. He read 16 pages on Monday and 4 times as many pages on Tuesday. On Wednesday he read 10 fewer pages than the amount he read on Tuesday. How many pages did he read total?

- 2) In April, Larry's Lawn Care mowed 15 lawns. They mowed 4 times as many in May and 8 fewer in June. How many lawns did they mow over those three months?

- 3) Alice, Bobby and Charles were collecting cans. Charles collected 5 times as many cans as Alice. Alice collected 12 cans. And Bobby collected 8 more cans than Alice. How many cans did they collect total?

- 4) Amy, Billy and Carl were working on a school project. Amy spent 21 minutes on her portion. Billy spent 4 times as long on his portion. And Carl spent 5 minutes fewer than Billy did. How many minutes total were they working?

- 5) Emily was organizing her pictures on her computer. In folder 1 she had 18 pictures. In folder 2 she had 10 more pictures than folder 1. And in folder 3 she had 3 times as many pictures as folder 1. How many pictures does she have total?

Answers

1. _____

2. _____

3. _____


4. _____

5. _____

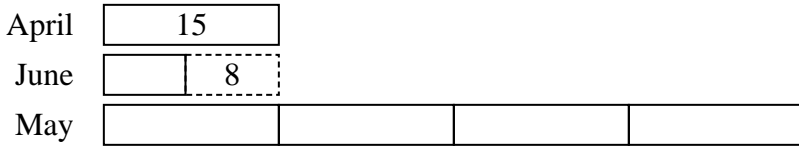


Solve each problem using a tape diagram.

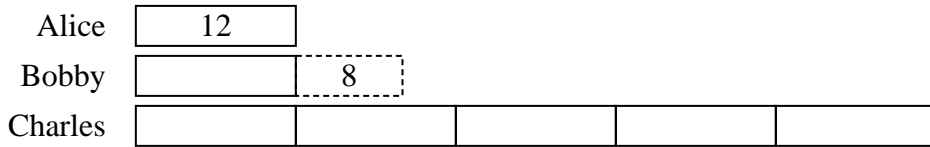
- 1) Victor was reading a book. He read 16 pages on Monday and 4 times as many pages on Tuesday. On Wednesday he read 10 fewer pages than the amount he read on Tuesday. How many pages did he read total?




- 2) In April, Larry's Lawn Care mowed 15 lawns. They mowed 4 times as many in May and 8 fewer in June. How many lawns did they mow over those three months?



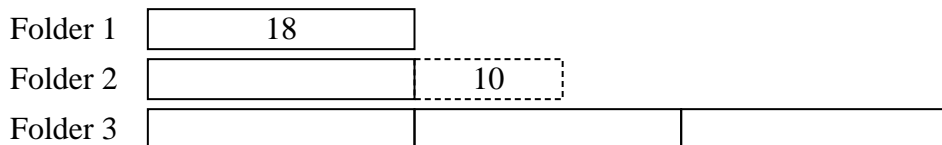
- 3) Alice, Bobby and Charles were collecting cans. Charles collected 5 times as many cans as Alice. Alice collected 12 cans. And Bobby collected 8 more cans than Alice. How many cans did they collect total?



- 4) Amy, Billy and Carl were working on a school project. Amy spent 21 minutes on her portion. Billy spent 4 times as long on his portion. And Carl spent 5 minutes fewer than Billy did. How many minutes total were they working?



- 5) Emily was organizing her pictures on her computer. In folder 1 she had 18 pictures. In folder 2 she had 10 more pictures than folder 1. And in folder 3 she had 3 times as many pictures as folder 1. How many pictures does she have total?



Answers

1. 134
2. 82
3. 92
4. 184
5. 100