




Use the groups to answer each question.

Answers

- 1) a. How many groups of 100 are there?
b. How many small blocks are there total?

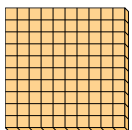


1. ____

2. ____

3. ____

- 2) a. How many groups of 100 are there?
b. How many small blocks are there total?

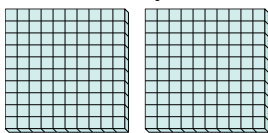


4. ____

5. ____

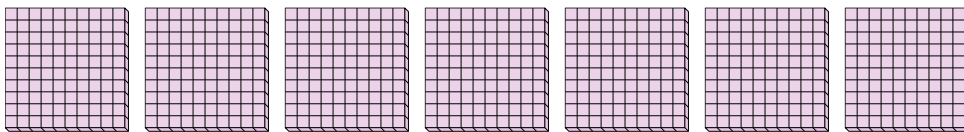
6. ____

- 3) a. How many groups of 100 are there?
b. How many small blocks are there total?




7. ____

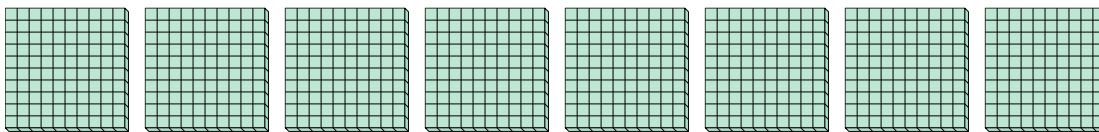
- 4) a. How many groups of 100 are there?
b. How many small blocks are there total?



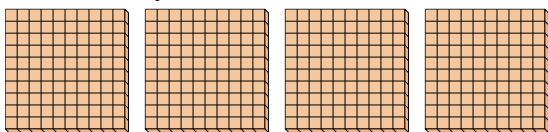
- 5) a. How many groups of 100 are there?
b. How many small blocks are there total?



- 6) a. How many groups of 100 are there?
b. How many small blocks are there total?



- 7) a. How many groups of 100 are there?
b. How many small blocks are there total?






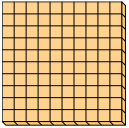
Use the groups to answer each question.

Answers

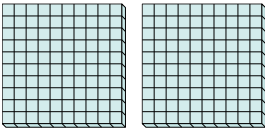
- 1) a. How many groups of 100 are there?
b. How many small blocks are there total?

1. 3 300

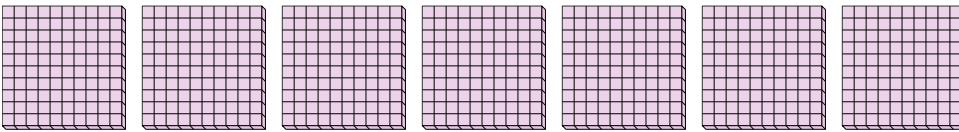
- 2) a. How many groups of 100 are there?
b. How many small blocks are there total?

2. 1 1003. 2 200


- 3) a. How many groups of 100 are there?
b. How many small blocks are there total?

4. 7 7005. 9 9006. 8 8007. 4 400

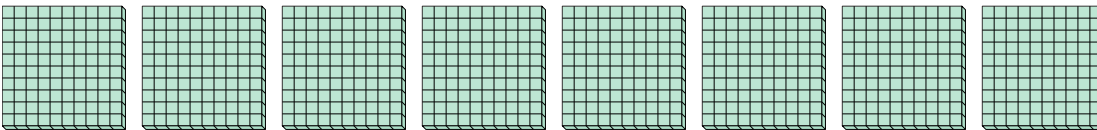
- 4) a. How many groups of 100 are there?
b. How many small blocks are there total?



- 5) a. How many groups of 100 are there?
b. How many small blocks are there total?



- 6) a. How many groups of 100 are there?
b. How many small blocks are there total?



- 7) a. How many groups of 100 are there?
b. How many small blocks are there total?

