




Use the groups to answer each question.

**Answers**

- 1) a. How many groups of 100 are there?
- b. How many small blocks are there total?

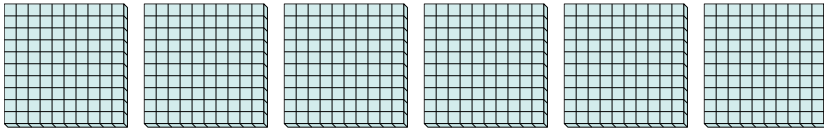


1. \_\_\_\_ \_\_\_\_

2. \_\_\_\_ \_\_\_\_

3. \_\_\_\_ \_\_\_\_

- 2) a. How many groups of 100 are there?
- b. How many small blocks are there total?

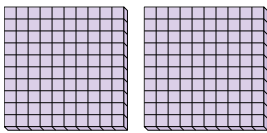


4. \_\_\_\_ \_\_\_\_

5. \_\_\_\_ \_\_\_\_

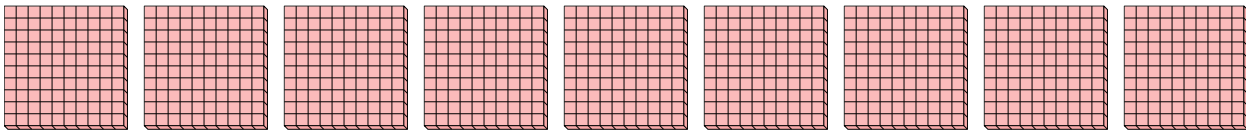
6. \_\_\_\_ \_\_\_\_

- 3) a. How many groups of 100 are there?
- b. How many small blocks are there total?

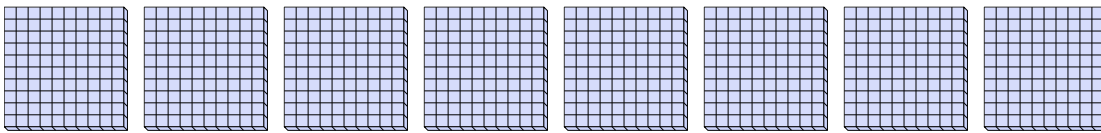


7. \_\_\_\_ \_\_\_\_


- 4) a. How many groups of 100 are there?
- b. How many small blocks are there total?



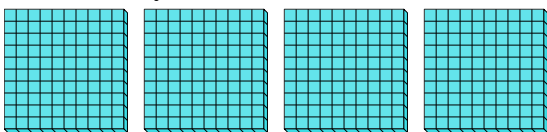
- 5) a. How many groups of 100 are there?
- b. How many small blocks are there total?



- 6) a. How many groups of 100 are there?
- b. How many small blocks are there total?




- 7) a. How many groups of 100 are there?
- b. How many small blocks are there total?



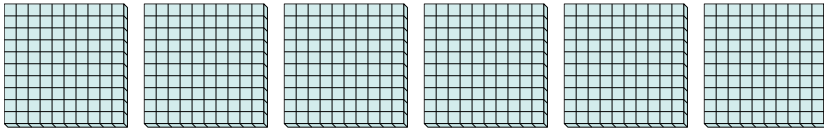


Use the groups to answer each question.

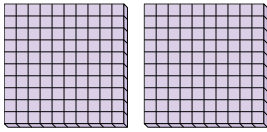
- 1) a. How many groups of 100 are there?  
b. How many small blocks are there total?



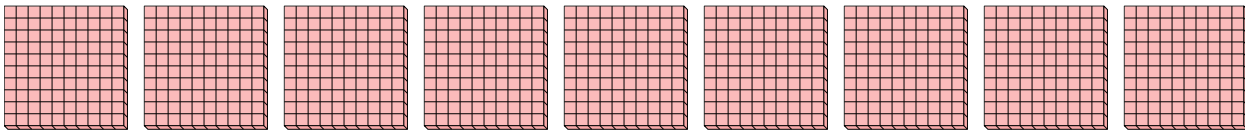
- 2) a. How many groups of 100 are there?  
b. How many small blocks are there total?



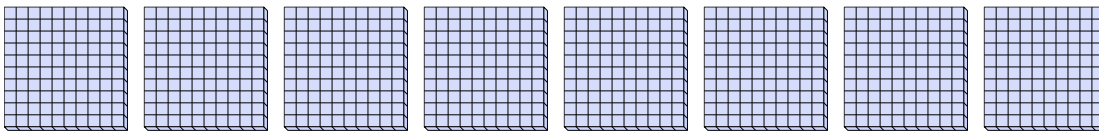
- 3) a. How many groups of 100 are there?  
b. How many small blocks are there total?




- 4) a. How many groups of 100 are there?  
b. How many small blocks are there total?



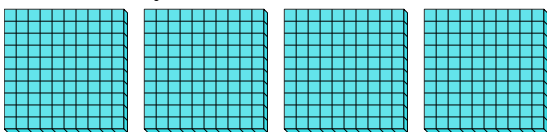
- 5) a. How many groups of 100 are there?  
b. How many small blocks are there total?



- 6) a. How many groups of 100 are there?  
b. How many small blocks are there total?



- 7) a. How many groups of 100 are there?  
b. How many small blocks are there total?



**Answers**

1. 3 300

2. 6 600

3. 2 200

4. 9 900

5. 8 800

6. 1 100

7. 4 400