



Determine if the number of shapes is even or odd.

Answers



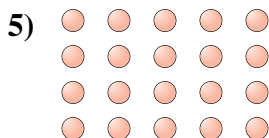
1. _____

2. _____



3. _____

4. _____



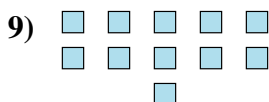
5. _____

6. _____



7. _____

8. _____



9. _____

10. _____



Determine if the number of shapes is even or odd.



7



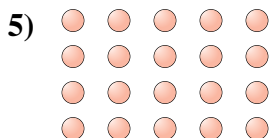
18



6



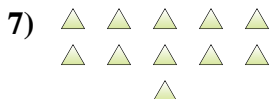
7



20



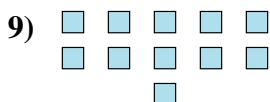
9



11



5



11



6

Answers

1. odd

2. even

3. even

4. odd

5. even

6. odd

7. odd

8. odd

9. odd

10. even