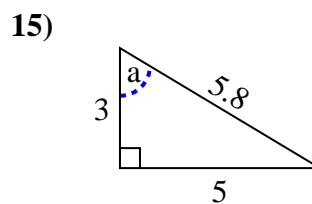
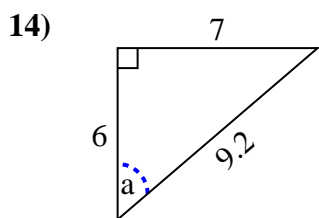
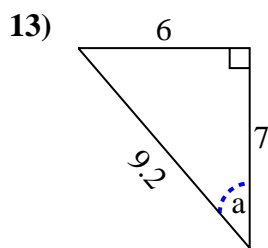
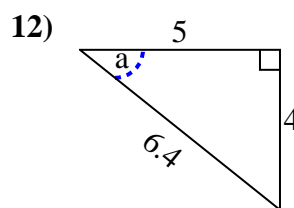
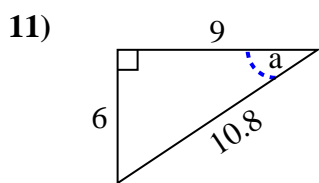
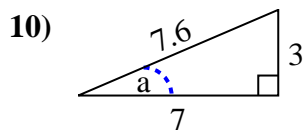
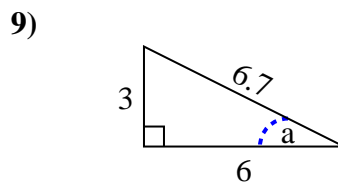
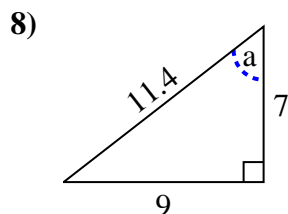
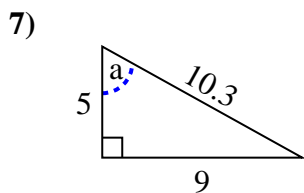
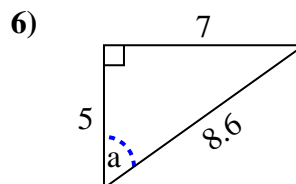
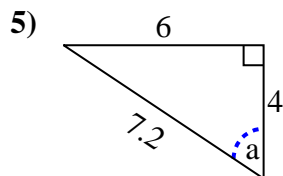
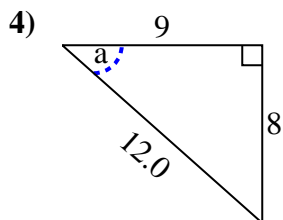
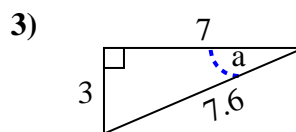
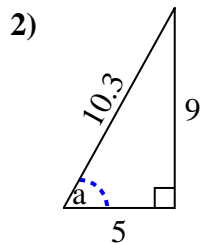
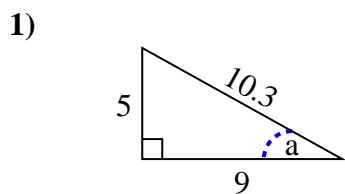


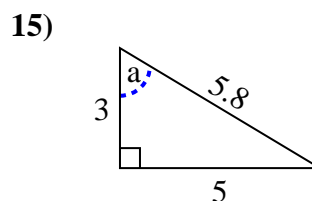
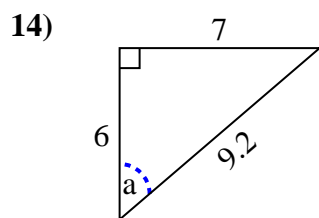
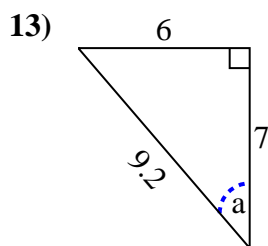
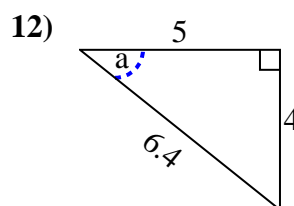
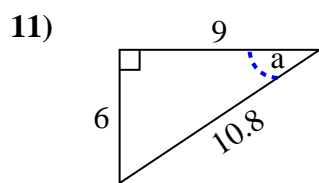
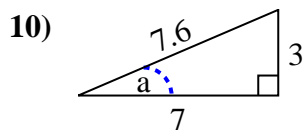
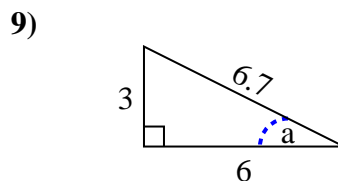
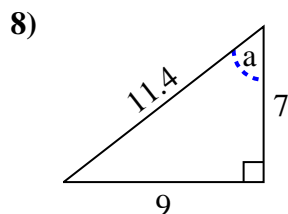
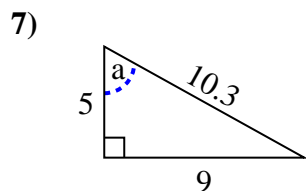
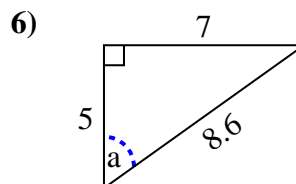
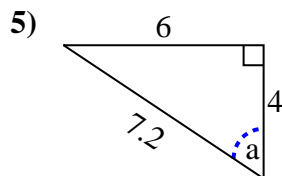
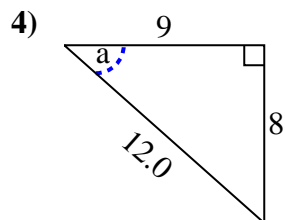
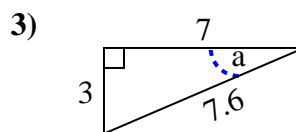
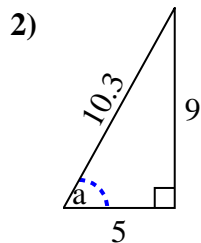
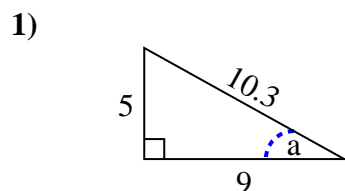


Identify the Opposite, Adjacent and Hypotenuse of Angle a.

Answers



1. _____
2. _____
3. _____
4. _____
5. _____
6. _____
7. _____
8. _____
9. _____
10. _____
11. _____
12. _____
13. _____
14. _____
15. _____

Identify the Opposite, Adjacent and Hypotenuse of Angle a .**Answers**1. 5, 9, 10.32. 9, 5, 10.33. 3, 7, 7.64. 8, 9, 12.05. 6, 4, 7.26. 7, 5, 8.67. 9, 5, 10.38. 9, 7, 11.49. 3, 6, 6.710. 3, 7, 7.611. 6, 9, 10.812. 4, 5, 6.413. 6, 7, 9.214. 7, 6, 9.215. 5, 3, 5.8