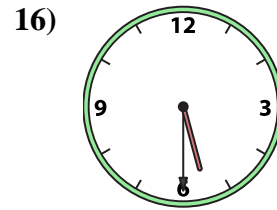
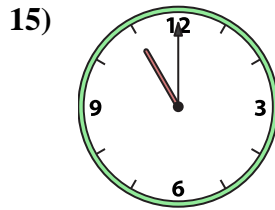
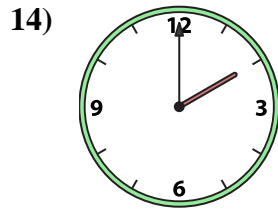
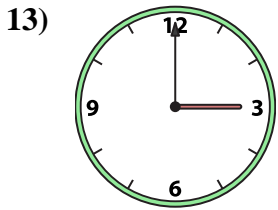
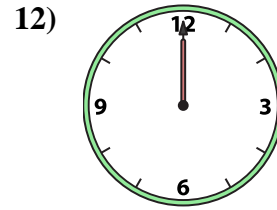
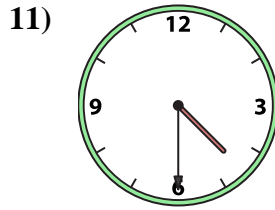
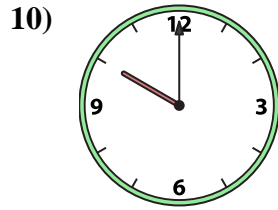
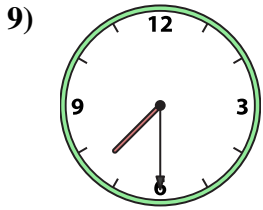
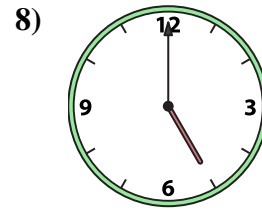
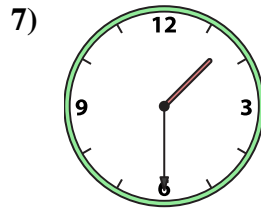
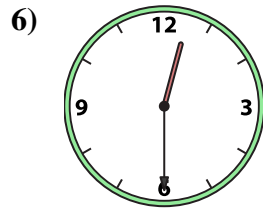
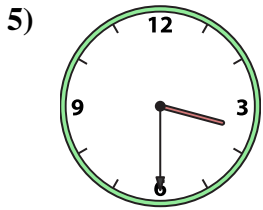
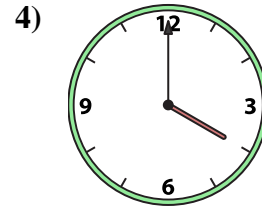
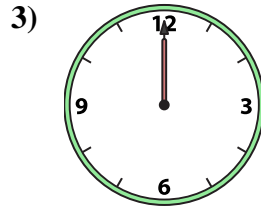
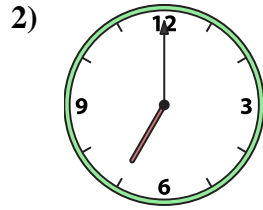





Match the analog clock to the digital clock.



A. 11:00

B. 1:00

C. 5:00

D. 4:30

E. 4:00

F. 3:30

G. 5:30

H. 7:30

I. 12:30

J. 2:00

K. 10:00

L. 7:00

M. 12:00

N. 1:30

O. 3:00

P. 12:00

Answers

1. _____

2. _____

3. _____

4. _____

5. _____

6. _____

7. _____

8. _____

9. _____

10. _____

11. _____

12. _____

13. _____

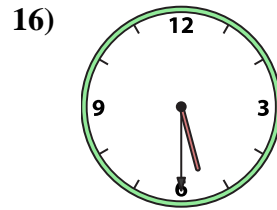
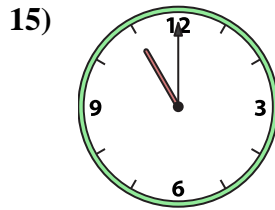
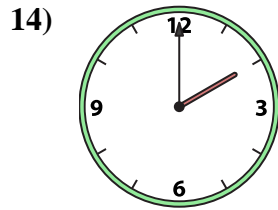
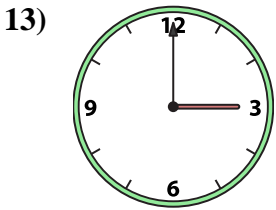
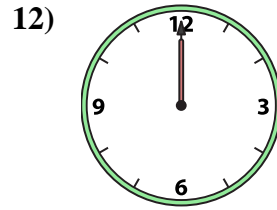
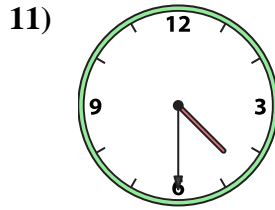
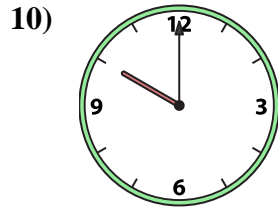
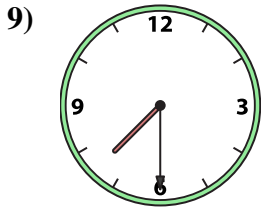
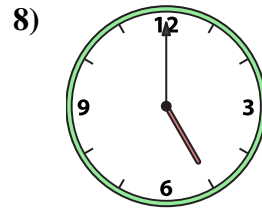
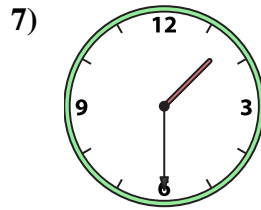
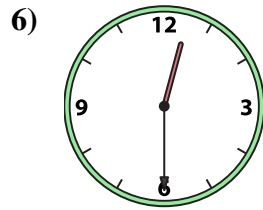
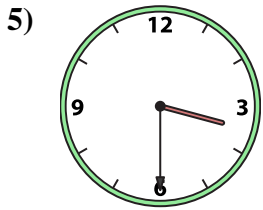
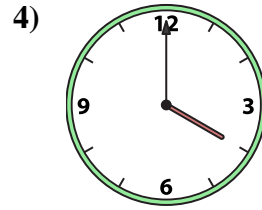
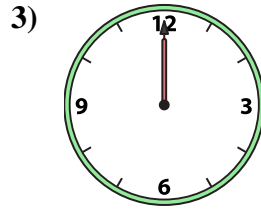
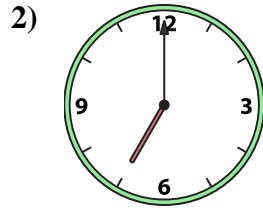

14. _____

15. _____

16. _____



Match the analog clock to the digital clock.



A. 11:00

B. 1:00

C. 5:00

D. 4:30

E. 4:00

F. 3:30

G. 5:30

H. 7:30

I. 12:30

J. 2:00

K. 10:00

L. 7:00

M. 12:00

N. 1:30

O. 3:00

P. 12:00

Answers

1. **B**

2. **L**

3. **M**

4. **E**

5. **F**

6. **I**

7. **N**

8. **C**

9. **H**

10. **K**

11. **D**

12. **P**

13. **O**

14. **J**

15. **A**

16. **G**