



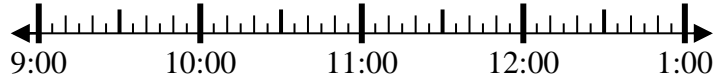
Solve each problem.

Answers

1) Start: 9:20

Elapsed: \_\_\_\_\_

End: 10:45

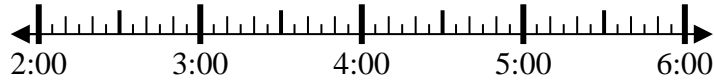


1. \_\_\_\_\_

2) Start: 2:00

Elapsed: \_\_\_\_\_

End: 4:55



2. \_\_\_\_\_

3) Start: 7:40

Elapsed: \_\_\_\_\_

End: 9:55

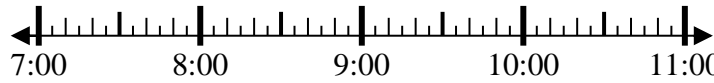


3. \_\_\_\_\_

4) Start: 7:15

Elapsed: \_\_\_\_\_

End: 8:25



4. \_\_\_\_\_

5) Start: 11:15

Elapsed: \_\_\_\_\_

End: 1:40



5. \_\_\_\_\_

6) Start: 5:30

Elapsed: \_\_\_\_\_

End: 6:55



6. \_\_\_\_\_

7) Start: 12:00

Elapsed: \_\_\_\_\_

End: 2:40

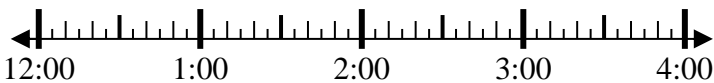


7. \_\_\_\_\_

8) Start: 12:15

Elapsed: \_\_\_\_\_

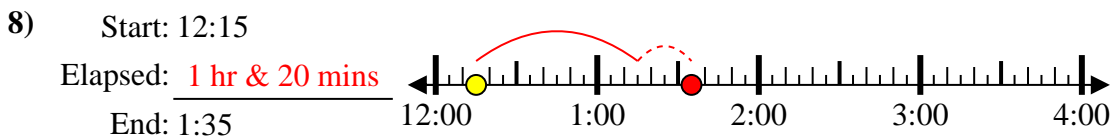
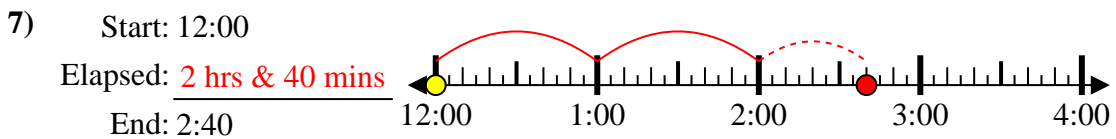
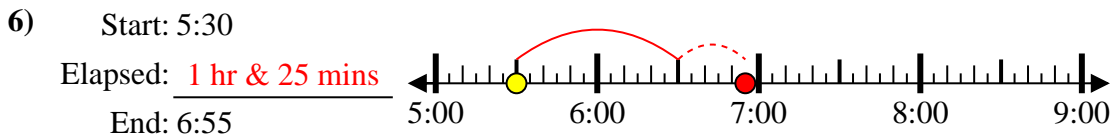
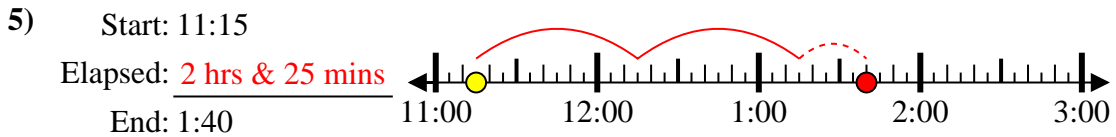
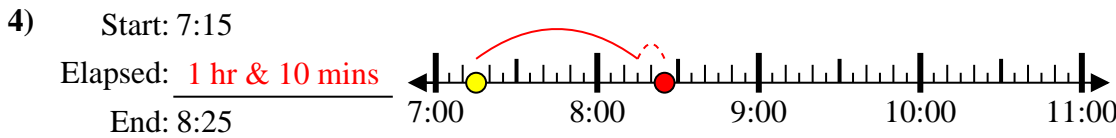
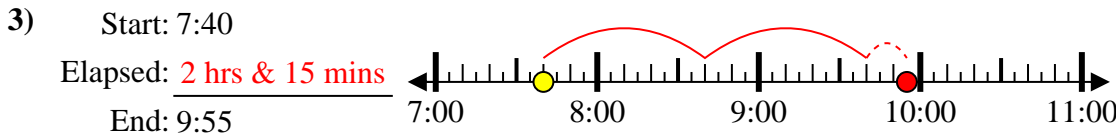
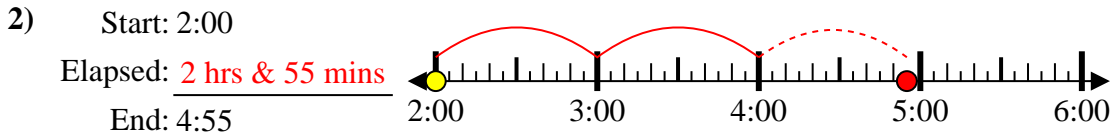
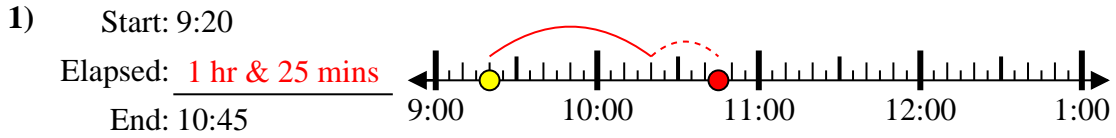
End: 1:35



8. \_\_\_\_\_



Solve each problem.



Answers

1. 1 hr & 25 mins

2. 2 hrs & 55 mins

3. 2 hrs & 15 mins

4. 1 hr & 10 mins

5. 2 hrs & 25 mins

6. 1 hr & 25 mins

7. 2 hrs & 40 mins

8. 1 hr & 20 mins