

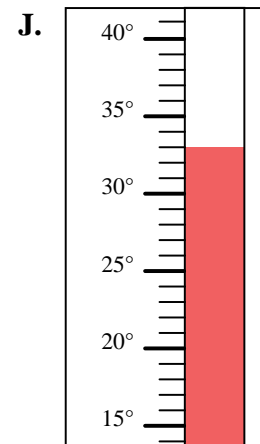
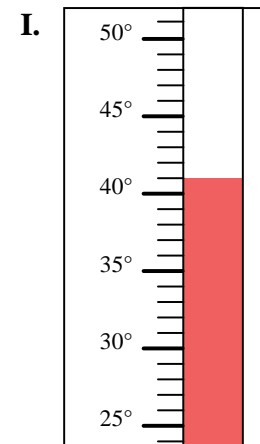
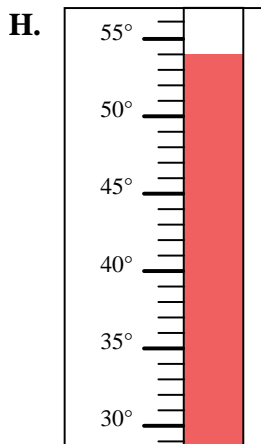
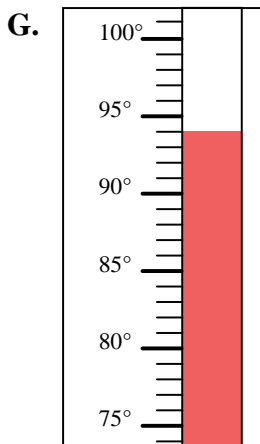
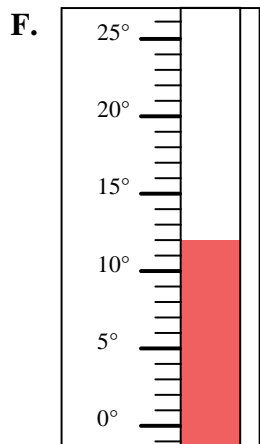
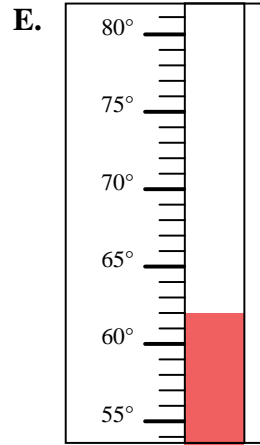
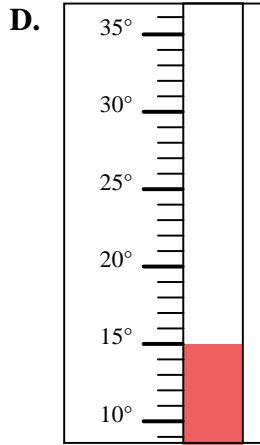
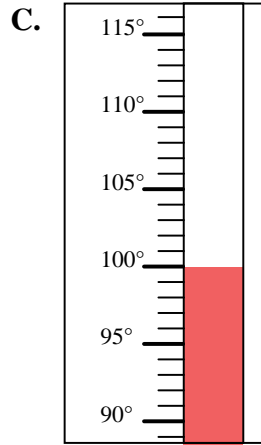
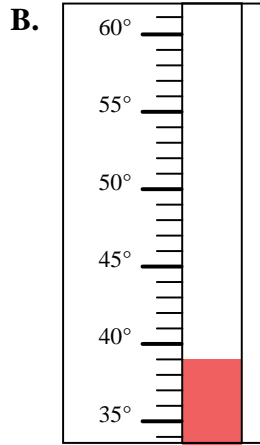
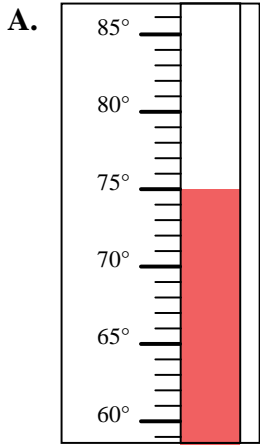


Determine which letter best answers each question.

**Answers**

- 1) Which thermometer best represents the temperature 39°?
- 2) Which thermometer best represents the temperature 12°?
- 3) Which thermometer best represents the temperature 75°?
- 4) Which thermometer best represents the temperature 100°?
- 5) Which thermometer best represents the temperature 33°?
- 6) Which thermometer best represents the temperature 15°?
- 7) Which thermometer best represents the temperature 94°?
- 8) Which thermometer best represents the temperature 54°?
- 9) Which thermometer best represents the temperature 62°?
- 10) Which thermometer best represents the temperature 41°?

1. \_\_\_\_\_
2. \_\_\_\_\_
3. \_\_\_\_\_
4. \_\_\_\_\_
5. \_\_\_\_\_
6. \_\_\_\_\_
7. \_\_\_\_\_
8. \_\_\_\_\_
9. \_\_\_\_\_
10. \_\_\_\_\_





Determine which letter best answers each question.

- 1) Which thermometer best represents the temperature  $39^\circ$ ?
- 2) Which thermometer best represents the temperature  $12^\circ$ ?
- 3) Which thermometer best represents the temperature  $75^\circ$ ?
- 4) Which thermometer best represents the temperature  $100^\circ$ ?
- 5) Which thermometer best represents the temperature  $33^\circ$ ?
- 6) Which thermometer best represents the temperature  $15^\circ$ ?
- 7) Which thermometer best represents the temperature  $94^\circ$ ?
- 8) Which thermometer best represents the temperature  $54^\circ$ ?
- 9) Which thermometer best represents the temperature  $62^\circ$ ?
- 10) Which thermometer best represents the temperature  $41^\circ$ ?

**Answers**

1.     **B**
2.     **F**
3.     **A**
4.     **C**
5.     **J**
6.     **D**
7.     **G**
8.     **H**
9.     **E**
10.     **I**

