

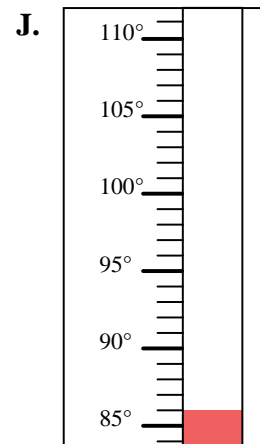
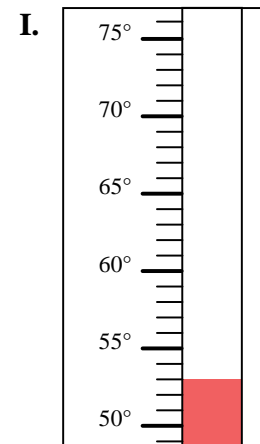
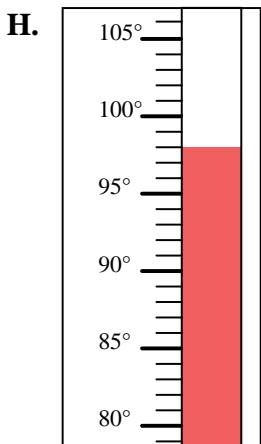
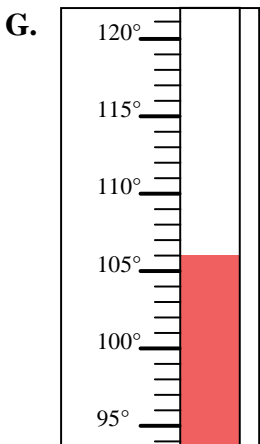
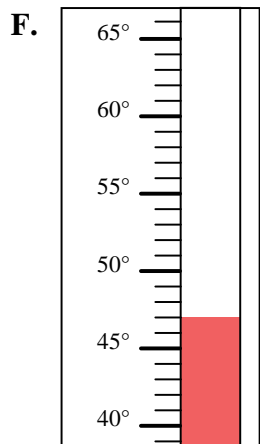
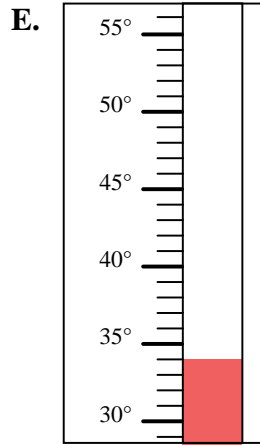
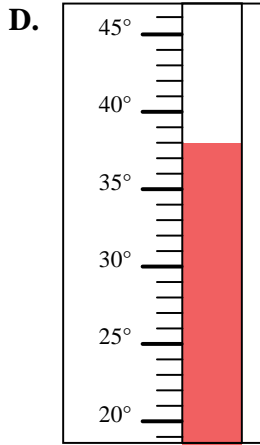
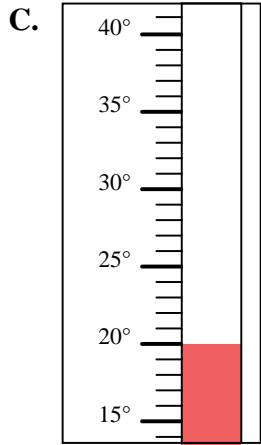
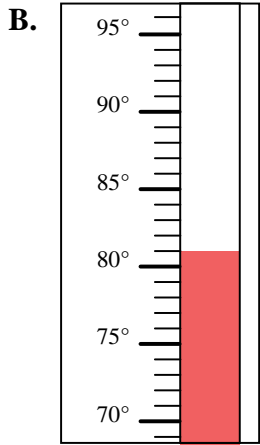
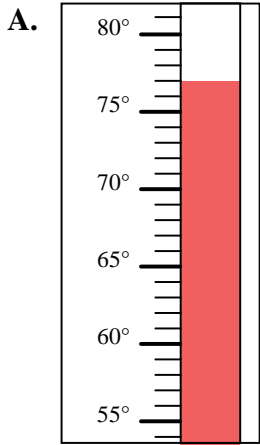


Determine which letter best answers each question.

Answers

- 1) Which thermometer best represents the temperature 53° ?
- 2) Which thermometer best represents the temperature 98° ?
- 3) Which thermometer best represents the temperature 77° ?
- 4) Which thermometer best represents the temperature 106° ?
- 5) Which thermometer best represents the temperature 47° ?
- 6) Which thermometer best represents the temperature 86° ?
- 7) Which thermometer best represents the temperature 34° ?
- 8) Which thermometer best represents the temperature 81° ?
- 9) Which thermometer best represents the temperature 20° ?
- 10) Which thermometer best represents the temperature 38° ?

1. _____
2. _____
3. _____
4. _____
5. _____
6. _____
7. _____
8. _____
9. _____
10. _____





Determine which letter best answers each question.

- 1) Which thermometer best represents the temperature 53° ?
- 2) Which thermometer best represents the temperature 98° ?
- 3) Which thermometer best represents the temperature 77° ?
- 4) Which thermometer best represents the temperature 106° ?
- 5) Which thermometer best represents the temperature 47° ?
- 6) Which thermometer best represents the temperature 86° ?
- 7) Which thermometer best represents the temperature 34° ?
- 8) Which thermometer best represents the temperature 81° ?
- 9) Which thermometer best represents the temperature 20° ?
- 10) Which thermometer best represents the temperature 38° ?

Answers

1. **I**
2. **H**
3. **A**
4. **G**
5. **F**
6. **J**
7. **E**
8. **B**
9. **C**
10. **D**

