



Express each number using tally marks.

1) 40 _____

2) 46 _____

3) 45 _____

4) 35 _____

5) 95 _____

6) 98 _____

7) 7 _____

8) 66 _____

9) 85 _____

10) 18 _____

11) 76 _____

12) 43 _____

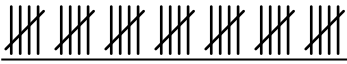



Express each number using tally marks.

1) 40 


2) 46 

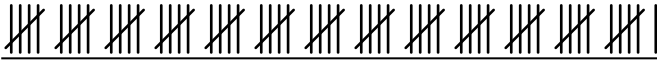
3) 45 

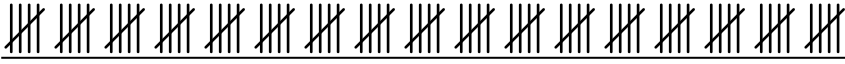
4) 35 


5) 95 

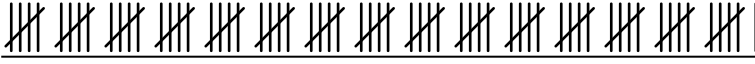
6) 98 

7) 7 

8) 66 

9) 85 

10) 18 

11) 76 

12) 43 