



Express each number using tally marks.

1) 81 \_\_\_\_\_

2) 91 \_\_\_\_\_

3) 45 \_\_\_\_\_

4) 63 \_\_\_\_\_

5) 64 \_\_\_\_\_

6) 18 \_\_\_\_\_

7) 59 \_\_\_\_\_

8) 71 \_\_\_\_\_

9) 37 \_\_\_\_\_

10) 79 \_\_\_\_\_

11) 31 \_\_\_\_\_

12) 80 \_\_\_\_\_



Express each number using tally marks.

1) 81 \_\_\_\_\_

2) 91 \_\_\_\_\_

3) 45 \_\_\_\_\_

4) 63 \_\_\_\_\_

5) 64 \_\_\_\_\_

6) 18 \_\_\_\_\_

7) 59 \_\_\_\_\_

8) 71 \_\_\_\_\_

9) 37 \_\_\_\_\_

10) 79 \_\_\_\_\_

11) 31 \_\_\_\_\_

12) 80 \_\_\_\_\_



Express each number using tally marks.

1) 79 \_\_\_\_\_

2) 25 \_\_\_\_\_

3) 80 \_\_\_\_\_

4) 73 \_\_\_\_\_

5) 72 \_\_\_\_\_

6) 64 \_\_\_\_\_

7) 90 \_\_\_\_\_

8) 63 \_\_\_\_\_

9) 52 \_\_\_\_\_

10) 84 \_\_\_\_\_

11) 92 \_\_\_\_\_

12) 56 \_\_\_\_\_



Express each number using tally marks.

1) 79 \_\_\_\_\_

2) 25 \_\_\_\_\_

3) 80 \_\_\_\_\_

4) 73 \_\_\_\_\_

5) 72 \_\_\_\_\_

6) 64 \_\_\_\_\_

7) 90 \_\_\_\_\_

8) 63 \_\_\_\_\_

9) 52 \_\_\_\_\_

10) 84 \_\_\_\_\_

11) 92 \_\_\_\_\_

12) 56 \_\_\_\_\_



Express each number using tally marks.

1) 56 \_\_\_\_\_

2) 62 \_\_\_\_\_

3) 23 \_\_\_\_\_

4) 69 \_\_\_\_\_

5) 49 \_\_\_\_\_

6) 60 \_\_\_\_\_

7) 28 \_\_\_\_\_

8) 25 \_\_\_\_\_

9) 16 \_\_\_\_\_

10) 93 \_\_\_\_\_

11) 61 \_\_\_\_\_

12) 27 \_\_\_\_\_



Express each number using tally marks.

1) 56 2) 62 3) 23 4) 69 5) 49 6) 60 7) 28 8) 25 9) 16 10) 93 11) 61 12) 27 



Express each number using tally marks.

1) 26 \_\_\_\_\_

2) 36 \_\_\_\_\_

3) 47 \_\_\_\_\_

4) 21 \_\_\_\_\_

5) 19 \_\_\_\_\_

6) 30 \_\_\_\_\_

7) 91 \_\_\_\_\_

8) 98 \_\_\_\_\_

9) 70 \_\_\_\_\_

10) 97 \_\_\_\_\_


11) 22 \_\_\_\_\_

12) 35 \_\_\_\_\_



Express each number using tally marks.

1) 26 

2) 36 

3) 47 

4) 21 


5) 19 

6) 30 

7) 91 

8) 98 

9) 70 

10) 97 

11) 22 

12) 35 





Express each number using tally marks.

1) 22 \_\_\_\_\_

2) 51 \_\_\_\_\_

3) 71 \_\_\_\_\_

4) 54 \_\_\_\_\_

5) 16 \_\_\_\_\_

6) 7 \_\_\_\_\_

7) 13 \_\_\_\_\_

8) 61 \_\_\_\_\_

9) 19 \_\_\_\_\_



10) 6 \_\_\_\_\_

11) 37 \_\_\_\_\_

12) 34 \_\_\_\_\_



Express each number using tally marks.

1) 22 2) 51 3) 71 4) 54 5) 16 6) 7 7) 13 8) 61 9) 19 10) 6 11) 37 12) 34 



Express each number using tally marks.

1) 88 \_\_\_\_\_

2) 95 \_\_\_\_\_

3) 21 \_\_\_\_\_

4) 22 \_\_\_\_\_

5) 44 \_\_\_\_\_

6) 73 \_\_\_\_\_

7) 15 \_\_\_\_\_

8) 34 \_\_\_\_\_

9) 96 \_\_\_\_\_

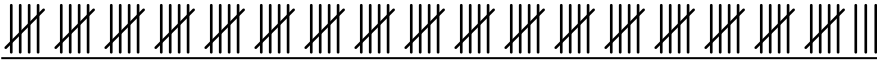

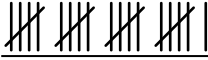
10) 6 \_\_\_\_\_

11) 23 \_\_\_\_\_

12) 100 \_\_\_\_\_



Express each number using tally marks.

1) 88 2) 95 3) 21 4) 22 5) 44 6) 73 7) 15 8) 34 9) 96 10) 6 11) 23 12) 100 



Express each number using tally marks.

1) 16 \_\_\_\_\_

2) 21 \_\_\_\_\_

3) 89 \_\_\_\_\_

4) 70 \_\_\_\_\_

5) 61 \_\_\_\_\_

6) 72 \_\_\_\_\_

7) 58 \_\_\_\_\_

8) 44 \_\_\_\_\_

9) 55 \_\_\_\_\_


10) 94 \_\_\_\_\_


11) 62 \_\_\_\_\_

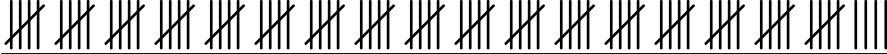
12) 95 \_\_\_\_\_



Express each number using tally marks.

1) 16 

2) 21 

3) 89 

4) 70 


5) 61 


6) 72 

7) 58 

8) 44 

9) 55 

10) 94 

11) 62 

12) 95 



Express each number using tally marks.

1) 43 \_\_\_\_\_

2) 23 \_\_\_\_\_

3) 71 \_\_\_\_\_

4) 19 \_\_\_\_\_

5) 47 \_\_\_\_\_

6) 7 \_\_\_\_\_

7) 69 \_\_\_\_\_

8) 74 \_\_\_\_\_

9) 64 \_\_\_\_\_

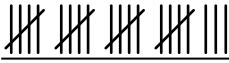
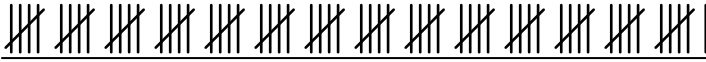
10) 78 \_\_\_\_\_

11) 32 \_\_\_\_\_

12) 65 \_\_\_\_\_



Express each number using tally marks.

1) 43 2) 23 3) 71 4) 19 5) 47 6) 7 7) 69 8) 74 9) 64 10) 78 11) 32 12) 65 





Express each number using tally marks.

1) 54 \_\_\_\_\_

2) 10 \_\_\_\_\_

3) 85 \_\_\_\_\_

4) 77 \_\_\_\_\_

5) 83 \_\_\_\_\_

6) 84 \_\_\_\_\_

7) 86 \_\_\_\_\_

8) 28 \_\_\_\_\_

9) 19 \_\_\_\_\_

10) 72 \_\_\_\_\_

11) 44 \_\_\_\_\_

12) 52 \_\_\_\_\_



Express each number using tally marks.

1) 54 \_\_\_\_\_

2) 10 \_\_\_\_\_

3) 85 \_\_\_\_\_

4) 77 \_\_\_\_\_

5) 83 \_\_\_\_\_

6) 84 \_\_\_\_\_

7) 86 \_\_\_\_\_

8) 28 \_\_\_\_\_

9) 19 \_\_\_\_\_

10) 72 \_\_\_\_\_

11) 44 \_\_\_\_\_

12) 52 \_\_\_\_\_



Express each number using tally marks.

1) 61 \_\_\_\_\_

2) 35 \_\_\_\_\_

3) 49 \_\_\_\_\_

4) 15 \_\_\_\_\_

5) 52 \_\_\_\_\_

6) 16 \_\_\_\_\_

7) 75 \_\_\_\_\_

8) 12 \_\_\_\_\_

9) 11 \_\_\_\_\_

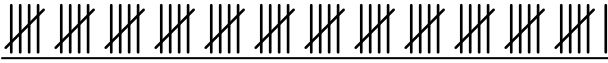
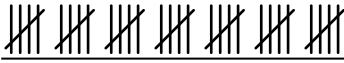
10) 31 \_\_\_\_\_

11) 37 \_\_\_\_\_

12) 87 \_\_\_\_\_



Express each number using tally marks.

1) 61 2) 35 3) 49 4) 15 5) 52 6) 16 7) 75 8) 12 9) 11 10) 31 11) 37 12) 87 