



Use the visual model to solve each problem.

Answers

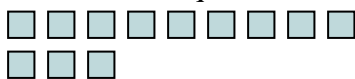
- 1) There are 11 rectangles below.



If you were to take away 2, how many would be left?

$11 - 2 = ?$

- 2) There are 12 squares below.



If you were to take away 8, how many would be left?

$12 - 8 = ?$

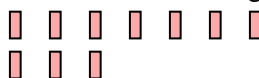
- 3) There are 11 stars below.



If you were to take away 10, how many would be left?

$11 - 10 = ?$

- 4) There are 10 rectangles below.



If you were to take away 3, how many would be left?

$10 - 3 = ?$

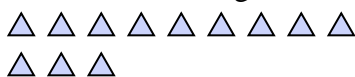
- 5) There are 15 stars below.



If you were to take away 2, how many would be left?

$15 - 2 = ?$


- 6) There are 12 triangles below.



If you were to take away 7, how many would be left?

$12 - 7 = ?$

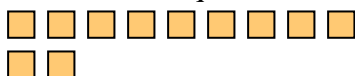
- 7) There are 3 squares below.



If you were to take away 2, how many would be left?

$3 - 2 = ?$

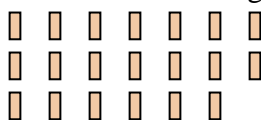
- 8) There are 11 squares below.



If you were to take away 1, how many would be left?

$11 - 1 = ?$

- 9) There are 20 rectangles below.



If you were to take away 9, how many would be left?

$20 - 9 = ?$

- 10) There are 11 rectangles below.



If you were to take away 9, how many would be left?

$11 - 9 = ?$

1. _____
2. _____
3. _____
4. _____
5. _____
6. _____
7. _____
8. _____
9. _____
10. _____



Use the visual model to solve each problem.

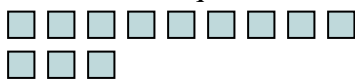
- 1) There are 11 rectangles below.



If you were to take away 2, how many would be left?

$$11 - 2 = ?$$

- 2) There are 12 squares below.



If you were to take away 8, how many would be left?

$$12 - 8 = ?$$

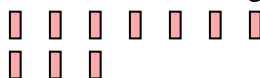
- 3) There are 11 stars below.



If you were to take away 10, how many would be left?

$$11 - 10 = ?$$

- 4) There are 10 rectangles below.



If you were to take away 3, how many would be left?

$$10 - 3 = ?$$

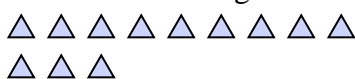
- 5) There are 15 stars below.



If you were to take away 2, how many would be left?

$$15 - 2 = ?$$


- 6) There are 12 triangles below.



If you were to take away 7, how many would be left?

$$12 - 7 = ?$$

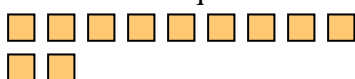
- 7) There are 3 squares below.



If you were to take away 2, how many would be left?

$$3 - 2 = ?$$

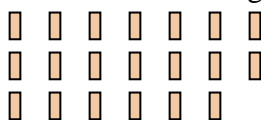
- 8) There are 11 squares below.



If you were to take away 1, how many would be left?

$$11 - 1 = ?$$

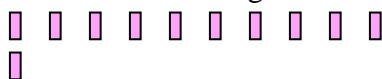
- 9) There are 20 rectangles below.



If you were to take away 9, how many would be left?

$$20 - 9 = ?$$

- 10) There are 11 rectangles below.



If you were to take away 9, how many would be left?

$$11 - 9 = ?$$

Answers

1. **9**
2. **4**
3. **1**
4. **7**
5. **13**
6. **5**
7. **1**
8. **10**
9. **11**
10. **2**