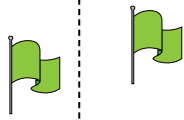




Determine if the shape is translating (slide), rotating (turn) or reflecting (flip).

Answers

1)



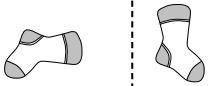
2)



3)



4)



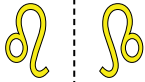
5)



6)



7)



8)



9)



10)



11)



12)



13)



14)



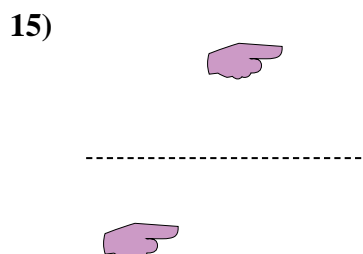
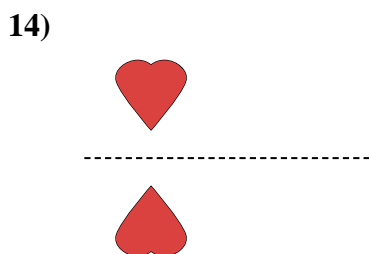
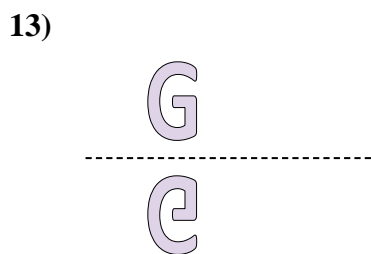
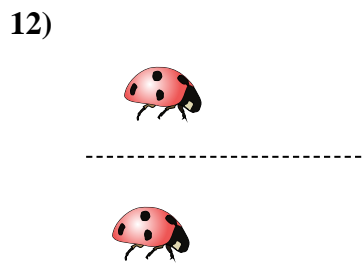
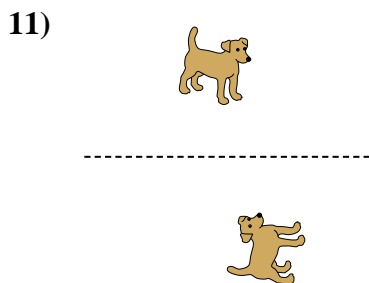
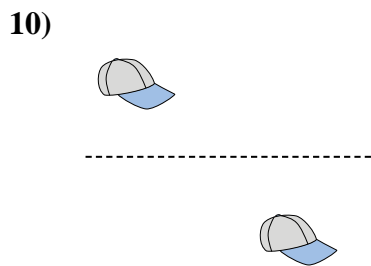
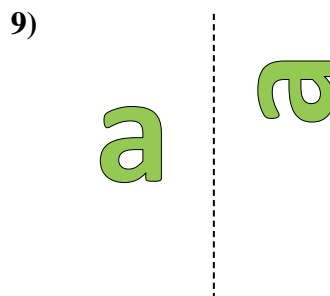
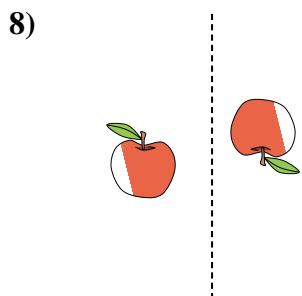
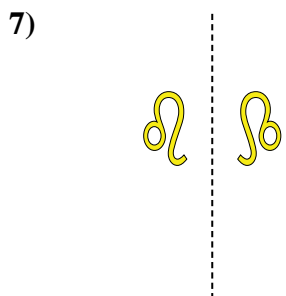
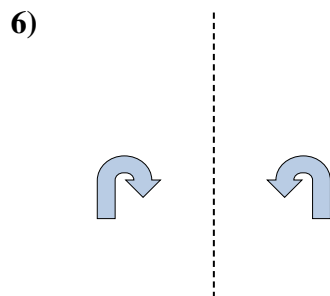
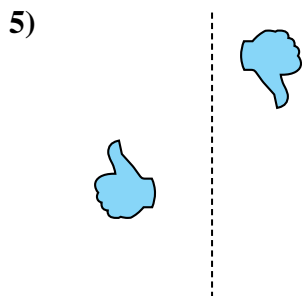
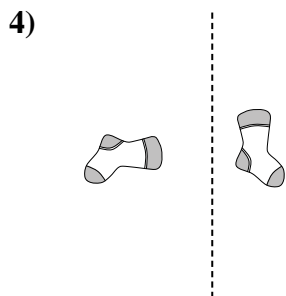
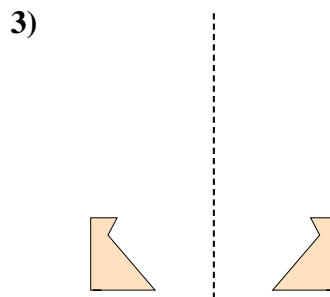
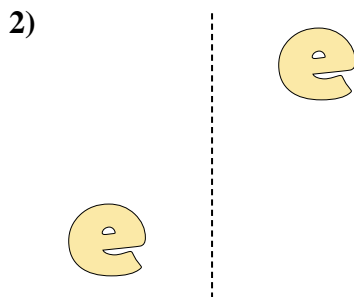
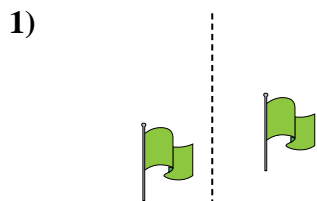
15)



1. _____
2. _____
3. _____
4. _____
5. _____
6. _____
7. _____
8. _____
9. _____
10. _____
11. _____
12. _____
13. _____
14. _____
15. _____



Determine if the shape is translating (slide), rotating (turn) or reflecting (flip).



Answers

1. translating

2. translating

3. reflecting

4. rotating

5. rotating

6. reflecting

7. reflecting

8. rotating

9. rotating

10. translating

11. rotating

12. translating

13. reflecting

14. reflecting

15. translating