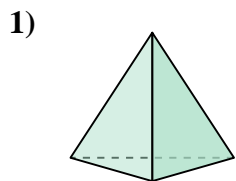


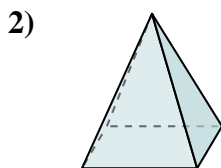


Determine which choice BEST describes the shape shown.

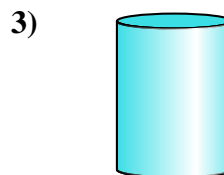
**Answers**



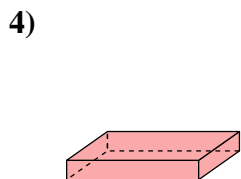
- A. triangular pyramid
- B. sphere
- C. cylinder
- D. rectangular pyramid



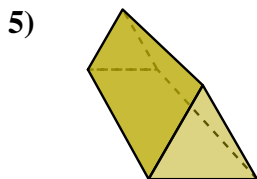
- A. triangular pyramid
- B. cone
- C. cube
- D. rectangular pyramid



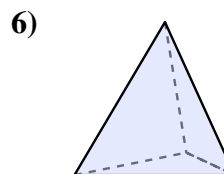
- A. rectangular pyramid
- B. rectangular prism
- C. cylinder
- D. sphere



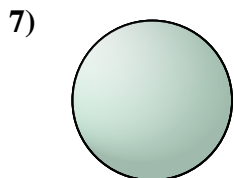
- A. rectangular prism
- B. rectangular pyramid
- C. triangular pyramid
- D. cone



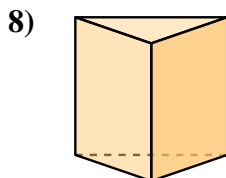
- A. rectangular pyramid
- B. rectangular prism
- C. triangular prism
- D. triangular pyramid



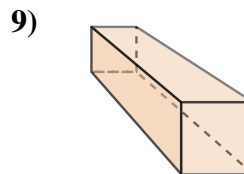
- A. triangular pyramid
- B. rectangular prism
- C. triangular prism
- D. cube



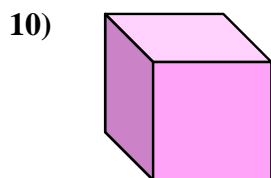
- A. triangular prism
- B. rectangular prism
- C. sphere
- D. cube




- A. cone
- B. triangular prism
- C. cube
- D. rectangular prism



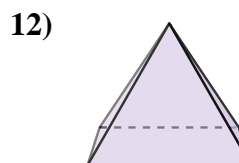
- A. cylinder
- B. sphere
- C. rectangular prism
- D. rectangular pyramid



- A. rectangular pyramid
- B. cube
- C. triangular prism
- D. cone



- A. rectangular pyramid
- B. sphere
- C. triangular prism
- D. cone

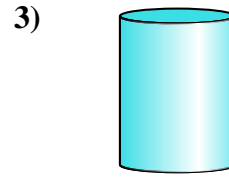
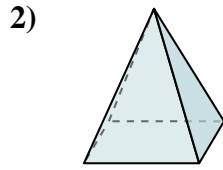
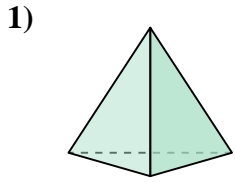


- A. triangular prism
- B. triangular pyramid
- C. cube
- D. rectangular pyramid

- 1. \_\_\_\_\_
- 2. \_\_\_\_\_
- 3. \_\_\_\_\_
- 4. \_\_\_\_\_
- 5. \_\_\_\_\_
- 6. \_\_\_\_\_
- 7. \_\_\_\_\_
- 8. \_\_\_\_\_
- 9. \_\_\_\_\_
- 10. \_\_\_\_\_
- 11. \_\_\_\_\_
- 12. \_\_\_\_\_



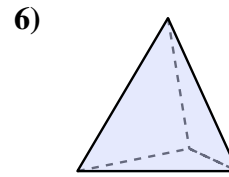
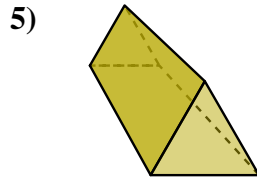
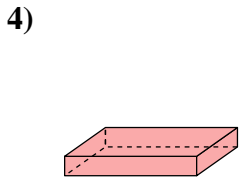
Determine which choice BEST describes the shape shown.



- 1) A. triangular pyramid
- B. sphere
- C. cylinder
- D. rectangular pyramid

- 2) A. triangular pyramid
- B. cone
- C. cube
- D. rectangular pyramid

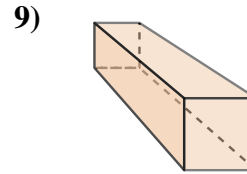
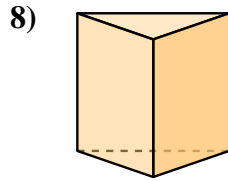
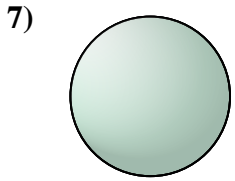
- 3) A. rectangular pyramid
- B. rectangular prism
- C. cylinder
- D. sphere



- 4) A. rectangular prism
- B. rectangular pyramid
- C. triangular pyramid
- D. cone

- 5) A. rectangular pyramid
- B. rectangular prism
- C. triangular prism
- D. triangular pyramid

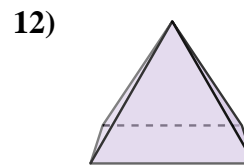

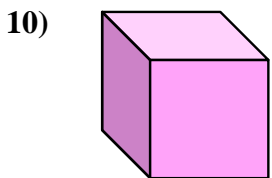
- 6) A. triangular pyramid
- B. rectangular prism
- C. triangular prism
- D. cube



- 7) A. triangular prism
- B. rectangular prism
- C. sphere
- D. cube

- 8) A. cone
- B. triangular prism
- C. cube
- D. rectangular prism

- 9) A. cylinder
- B. sphere
- C. rectangular prism
- D. rectangular pyramid



- 10) A. rectangular pyramid
- B. cube
- C. triangular prism
- D. cone

- 11) A. rectangular pyramid
- B. sphere
- C. triangular prism
- D. cone

- 12) A. triangular prism
- B. triangular pyramid
- C. cube
- D. rectangular pyramid

**Answers**

- 1. **A**
- 2. **D**
- 3. **C**
- 4. **A**
- 5. **C**
- 6. **A**
- 7. **C**
- 8. **B**
- 9. **C**
- 10. **B**
- 11. **D**
- 12. **D**