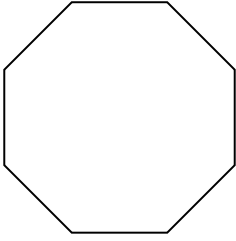


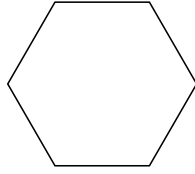


Identifying the type of shape shown.


1)



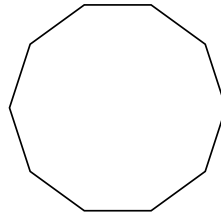
2)



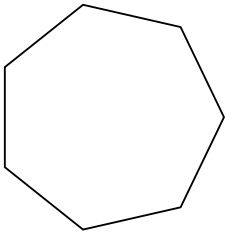
3)



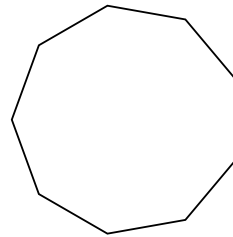
4)



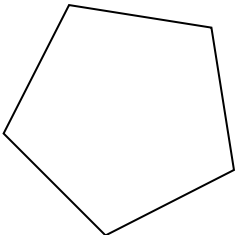
5)



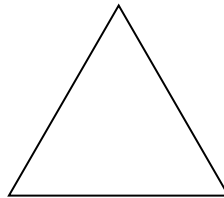
6)



7)



8)



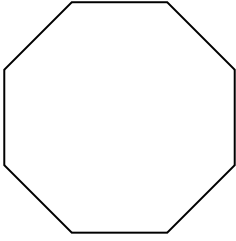
Answers

- 1. _____
- 2. _____
- 3. _____
- 4. _____
- 5. _____
- 6. _____
- 7. _____
- 8. _____

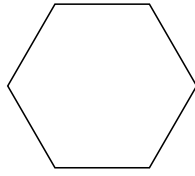


Identifying the type of shape shown.


1)



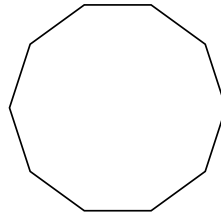
2)



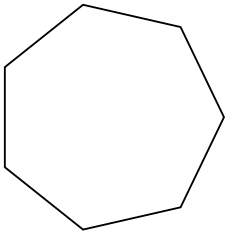
3)



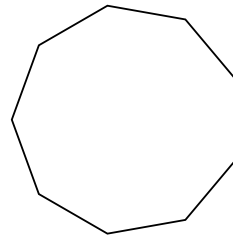
4)



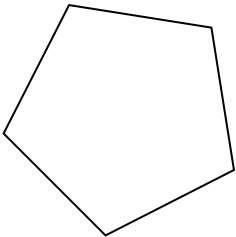
5)



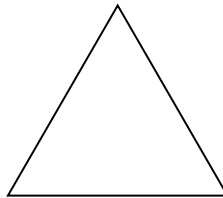
6)



7)



8)



Answers

1. octagon

2. hexagon

3. quadrilateral

4. decagon

5. heptagon

6. nonagon

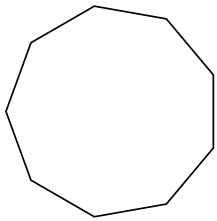
7. pentagon

8. triangle

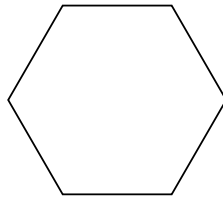


Identifying the type of shape shown.

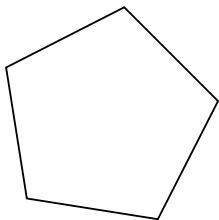
1)



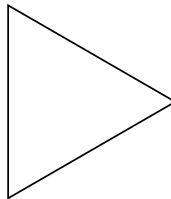
2)




3)



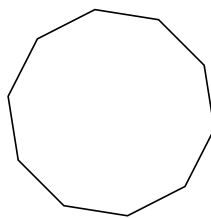
4)



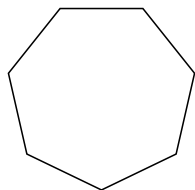
5)



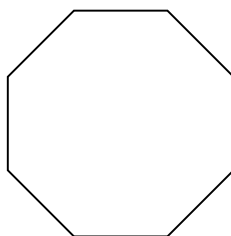
6)



7)



8)



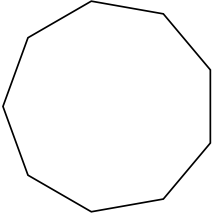
Answers

- 1. _____
- 2. _____
- 3. _____
- 4. _____
- 5. _____
- 6. _____
- 7. _____
- 8. _____

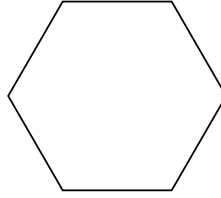


Identifying the type of shape shown.

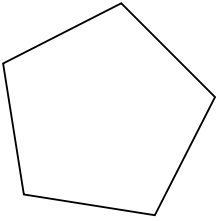
1)



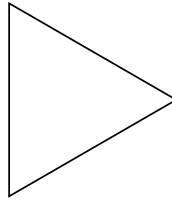
2)




3)



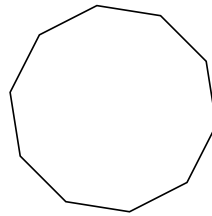
4)



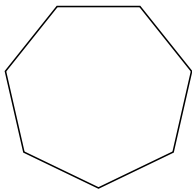
5)



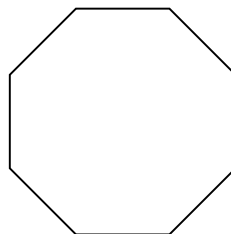
6)



7)



8)



Answers

1. nonagon

2. hexagon

3. pentagon

4. triangle

5. quadrilateral

6. decagon

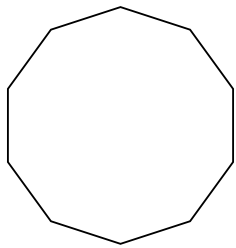
7. heptagon

8. octagon

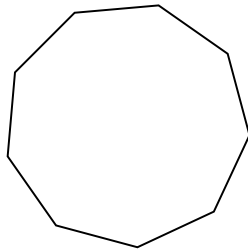


Identifying the type of shape shown.

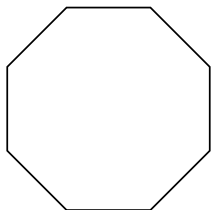
1)



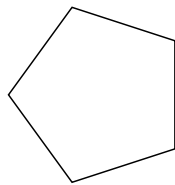
2)



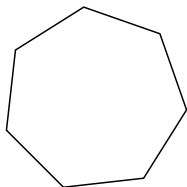
3)



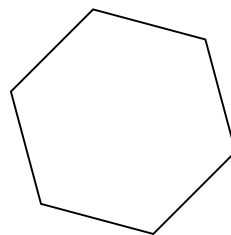
4)




5)




6)



7)



8)



Answers

1. _____

2. _____

3. _____

4. _____

5. _____

6. _____

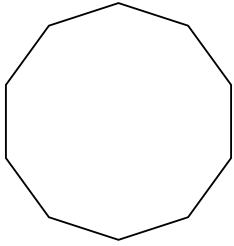
7. _____

8. _____

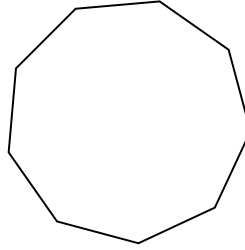


Identifying the type of shape shown.

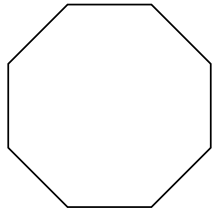
1)



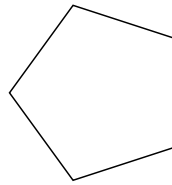
2)



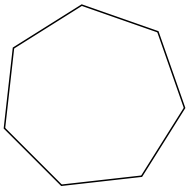
3)



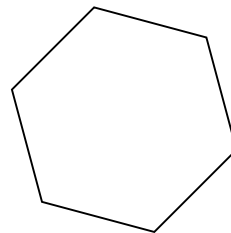
4)




5)




6)



7)



8)



Answers

1. decagon

2. nonagon

3. octagon

4. pentagon

5. heptagon

6. hexagon

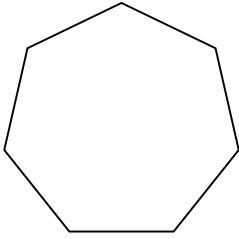
7. triangle

8. quadrilateral

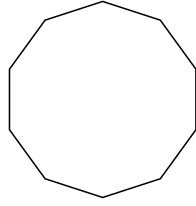


Identifying the type of shape shown.

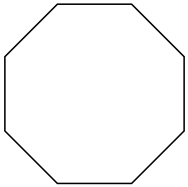
1)



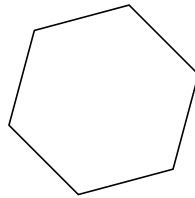
2)



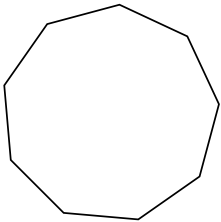
3)



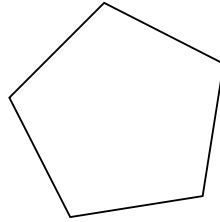
4)



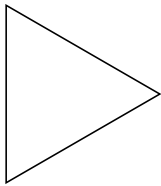
5)




6)



7)



8)



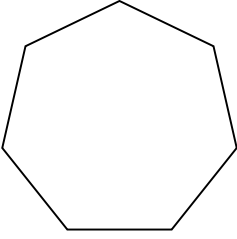
Answers

- 1. _____
- 2. _____
- 3. _____
- 4. _____
- 5. _____
- 6. _____
- 7. _____
- 8. _____

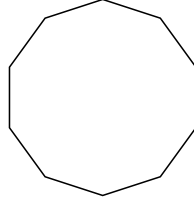


Identifying the type of shape shown.

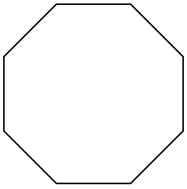
1)



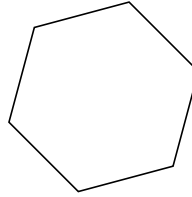
2)



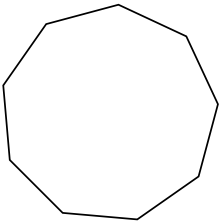
3)



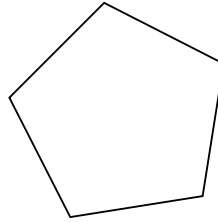
4)



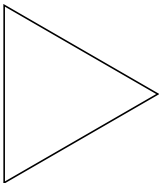
5)




6)



7)



8)



Answers

1. heptagon

2. decagon

3. octagon

4. hexagon

5. nonagon

6. pentagon

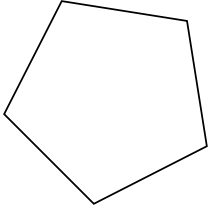
7. triangle

8. quadrilateral




Identifying the type of shape shown.

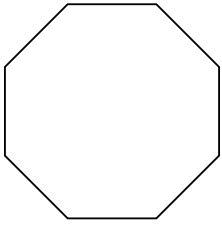
1)



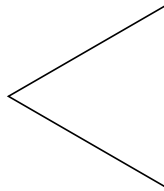
2)



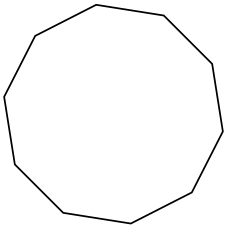
3)



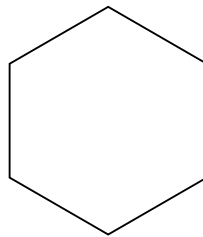
4)



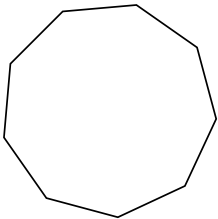
5)



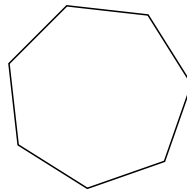
6)



7)



8)



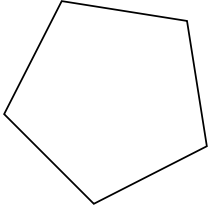
Answers

- 1. _____
- 2. _____
- 3. _____
- 4. _____
- 5. _____
- 6. _____
- 7. _____
- 8. _____




Identifying the type of shape shown.

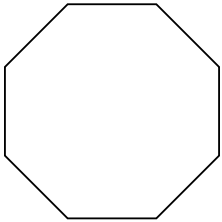
1)



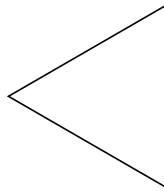
2)



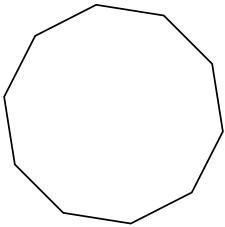
3)



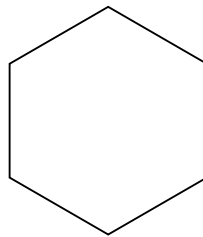
4)



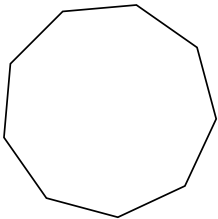
5)



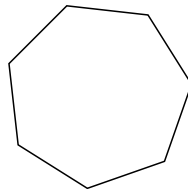
6)



7)



8)



Answers

1. pentagon

2. quadrilateral

3. octagon

4. triangle

5. decagon

6. hexagon

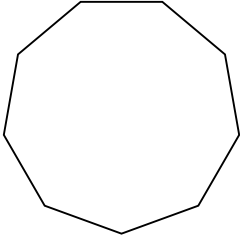
7. nonagon

8. heptagon

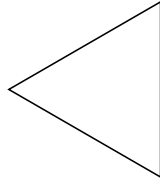


Identifying the type of shape shown.

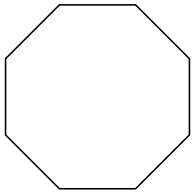
1)



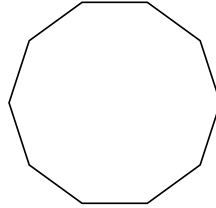
2)




3)



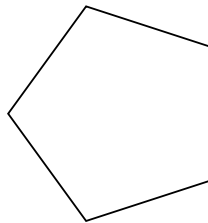
4)



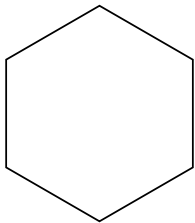
5)



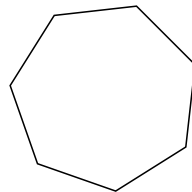
6)



7)



8)



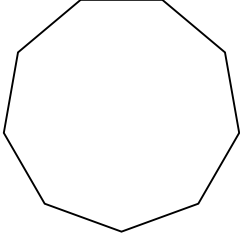
Answers

- 1. _____
- 2. _____
- 3. _____
- 4. _____
- 5. _____
- 6. _____
- 7. _____
- 8. _____

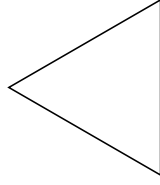


Identifying the type of shape shown.

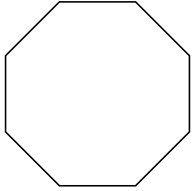
1)



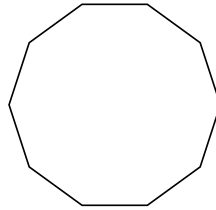
2)




3)



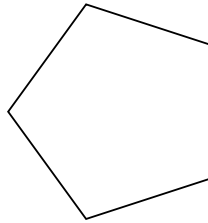
4)



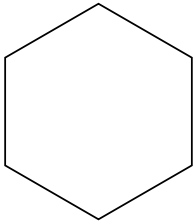
5)



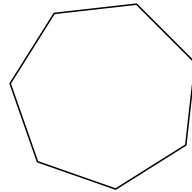
6)



7)



8)



Answers

1. nonagon

2. triangle

3. octagon

4. decagon

5. quadrilateral

6. pentagon

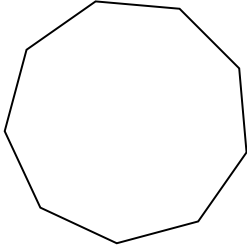
7. hexagon

8. heptagon

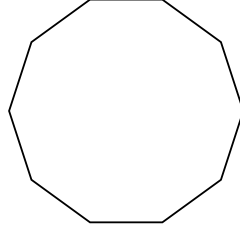


Identifying the type of shape shown.


1)



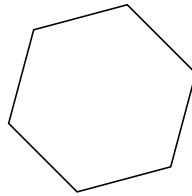
2)



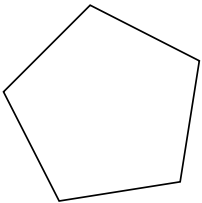
3)



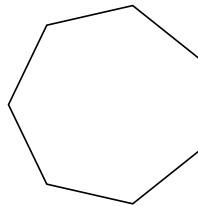
4)



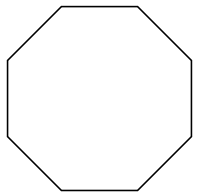
5)




6)



7)



8)



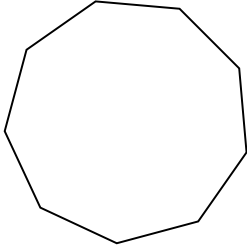
Answers

- 1. _____
- 2. _____
- 3. _____
- 4. _____
- 5. _____
- 6. _____
- 7. _____
- 8. _____

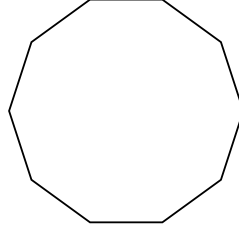


Identifying the type of shape shown.


1)



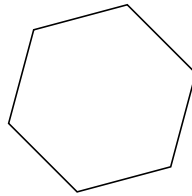
2)



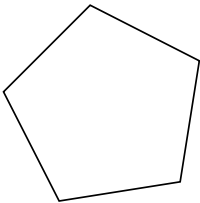
3)



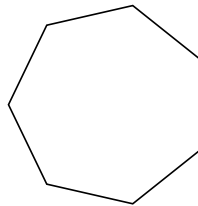
4)



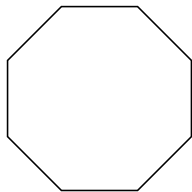
5)




6)



7)



8)



Answers

1. nonagon

2. decagon

3. triangle

4. hexagon

5. pentagon

6. heptagon

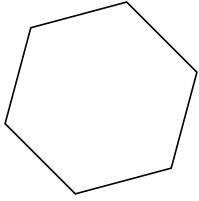
7. octagon

8. quadrilateral

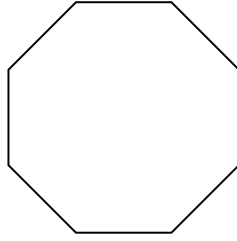


Identifying the type of shape shown.

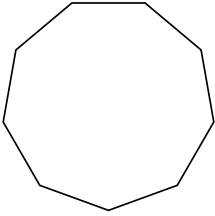
1)



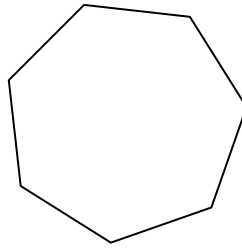
2)




3)



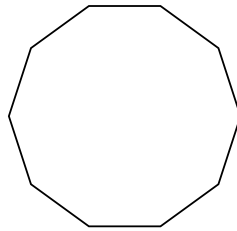
4)




5)



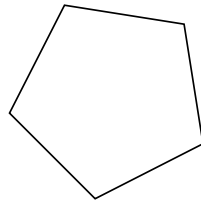
6)



7)



8)



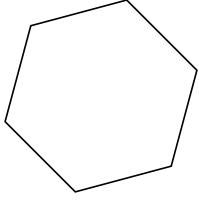
Answers

- 1. _____
- 2. _____
- 3. _____
- 4. _____
- 5. _____
- 6. _____
- 7. _____
- 8. _____

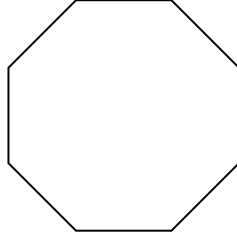


Identifying the type of shape shown.

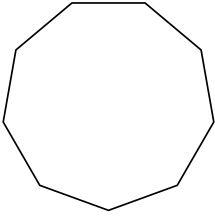
1)



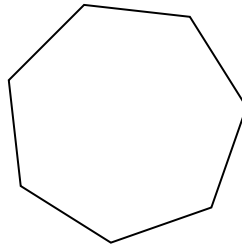
2)




3)



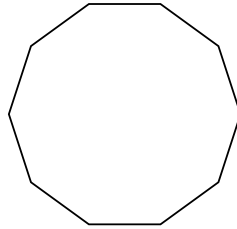
4)




5)



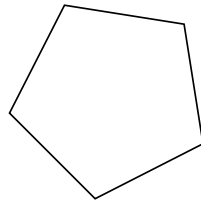
6)



7)



8)



Answers

1. hexagon

2. octagon

3. nonagon

4. heptagon

5. quadrilateral

6. decagon

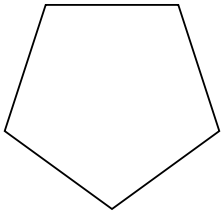
7. triangle

8. pentagon

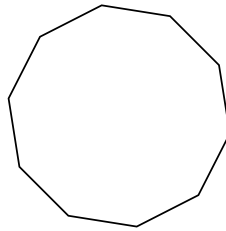


Identifying the type of shape shown.

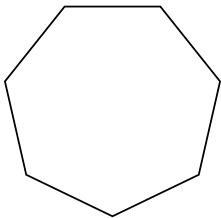
1)



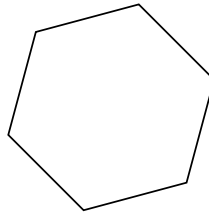
2)




3)



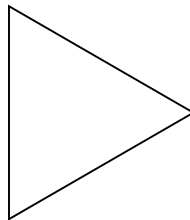
4)



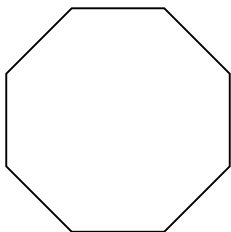
5)



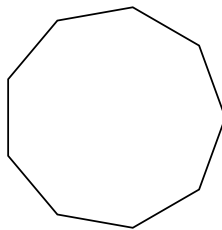
6)



7)



8)



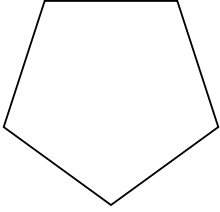
Answers

- 1. _____
- 2. _____
- 3. _____
- 4. _____
- 5. _____
- 6. _____
- 7. _____
- 8. _____

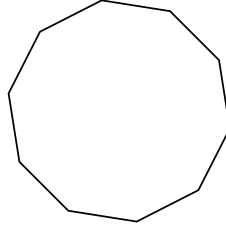


Identifying the type of shape shown.

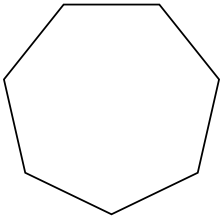
1)



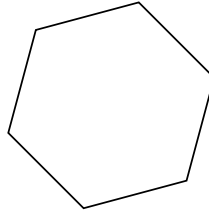
2)




3)



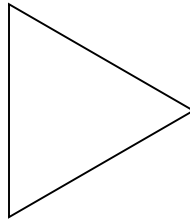
4)



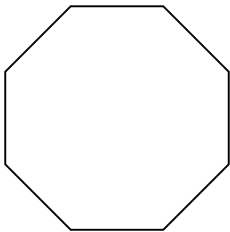
5)



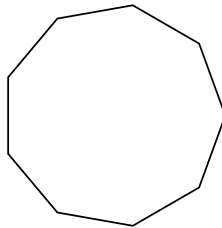
6)



7)



8)



Answers

1. pentagon

2. decagon

3. heptagon

4. hexagon

5. quadrilateral

6. triangle

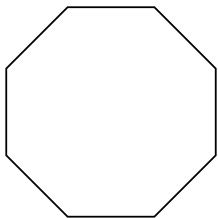
7. octagon

8. nonagon

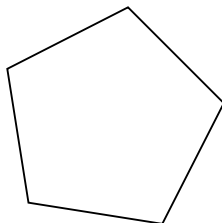


Identifying the type of shape shown.

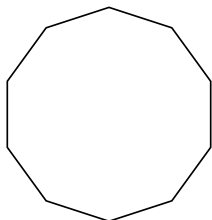
1)



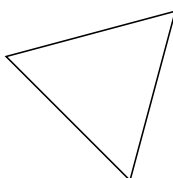
2)



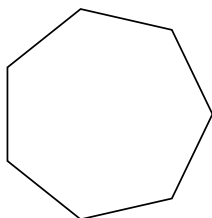
3)



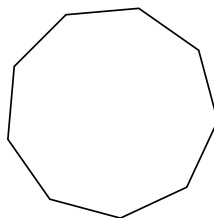
4)



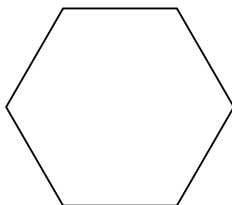
5)



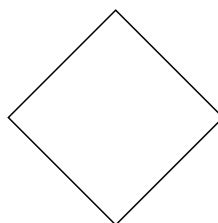
6)



7)



8)



Answers

1. _____

2. _____

3. _____

4. _____

5. _____

6. _____

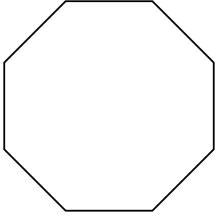
7. _____

8. _____

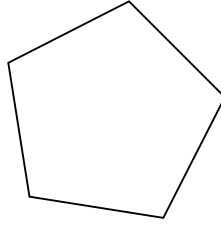


Identifying the type of shape shown.

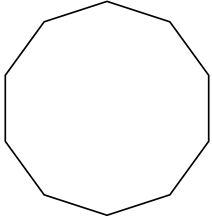
1)




2)



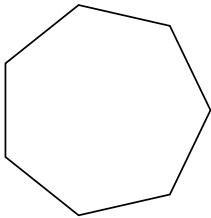
3)



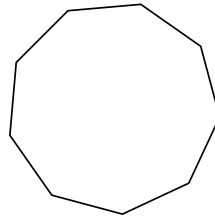
4)



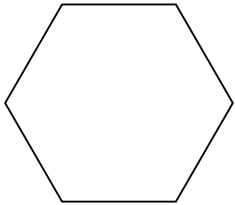
5)



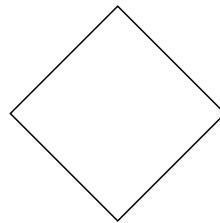
6)



7)



8)



Answers

1. octagon

2. pentagon

3. decagon

4. triangle

5. heptagon

6. nonagon

7. hexagon

8. quadrilateral