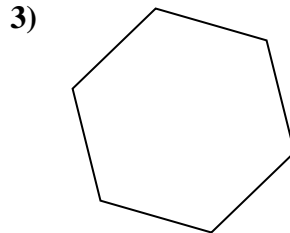
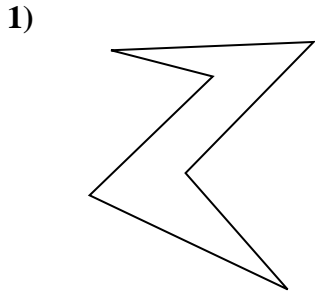


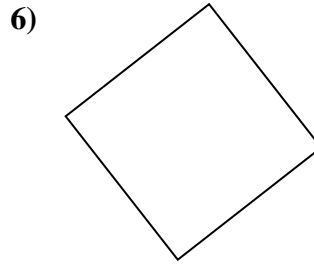
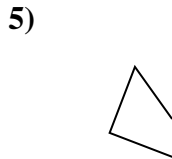
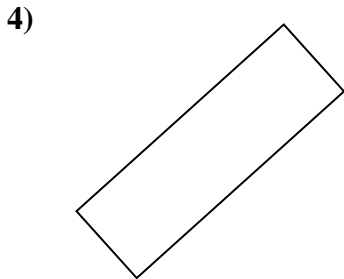


Determine if the figure shown is a 'Triangle', 'Square', 'Rectangle', 'Hexagon' or 'Other'.


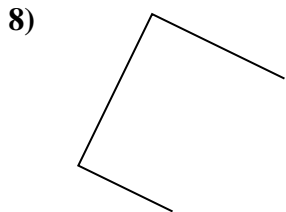
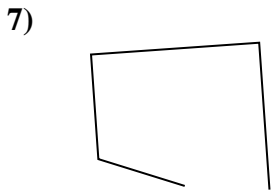
Answers



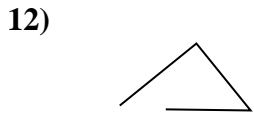
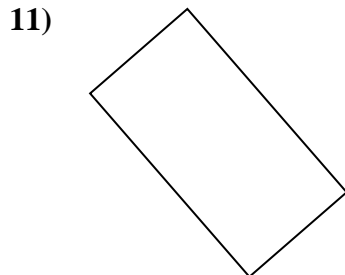
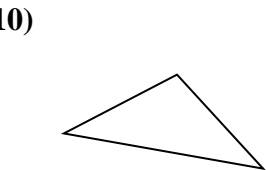
1. \_\_\_\_\_



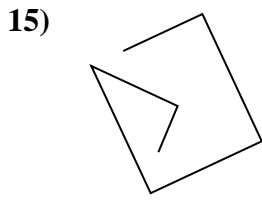
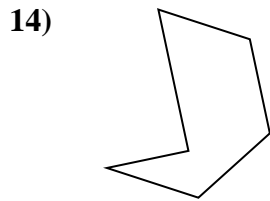
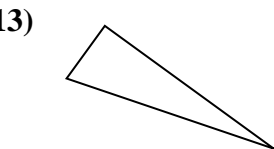
2. \_\_\_\_\_



3. \_\_\_\_\_



4. \_\_\_\_\_



5. \_\_\_\_\_

6. \_\_\_\_\_

7. \_\_\_\_\_

8. \_\_\_\_\_

9. \_\_\_\_\_

10. \_\_\_\_\_

11. \_\_\_\_\_

12. \_\_\_\_\_

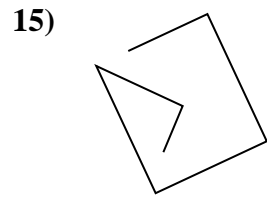
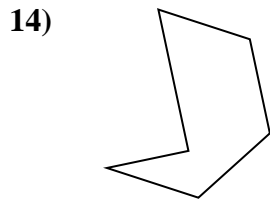
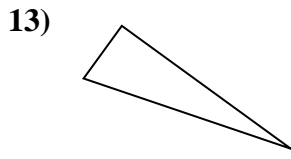
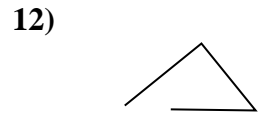
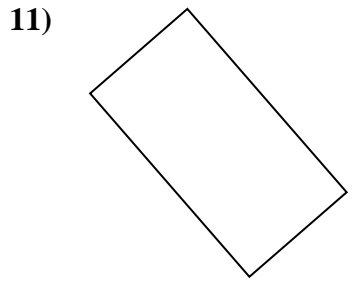
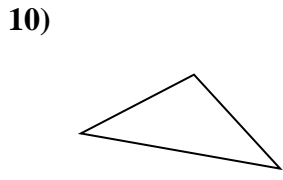

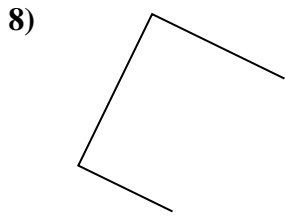
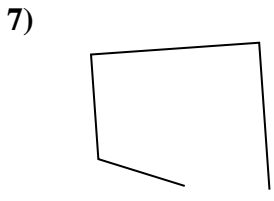
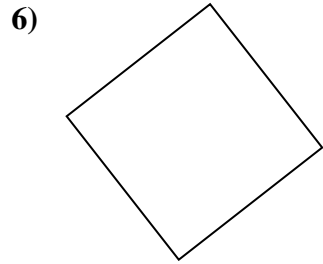
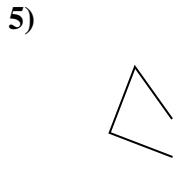
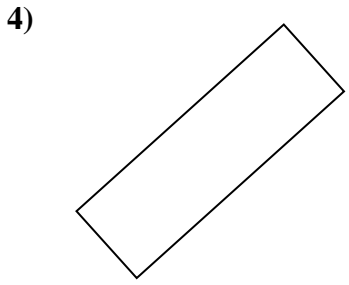
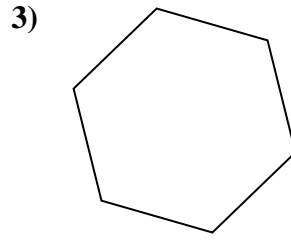

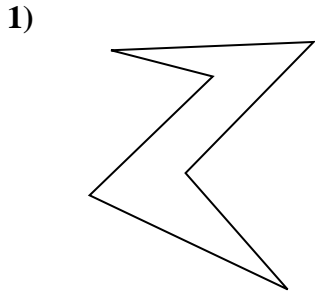
13. \_\_\_\_\_

14. \_\_\_\_\_

15. \_\_\_\_\_



Determine if the figure shown is a 'Triangle', 'Square', 'Rectangle', 'Hexagon' or 'Other'.



Answers

1. hexagon

2. rectangle

3. hexagon

4. rectangle

5. other

6. square

7. other

8. other

9. other

10. triangle

11. rectangle

12. other

13. triangle

14. hexagon

15. other