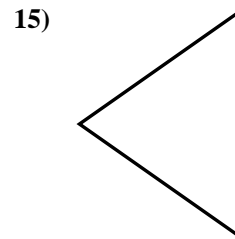
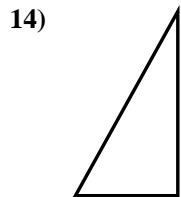
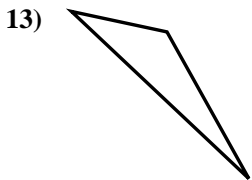
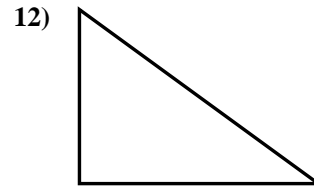
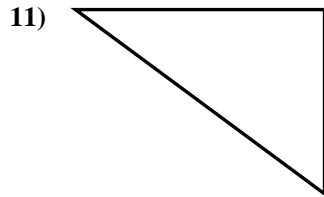
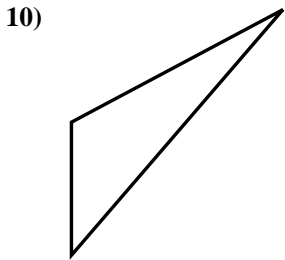
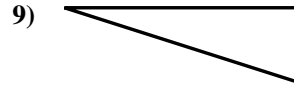
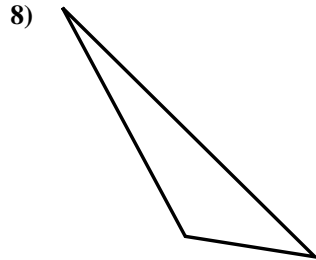
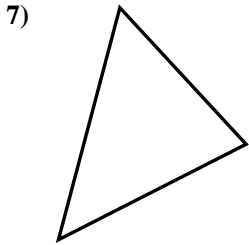
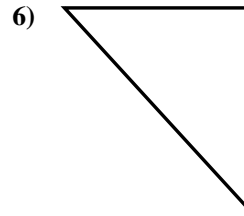
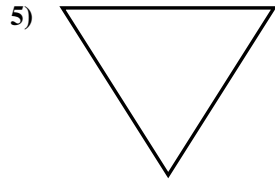
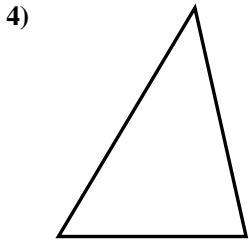
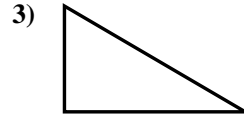
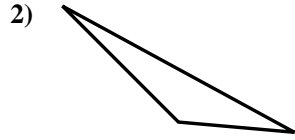
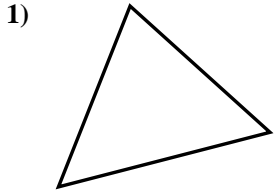




Determine if the triangle shown is a right triangle (yes) or not (no).

Answers

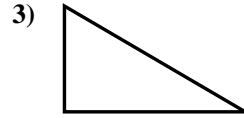
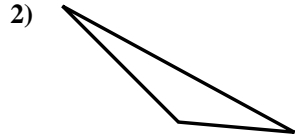
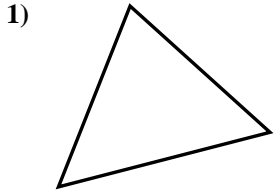


- 1. \_\_\_\_\_
- 2. \_\_\_\_\_
- 3. \_\_\_\_\_
- 4. \_\_\_\_\_
- 5. \_\_\_\_\_
- 6. \_\_\_\_\_
- 7. \_\_\_\_\_
- 8. \_\_\_\_\_
- 9. \_\_\_\_\_
- 10. \_\_\_\_\_
- 11. \_\_\_\_\_
- 12. \_\_\_\_\_
- 13. \_\_\_\_\_
- 14. \_\_\_\_\_
- 15. \_\_\_\_\_

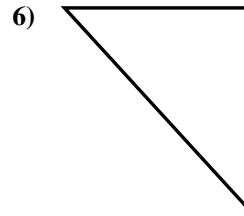
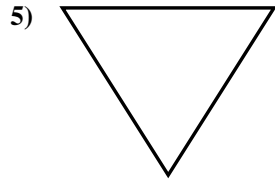
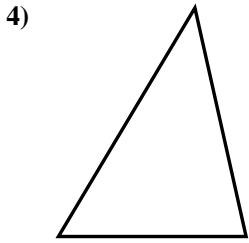


Determine if the triangle shown is a right triangle (yes) or not (no).

Answers



1. no



2. no

3. yes

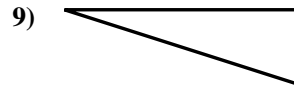
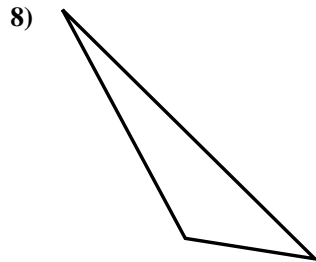
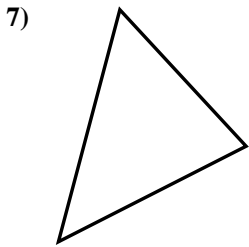
4. no

5. no

6. yes

7. no

8. no

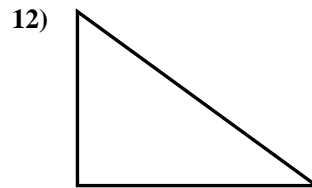
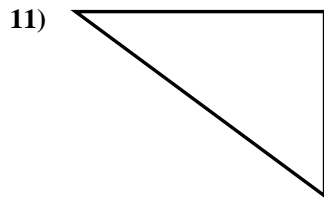
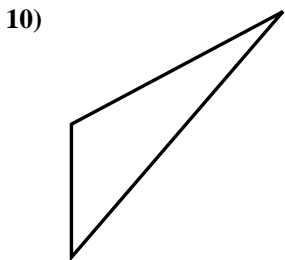


9. yes

10. no

11. yes

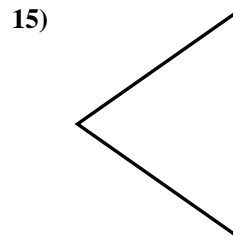
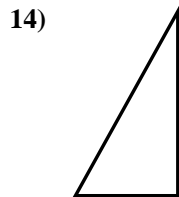
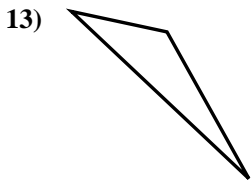
12. yes



13. no

14. yes

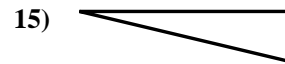
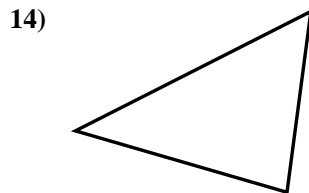
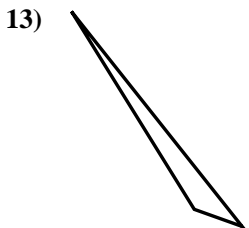
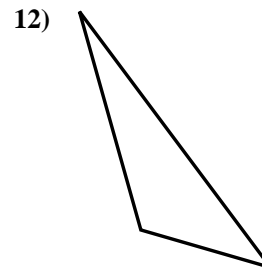
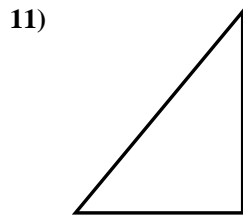
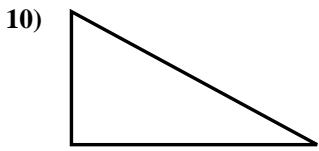
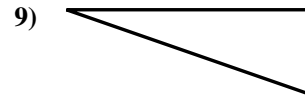
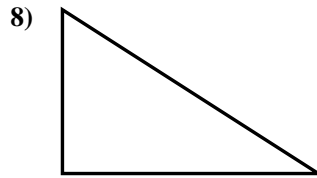
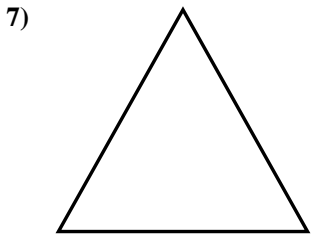
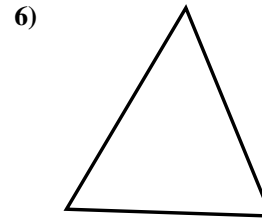

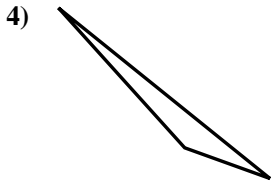
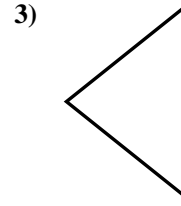
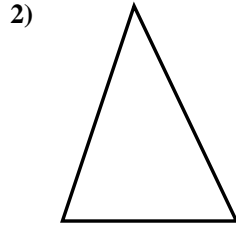
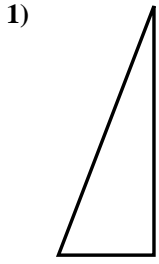
15. no





Determine if the triangle shown is a right triangle (yes) or not (no).

Answers

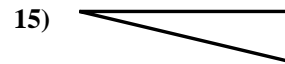
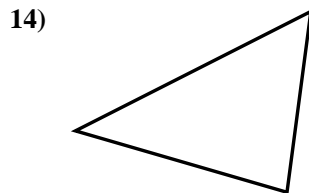
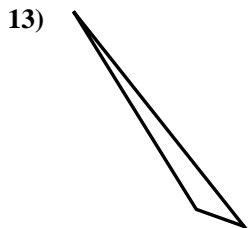
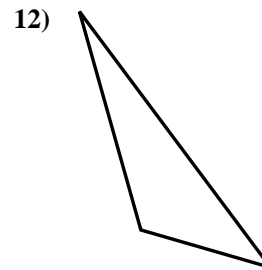
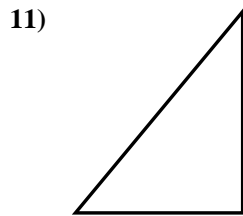
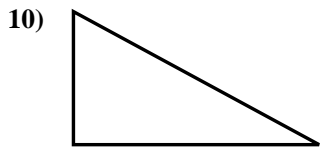
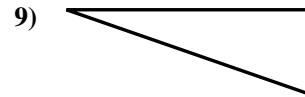
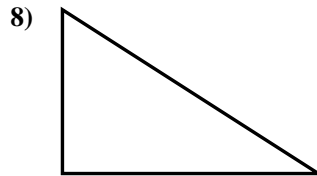
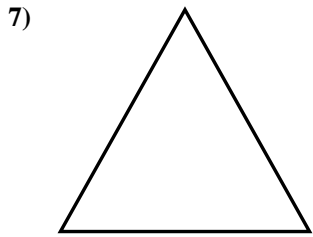
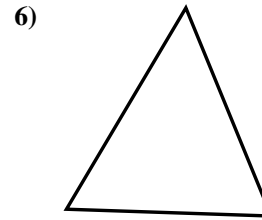

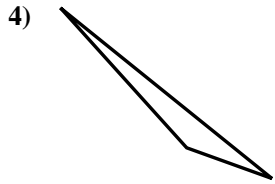
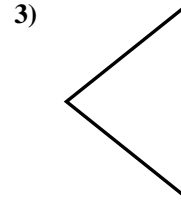
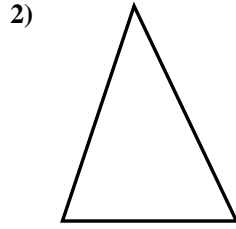
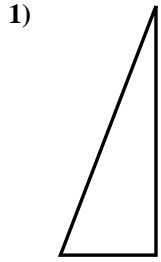


- 1. \_\_\_\_\_
- 2. \_\_\_\_\_
- 3. \_\_\_\_\_
- 4. \_\_\_\_\_
- 5. \_\_\_\_\_
- 6. \_\_\_\_\_
- 7. \_\_\_\_\_
- 8. \_\_\_\_\_
- 9. \_\_\_\_\_
- 10. \_\_\_\_\_
- 11. \_\_\_\_\_
- 12. \_\_\_\_\_
- 13. \_\_\_\_\_
- 14. \_\_\_\_\_
- 15. \_\_\_\_\_



Determine if the triangle shown is a right triangle (yes) or not (no).

Answers



1. yes

2. no

3. no

4. no

5. no

6. no

7. no

8. yes

9. yes

10. yes

11. yes

12. no

13. no

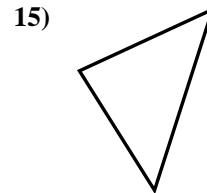

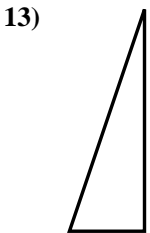
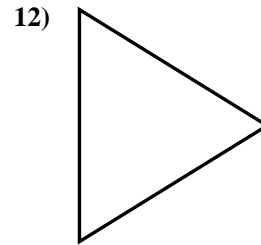
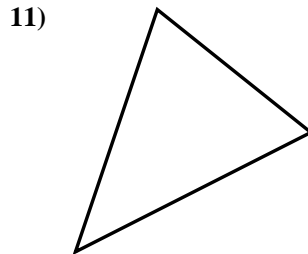
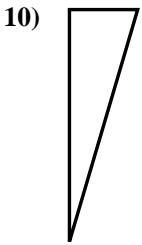
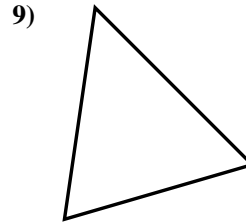
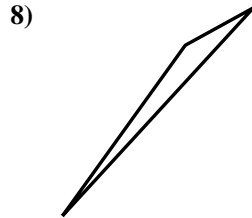
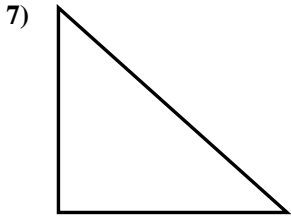
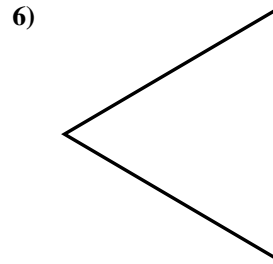
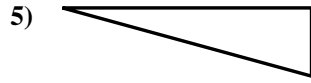
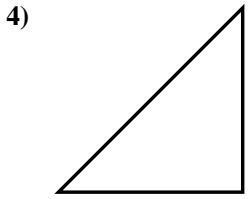
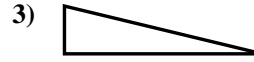
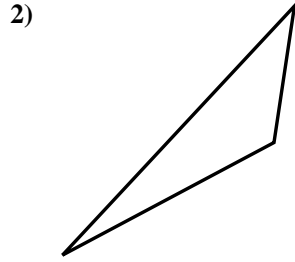
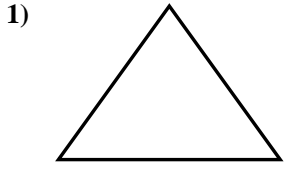
14. no

15. yes



Determine if the triangle shown is a right triangle (yes) or not (no).

Answers

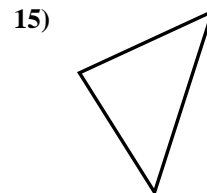

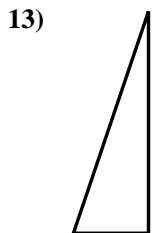
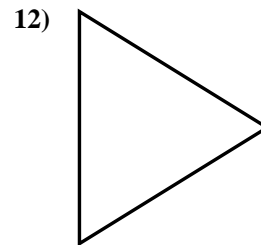
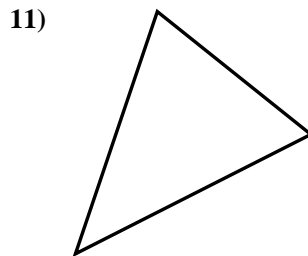
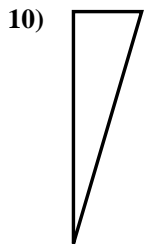
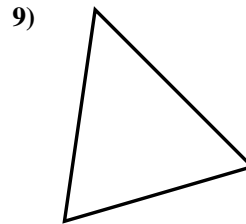
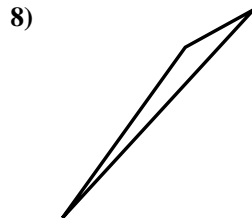
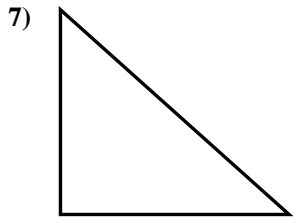
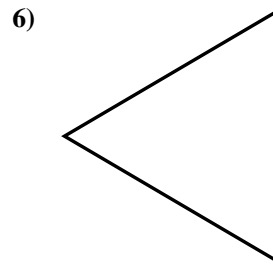
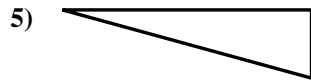
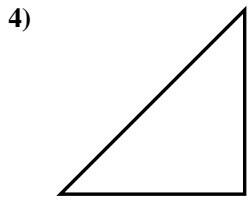
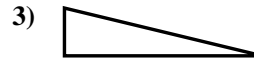
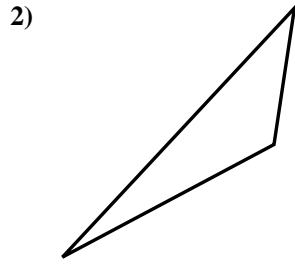
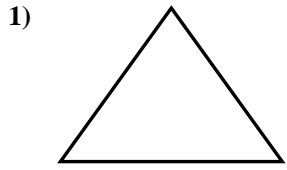


- 1. \_\_\_\_\_
- 2. \_\_\_\_\_
- 3. \_\_\_\_\_
- 4. \_\_\_\_\_
- 5. \_\_\_\_\_
- 6. \_\_\_\_\_
- 7. \_\_\_\_\_
- 8. \_\_\_\_\_
- 9. \_\_\_\_\_
- 10. \_\_\_\_\_
- 11. \_\_\_\_\_
- 12. \_\_\_\_\_
- 13. \_\_\_\_\_
- 14. \_\_\_\_\_
- 15. \_\_\_\_\_



Determine if the triangle shown is a right triangle (yes) or not (no).

Answers



1. no

2. no

3. yes

4. yes

5. yes

6. no

7. yes

8. no

9. no

10. yes

11. no

12. no

13. yes

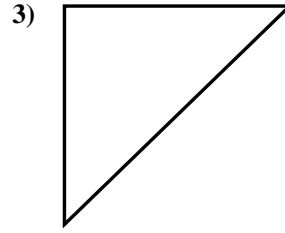
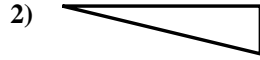
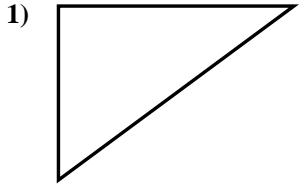
14. no

15. no

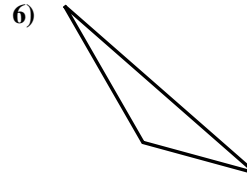
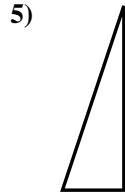
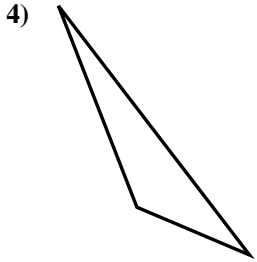


Determine if the triangle shown is a right triangle (yes) or not (no).

Answers



1. \_\_\_\_\_



2. \_\_\_\_\_

3. \_\_\_\_\_

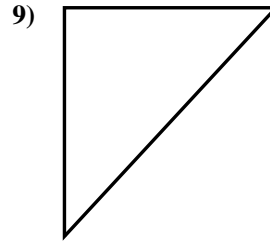
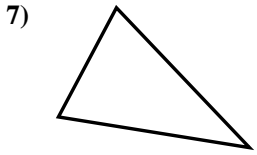
4. \_\_\_\_\_

5. \_\_\_\_\_

6. \_\_\_\_\_

7. \_\_\_\_\_

8. \_\_\_\_\_

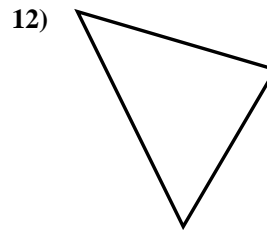
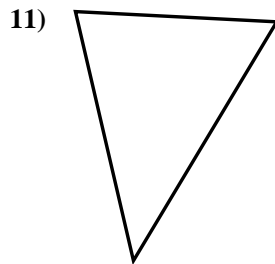
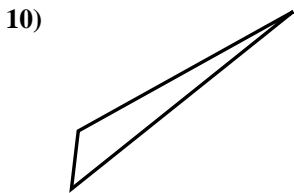


9. \_\_\_\_\_

10. \_\_\_\_\_

11. \_\_\_\_\_

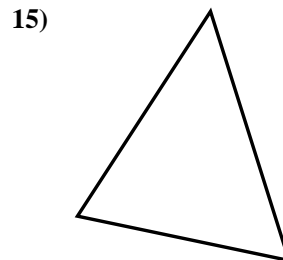
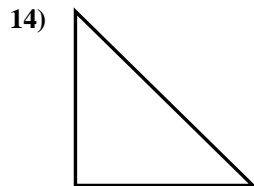
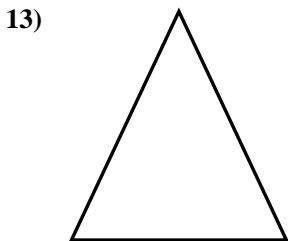
12. \_\_\_\_\_



13. \_\_\_\_\_

14. \_\_\_\_\_

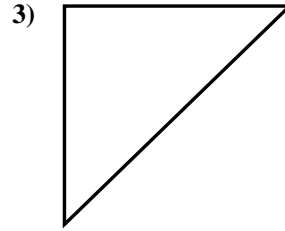
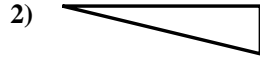
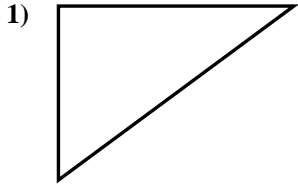
15. \_\_\_\_\_





Determine if the triangle shown is a right triangle (yes) or not (no).

Answers

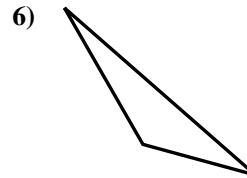
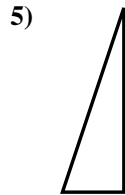
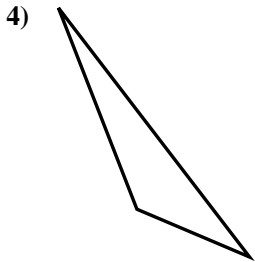


1. yes

2. yes

3. yes

4. no

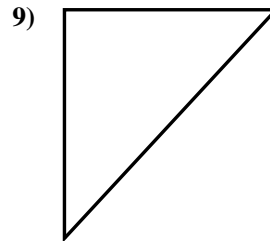
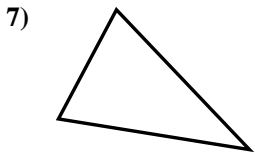


5. yes

6. no

7. no

8. yes

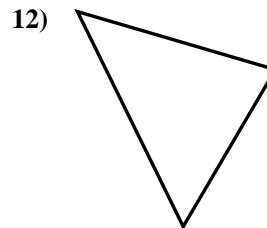
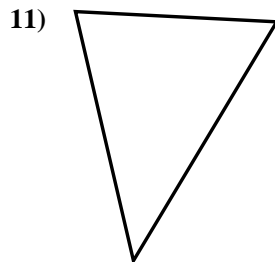
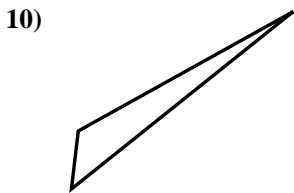


9. yes

10. no

11. no

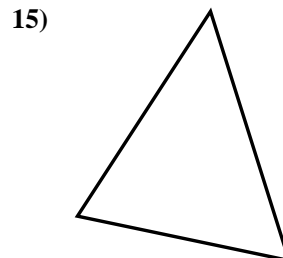
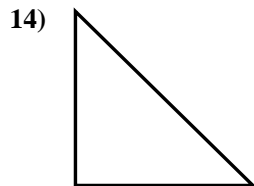
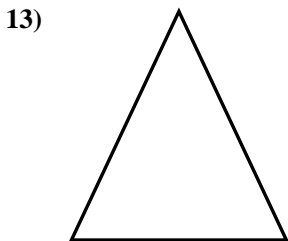
12. no



13. no

14. yes

15. no

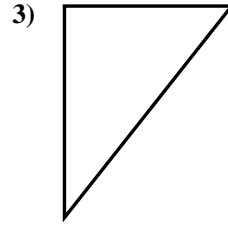





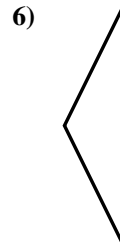

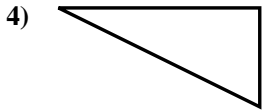


Determine if the triangle shown is a right triangle (yes) or not (no).

Answers



1. \_\_\_\_\_



2. \_\_\_\_\_

3. \_\_\_\_\_

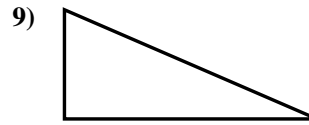
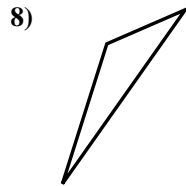

4. \_\_\_\_\_

5. \_\_\_\_\_

6. \_\_\_\_\_

7. \_\_\_\_\_

8. \_\_\_\_\_


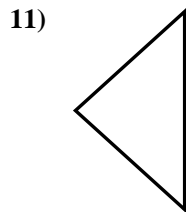
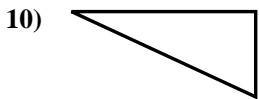


9. \_\_\_\_\_

10. \_\_\_\_\_

11. \_\_\_\_\_

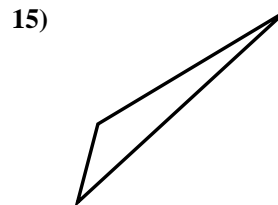
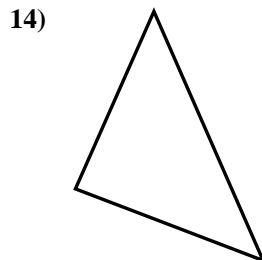
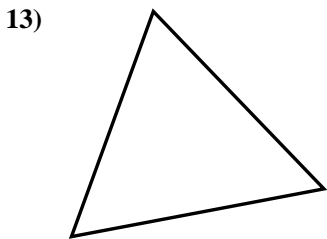
12. \_\_\_\_\_



13. \_\_\_\_\_

14. \_\_\_\_\_

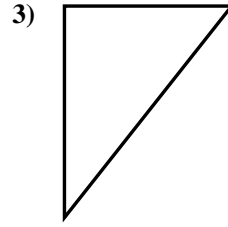

15. \_\_\_\_\_



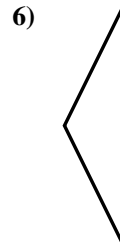

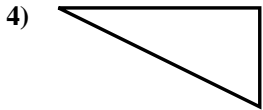


Determine if the triangle shown is a right triangle (yes) or not (no).

Answers



1. yes



2. yes

3. yes

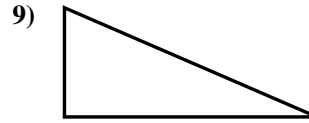
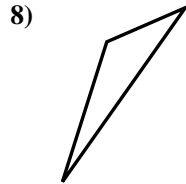

4. yes

5. no

6. no

7. no

8. no


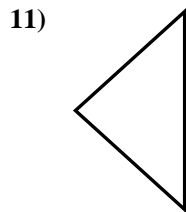
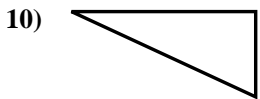


9. yes

10. yes

11. no

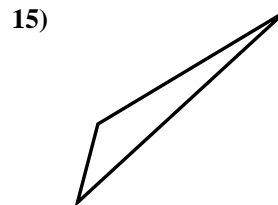
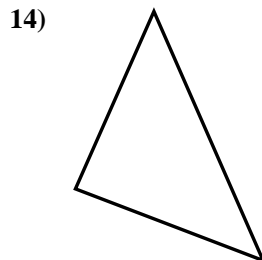
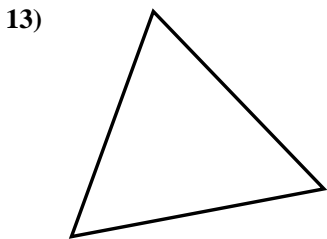
12. yes



13. no

14. yes

15. no

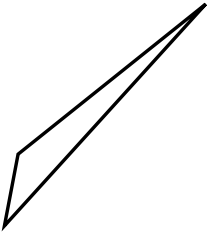




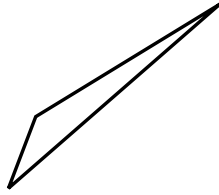
Determine if the triangle shown is a right triangle (yes) or not (no).

Answers

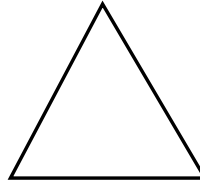
1)



2)



3)



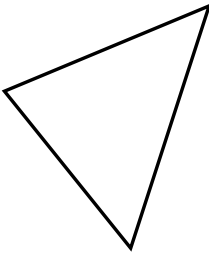
1. \_\_\_\_\_

2. \_\_\_\_\_

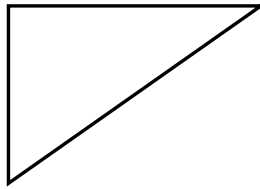
3. \_\_\_\_\_

4. \_\_\_\_\_


4)



5)



6)




5. \_\_\_\_\_

6. \_\_\_\_\_

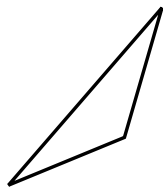
7. \_\_\_\_\_

8. \_\_\_\_\_


7)



8)



9)



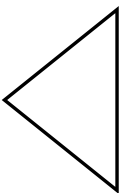
9. \_\_\_\_\_

10. \_\_\_\_\_

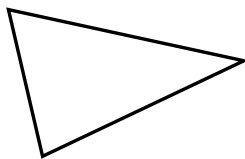
11. \_\_\_\_\_

12. \_\_\_\_\_

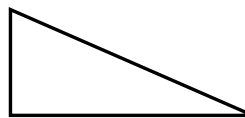
10)



11)



12)

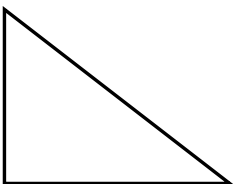


13. \_\_\_\_\_

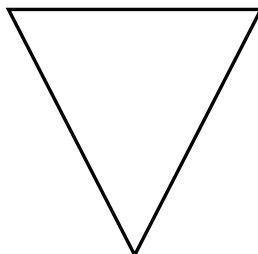
14. \_\_\_\_\_

15. \_\_\_\_\_

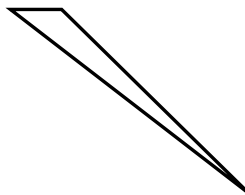
13)



14)



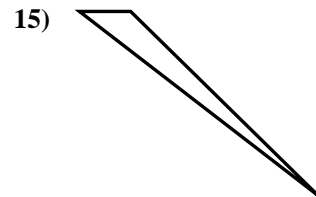
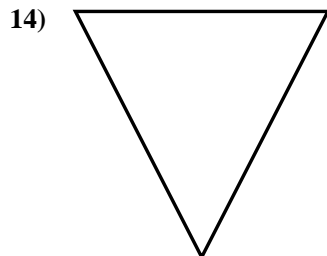
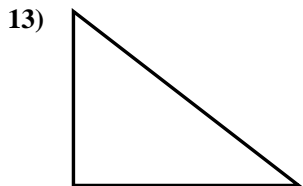
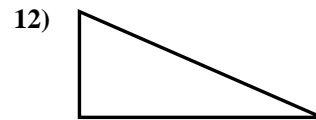
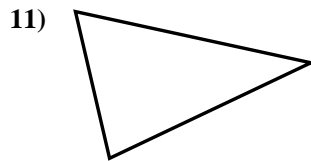
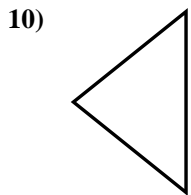
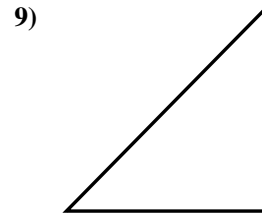
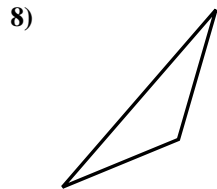
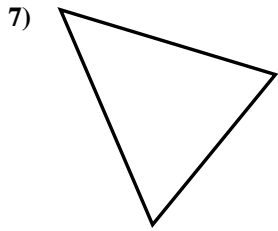
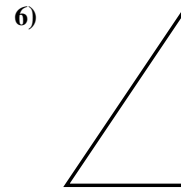
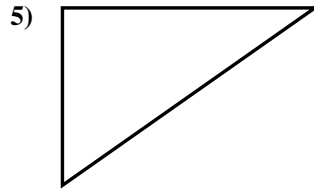
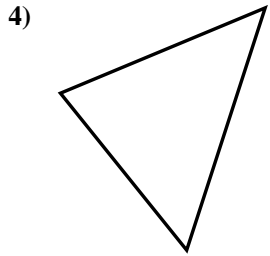
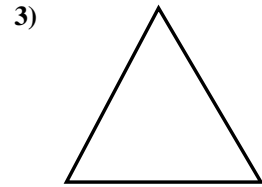
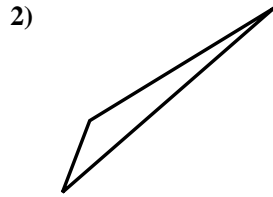
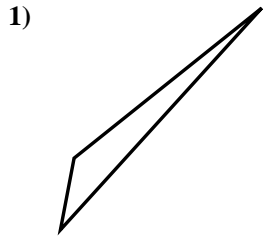
15)





Determine if the triangle shown is a right triangle (yes) or not (no).

Answers



1. no

2. no

3. no

4. no

5. yes

6. yes

7. no

8. no

9. yes

10. no

11. no

12. yes

13. yes

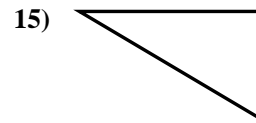
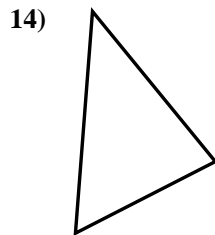
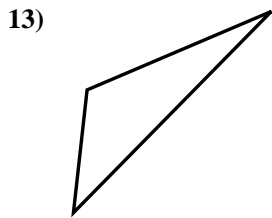
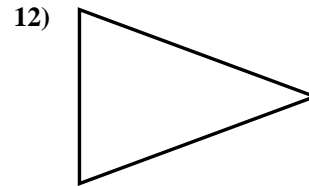
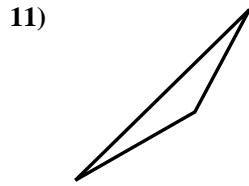
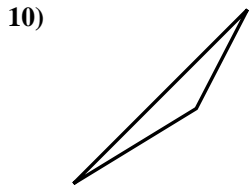
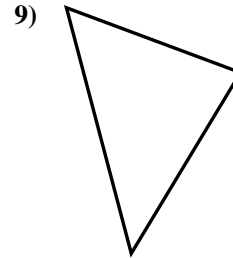
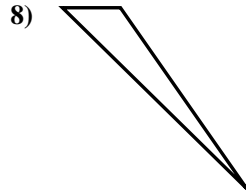
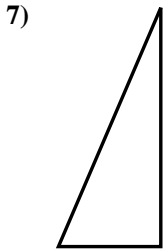
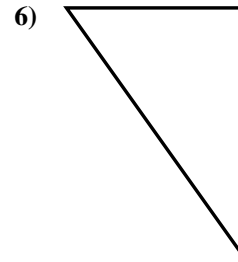
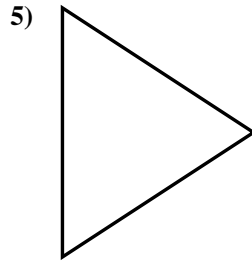
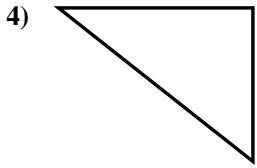
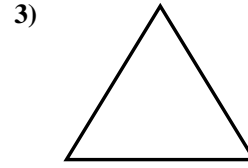
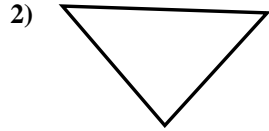
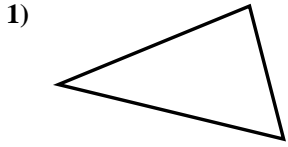
14. no

15. no



Determine if the triangle shown is a right triangle (yes) or not (no).

Answers

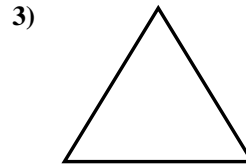
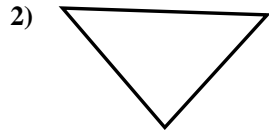
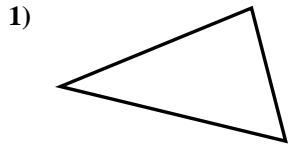


- 1. \_\_\_\_\_
- 2. \_\_\_\_\_
- 3. \_\_\_\_\_
- 4. \_\_\_\_\_
- 5. \_\_\_\_\_
- 6. \_\_\_\_\_
- 7. \_\_\_\_\_
- 8. \_\_\_\_\_
- 9. \_\_\_\_\_
- 10. \_\_\_\_\_
- 11. \_\_\_\_\_
- 12. \_\_\_\_\_
- 13. \_\_\_\_\_
- 14. \_\_\_\_\_
- 15. \_\_\_\_\_



Determine if the triangle shown is a right triangle (yes) or not (no).

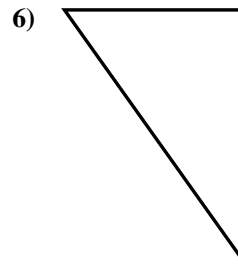
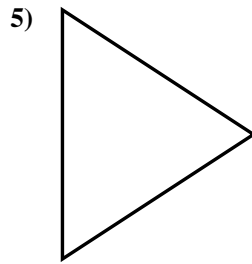
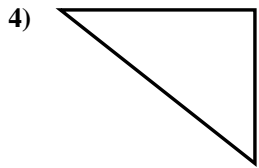
Answers



1. no

2. no

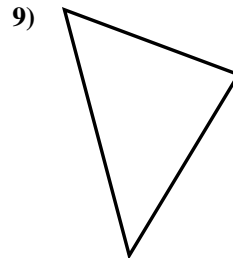
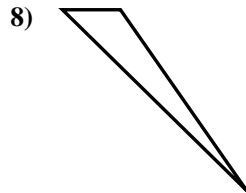
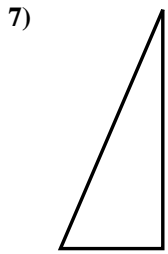
3. no



4. yes

5. no

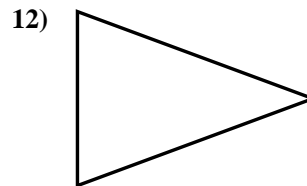
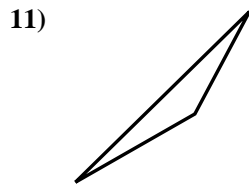
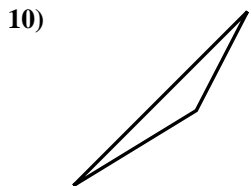
6. yes



7. yes

8. no

9. no



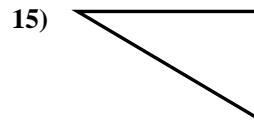
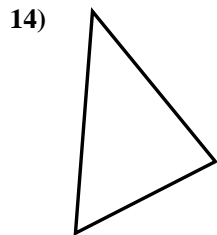
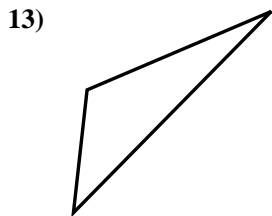
10. no

11. no

12. no

13. no

14. no

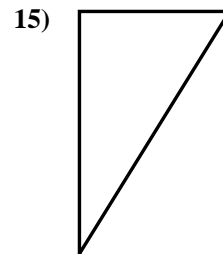
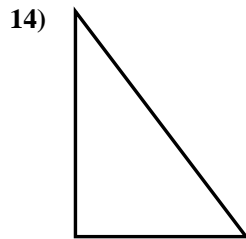
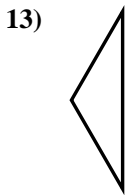
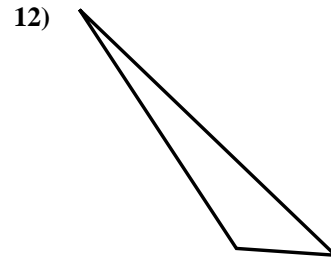
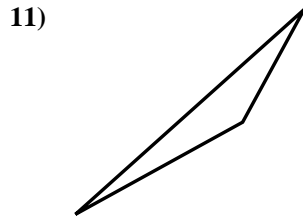
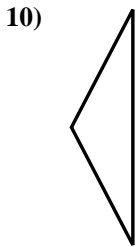
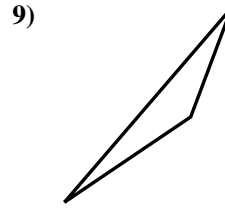
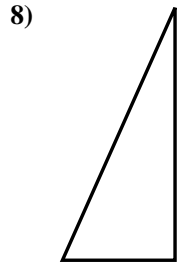

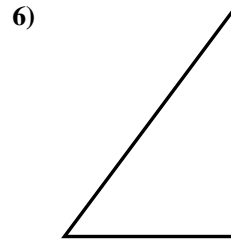
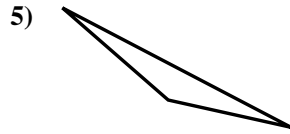
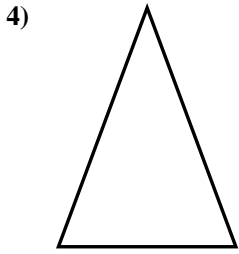
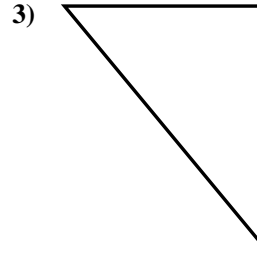
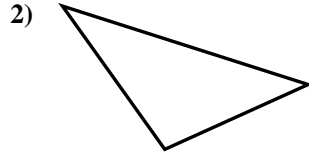
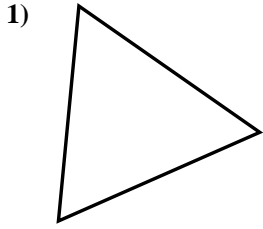


15. yes



Determine if the triangle shown is a right triangle (yes) or not (no).

Answers

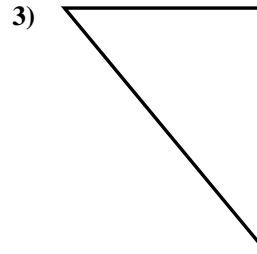
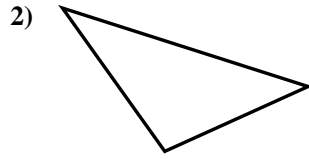
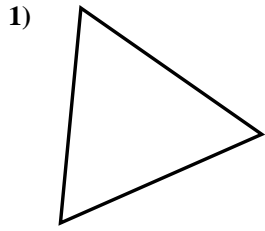


- 1. \_\_\_\_\_
- 2. \_\_\_\_\_
- 3. \_\_\_\_\_
- 4. \_\_\_\_\_
- 5. \_\_\_\_\_
- 6. \_\_\_\_\_
- 7. \_\_\_\_\_
- 8. \_\_\_\_\_
- 9. \_\_\_\_\_
- 10. \_\_\_\_\_
- 11. \_\_\_\_\_
- 12. \_\_\_\_\_
- 13. \_\_\_\_\_
- 14. \_\_\_\_\_
- 15. \_\_\_\_\_



Determine if the triangle shown is a right triangle (yes) or not (no).

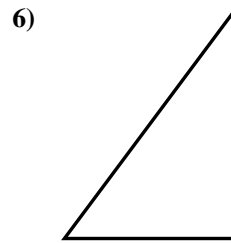
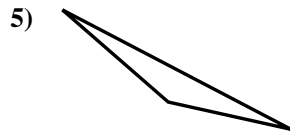
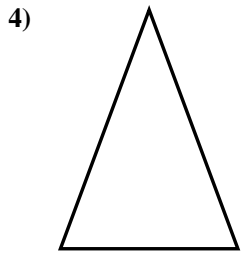
Answers



1. no

2. no

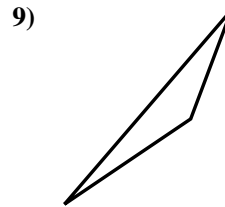
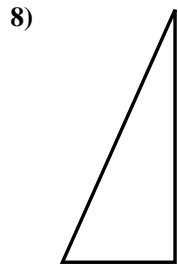

3. yes



4. no

5. no

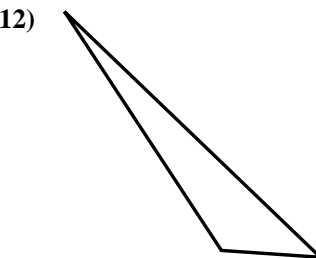
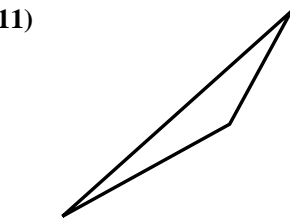
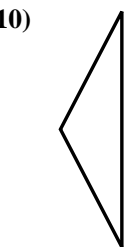
6. yes



7. no

8. yes

9. no

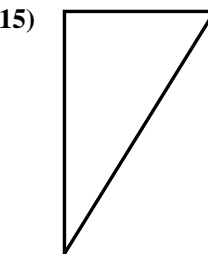
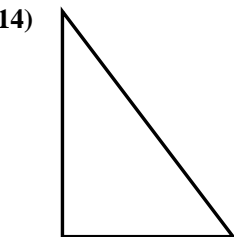
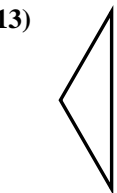


10. no

11. no

12. no

13. no



14. yes

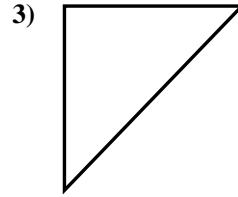
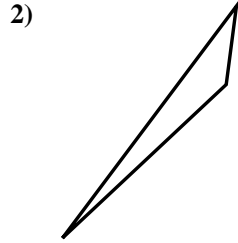
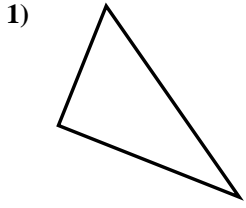
15. yes





Determine if the triangle shown is a right triangle (yes) or not (no).

Answers

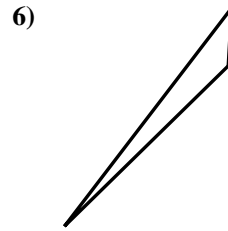
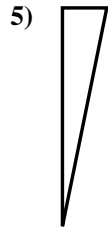
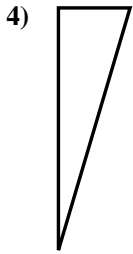


1. \_\_\_\_\_

2. \_\_\_\_\_

3. \_\_\_\_\_

4. \_\_\_\_\_

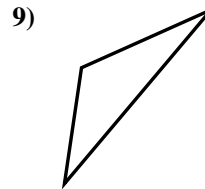
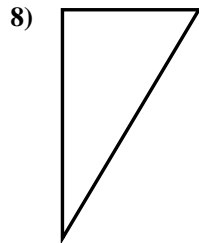
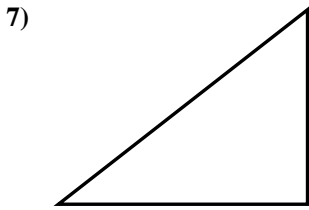


5. \_\_\_\_\_

6. \_\_\_\_\_

7. \_\_\_\_\_

8. \_\_\_\_\_

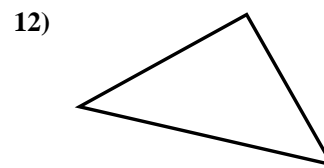
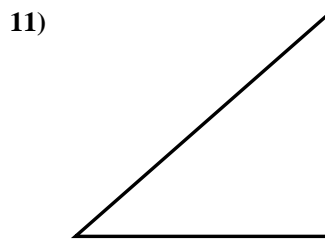
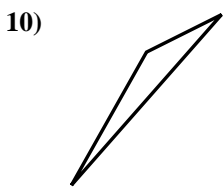


9. \_\_\_\_\_

10. \_\_\_\_\_

11. \_\_\_\_\_

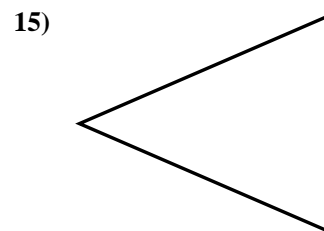
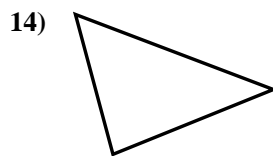
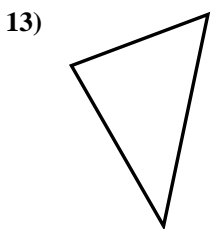
12. \_\_\_\_\_



13. \_\_\_\_\_

14. \_\_\_\_\_

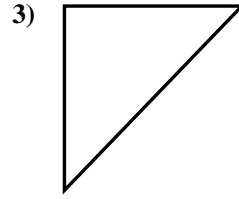
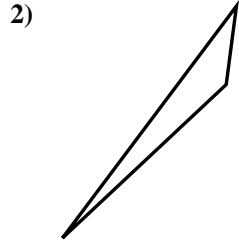
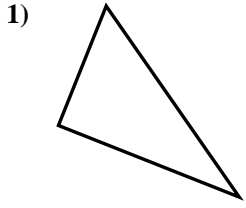
15. \_\_\_\_\_



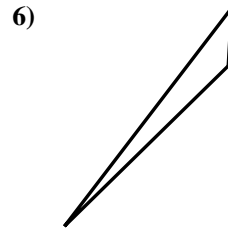
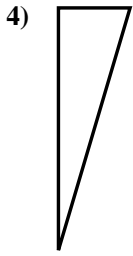


Determine if the triangle shown is a right triangle (yes) or not (no).

Answers



1. yes



2. no

3. yes

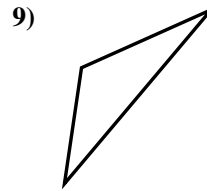
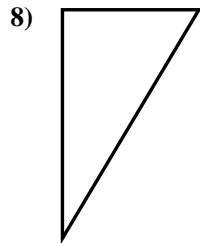
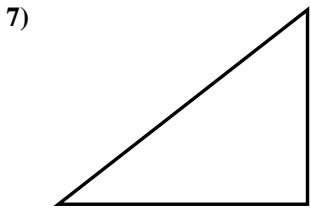
4. yes

5. yes

6. no

7. yes

8. yes

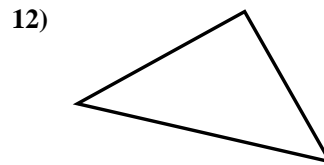
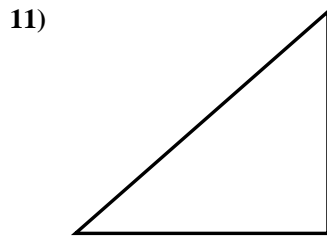
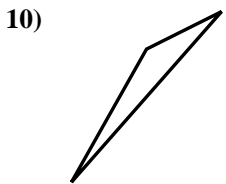


9. no

10. no

11. yes

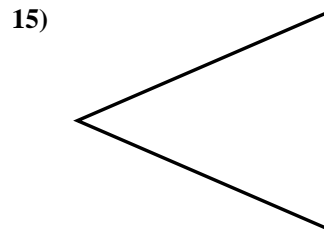
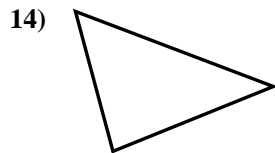
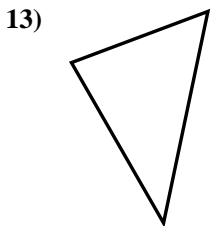
12. yes



13. no

14. no

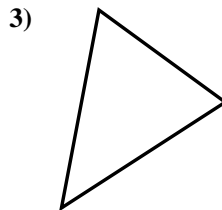
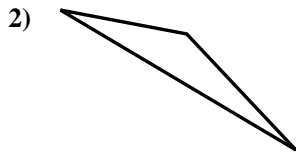
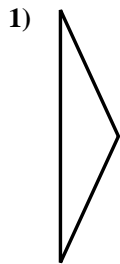
15. no



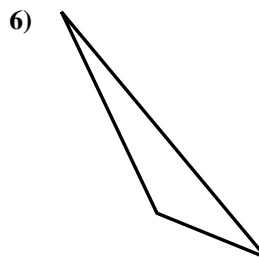
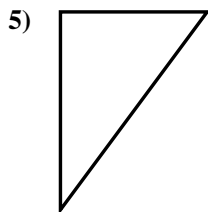
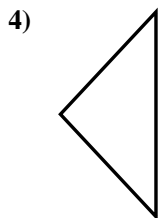


Determine if the triangle shown is a right triangle (yes) or not (no).

Answers



1. \_\_\_\_\_



2. \_\_\_\_\_

3. \_\_\_\_\_

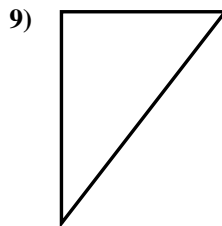
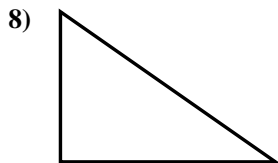
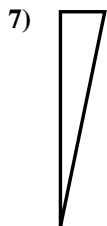
4. \_\_\_\_\_

5. \_\_\_\_\_

6. \_\_\_\_\_

7. \_\_\_\_\_

8. \_\_\_\_\_

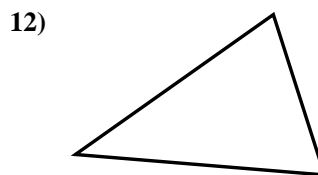
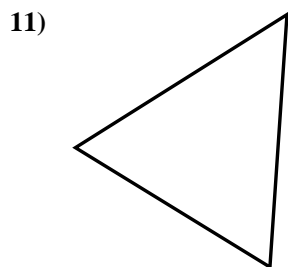
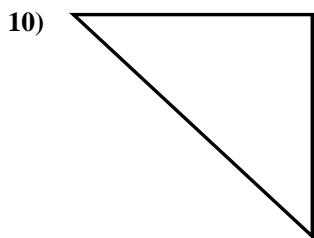


9. \_\_\_\_\_

10. \_\_\_\_\_

11. \_\_\_\_\_

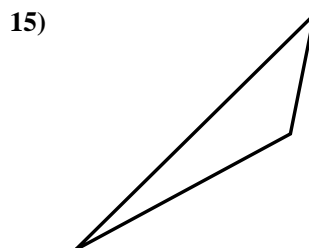
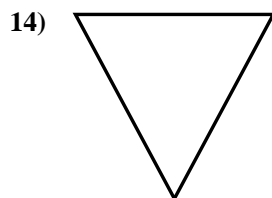
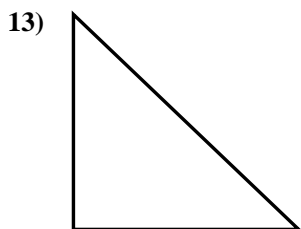
12. \_\_\_\_\_



13. \_\_\_\_\_

14. \_\_\_\_\_

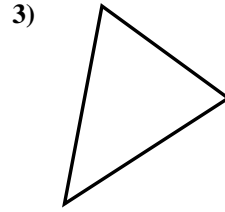
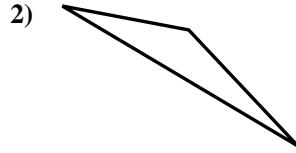
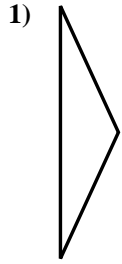
15. \_\_\_\_\_



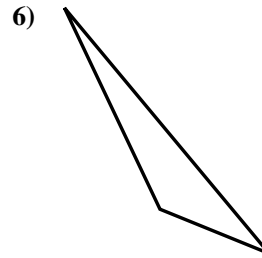
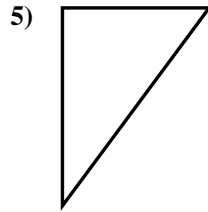
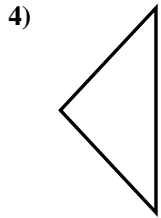


Determine if the triangle shown is a right triangle (yes) or not (no).

Answers



1. no



2. no

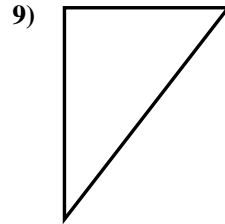
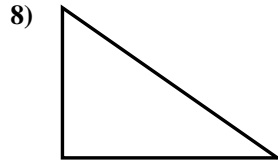
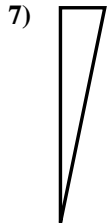
3. no

4. no

5. yes

6. no

7. yes

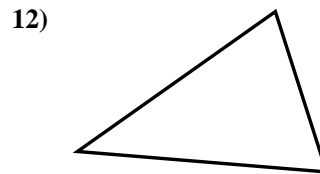
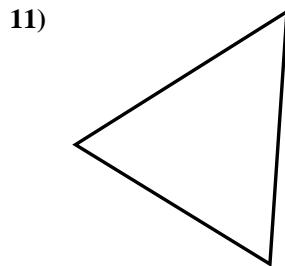
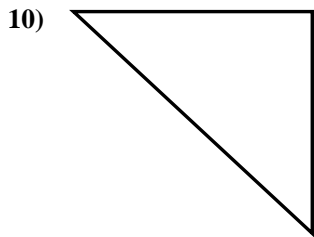


8. yes

9. yes

10. yes

11. no



12. no

13. yes

14. no

15. no

