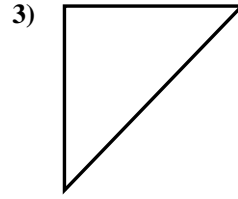
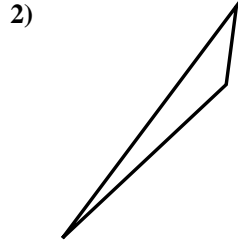
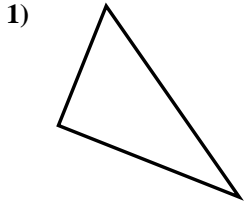




Determine if the triangle shown is a right triangle (yes) or not (no).

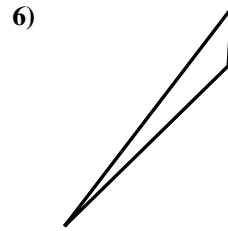
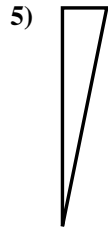
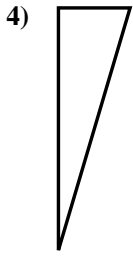
Answers



1. \_\_\_\_\_

2. \_\_\_\_\_

3. \_\_\_\_\_



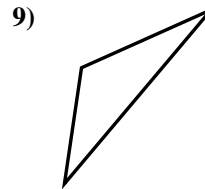
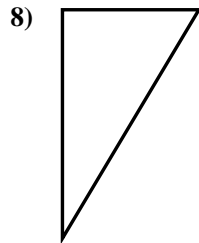
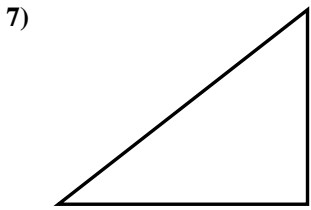
4. \_\_\_\_\_

5. \_\_\_\_\_

6. \_\_\_\_\_

7. \_\_\_\_\_

8. \_\_\_\_\_

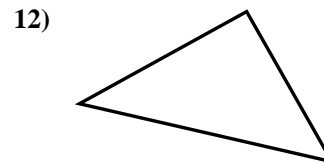
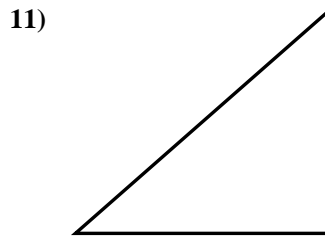
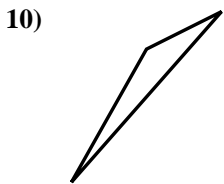


9. \_\_\_\_\_

10. \_\_\_\_\_

11. \_\_\_\_\_

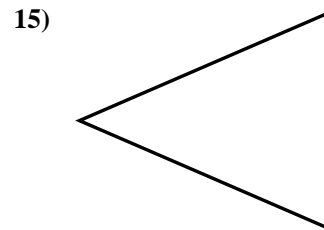
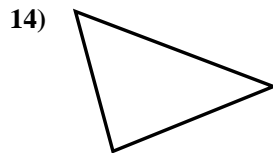
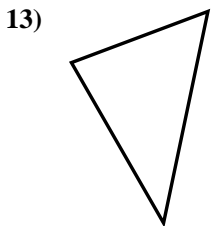
12. \_\_\_\_\_



13. \_\_\_\_\_

14. \_\_\_\_\_

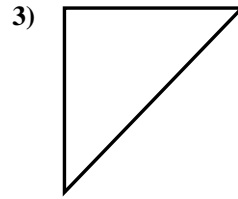
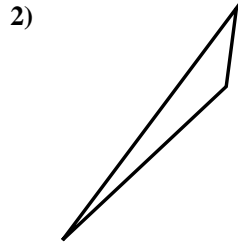
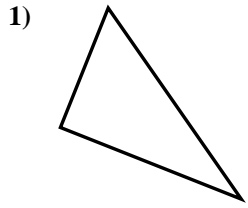
15. \_\_\_\_\_



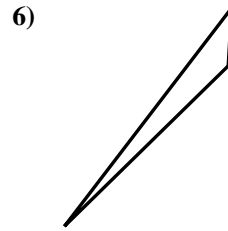
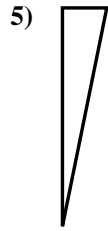
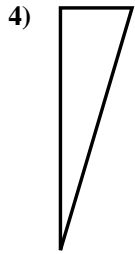


Determine if the triangle shown is a right triangle (yes) or not (no).

Answers



1. yes



2. no

3. yes

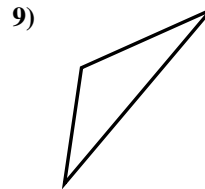
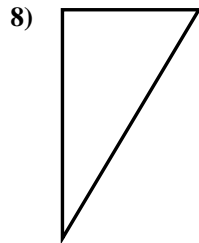
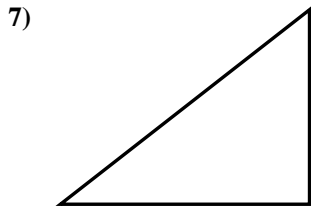
4. yes

5. yes

6. no

7. yes

8. yes

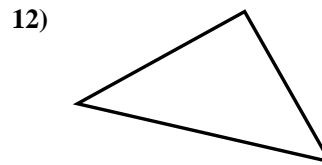
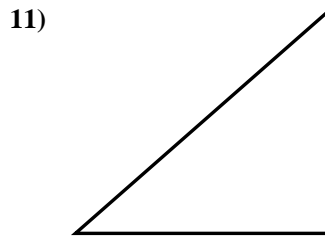
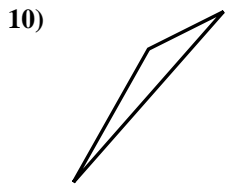


9. no

10. no

11. yes

12. yes



13. no

14. no

15. no

