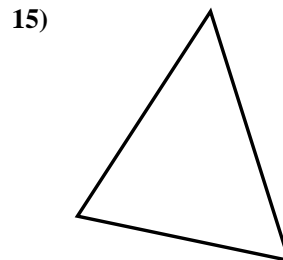
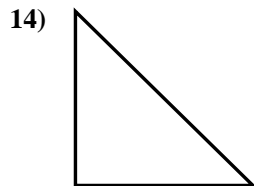
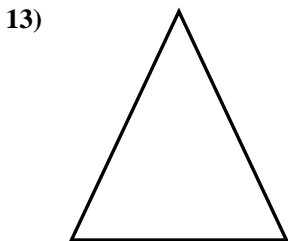
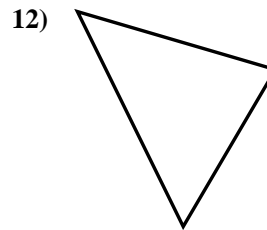
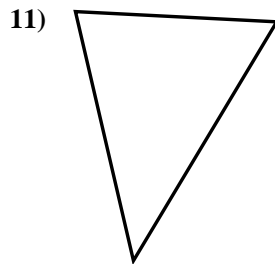
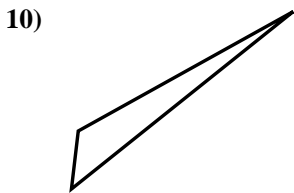
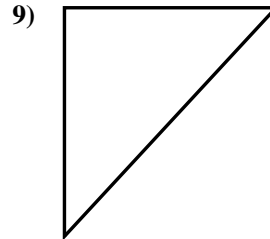
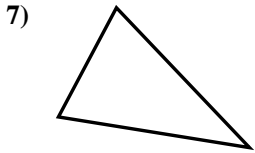
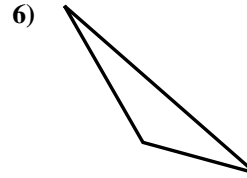
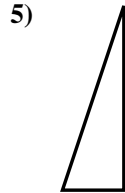
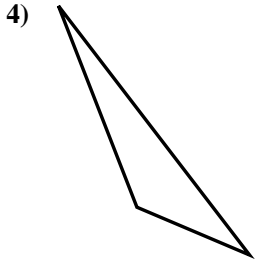
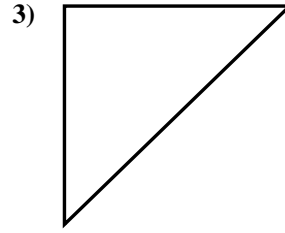
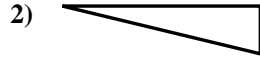
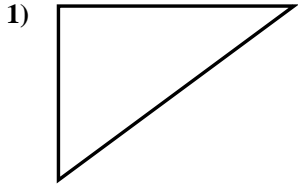




Determine if the triangle shown is a right triangle (yes) or not (no).

Answers

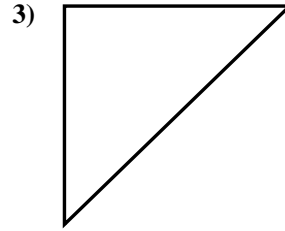
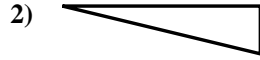
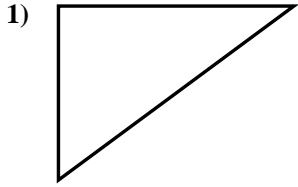


- 1. _____
- 2. _____
- 3. _____
- 4. _____
- 5. _____
- 6. _____
- 7. _____
- 8. _____
- 9. _____
- 10. _____
- 11. _____
- 12. _____
- 13. _____
- 14. _____
- 15. _____



Determine if the triangle shown is a right triangle (yes) or not (no).

Answers

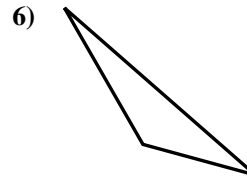
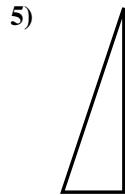
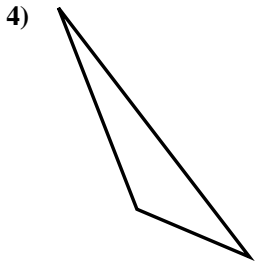


1. yes

2. yes

3. yes

4. no

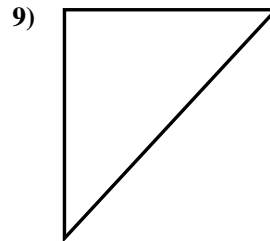
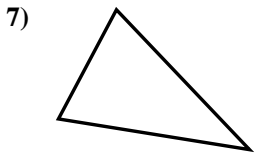


5. yes

6. no

7. no

8. yes

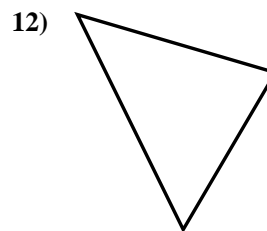
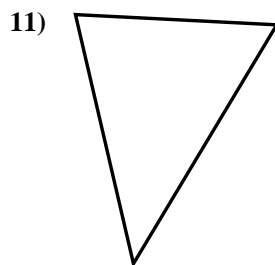
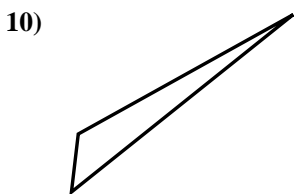


9. yes

10. no

11. no

12. no



13. no

14. yes

15. no

