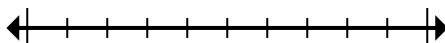




Mark the location (approximate) on the numberline and then solve.

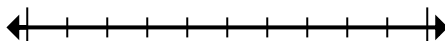
Answers

- 1) Round 808,484 to the nearest ten thousand.



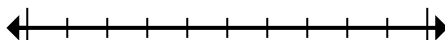
1. _____

- 2) Round 832,264 to the nearest thousand.



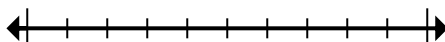
2. _____

- 3) Round 10,622,917 to the nearest hundred thousand.



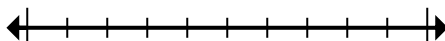
3. _____

- 4) Round 7,142,074 to the nearest ten thousand.



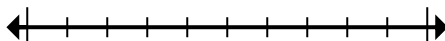
4. _____

- 5) Round 72,745 to the nearest ten thousand.



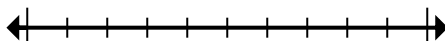
5. _____

- 6) Round 314 to the nearest hundred.



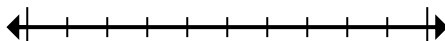
6. _____

- 7) Round 2,720 to the nearest thousand.



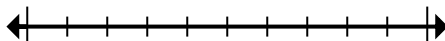
7. _____

- 8) Round 80,764 to the nearest ten thousand.



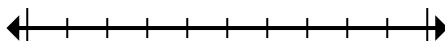
8. _____

- 9) Round 633,653 to the nearest thousand.



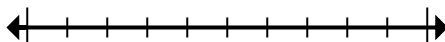
9. _____

- 10) Round 151,433 to the nearest hundred.



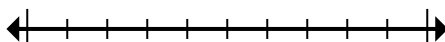
10. _____

- 11) Round 2,415 to the nearest hundred.



11. _____

- 12) Round 42,974,961 to the nearest hundred thousand.



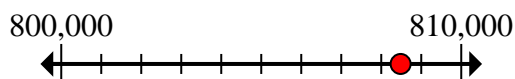
12. _____



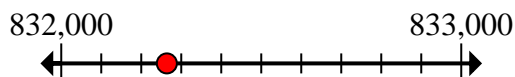
Mark the location (approximate) on the numberline and then solve.

Answers

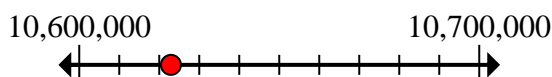
- 1) Round 808,484 to the nearest ten thousand.

1. **810,000**

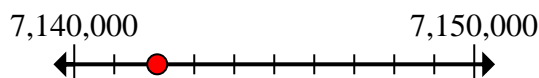
- 2) Round 832,264 to the nearest thousand.

2. **832,000**

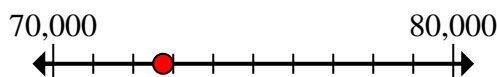
- 3) Round 10,622,917 to the nearest hundred thousand.

3. **10,600,000**

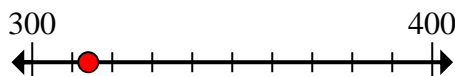
- 4) Round 7,142,074 to the nearest ten thousand.

4. **7,140,000**

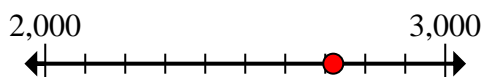
- 5) Round 72,745 to the nearest ten thousand.

5. **70,000**

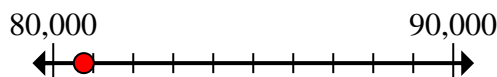
- 6) Round 314 to the nearest hundred.

6. **300**

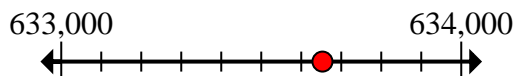
- 7) Round 2,720 to the nearest thousand.

7. **3,000**

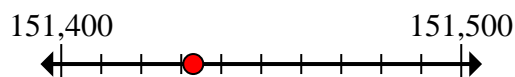
- 8) Round 80,764 to the nearest ten thousand.

8. **80,000**

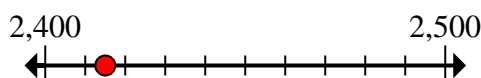
- 9) Round 633,653 to the nearest thousand.

9. **634,000**

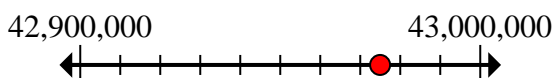
- 10) Round 151,433 to the nearest hundred.

10. **151,400**

- 11) Round 2,415 to the nearest hundred.

11. **2,400**

- 12) Round 42,974,961 to the nearest hundred thousand.

12. **43,000,000**

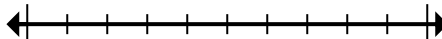


Mark the location (approximate) on the numberline and then solve.

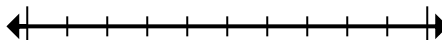
Answers

3,000	151,400	832,000	10,600,000
70,000	80,000	7,140,000	300
634,000	810,000	2,400	43,000,000

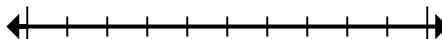
- 1) Round 808,484 to the nearest ten thousand.



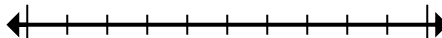
- 2) Round 832,264 to the nearest thousand.



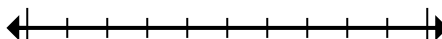
- 3) Round 10,622,917 to the nearest hundred thousand.



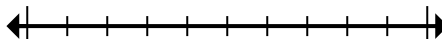
- 4) Round 7,142,074 to the nearest ten thousand.



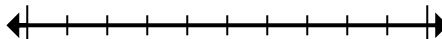
- 5) Round 72,745 to the nearest ten thousand.



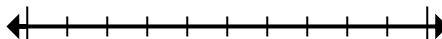
- 6) Round 314 to the nearest hundred.



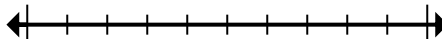
- 7) Round 2,720 to the nearest thousand.



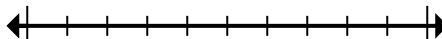
- 8) Round 80,764 to the nearest ten thousand.



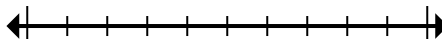
- 9) Round 633,653 to the nearest thousand.



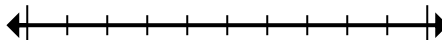
- 10) Round 151,433 to the nearest hundred.



- 11) Round 2,415 to the nearest hundred.



- 12) Round 42,974,961 to the nearest hundred thousand.



1. _____
2. _____
3. _____
4. _____
5. _____
6. _____
7. _____
8. _____
9. _____
10. _____
11. _____
12. _____