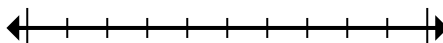




Mark the location (approximate) on the numberline and then solve.

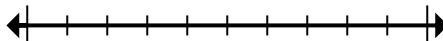
Answers

- 1) Round 1,241 to the nearest thousand.



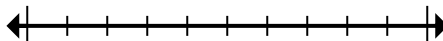
1. _____

- 2) Round 768 to the nearest hundred.



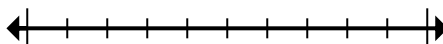
2. _____

- 3) Round 318,652 to the nearest hundred.



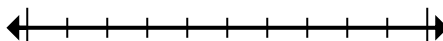
3. _____

- 4) Round 5,553,802 to the nearest thousand.



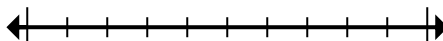
4. _____

- 5) Round 447,430 to the nearest hundred thousand.



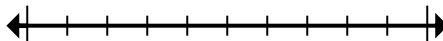
5. _____

- 6) Round 619,618 to the nearest ten thousand.



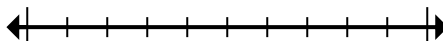
6. _____

- 7) Round 59,257 to the nearest thousand.



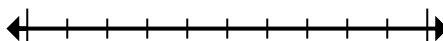
7. _____

- 8) Round 2,862,338 to the nearest ten thousand.



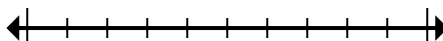
8. _____

- 9) Round 39,911,169 to the nearest hundred thousand.



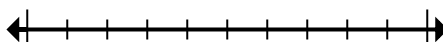
9. _____

- 10) Round 404 to the nearest hundred.



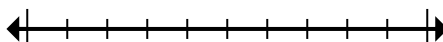
10. _____

- 11) Round 76,673 to the nearest ten thousand.



11. _____

- 12) Round 4,894 to the nearest thousand.

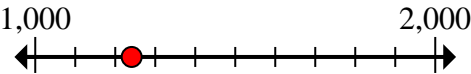
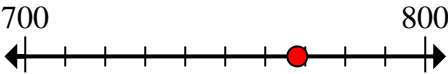
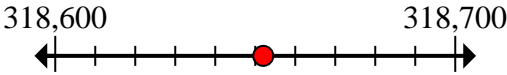
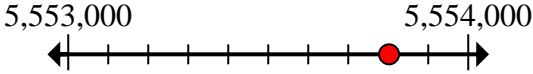
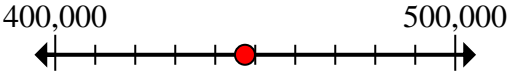
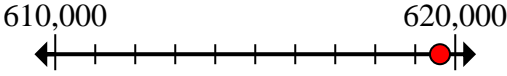
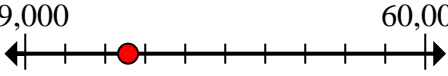
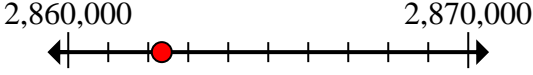
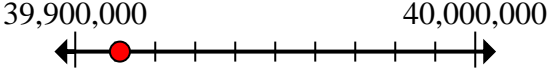
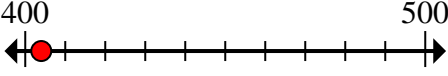
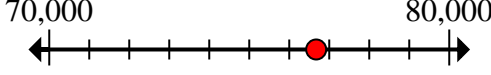
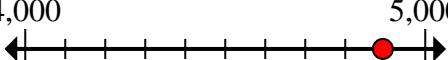


12. _____



Mark the location (approximate) on the numberline and then solve.

Answers

- 1) Round 1,241 to the nearest thousand.
- 
- 2) Round 768 to the nearest hundred.
- 
- 3) Round 318,652 to the nearest hundred.
- 
- 4) Round 5,553,802 to the nearest thousand.
- 
- 5) Round 447,430 to the nearest hundred thousand.
- 
- 6) Round 619,618 to the nearest ten thousand.
- 
- 7) Round 59,257 to the nearest thousand.
- 
- 8) Round 2,862,338 to the nearest ten thousand.
- 
- 9) Round 39,911,169 to the nearest hundred thousand.
- 
- 10) Round 404 to the nearest hundred.
- 
- 11) Round 76,673 to the nearest ten thousand.
- 
- 12) Round 4,894 to the nearest thousand.
- 
1. **1,000**
2. **800**
3. **318,700**
4. **5,554,000**
5. **400,000**
6. **620,000**
7. **59,000**
8. **2,860,000**
9. **39,900,000**
10. **400**
11. **80,000**
12. **5,000**

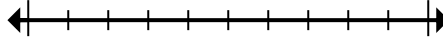


Mark the location (approximate) on the numberline and then solve.

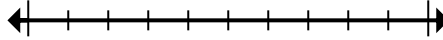
Answers

800	2,860,000	620,000	39,900,000
59,000	80,000	400,000	400
5,554,000	1,000	318,700	5,000

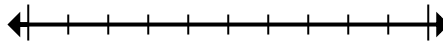
- 1) Round 1,241 to the nearest thousand.



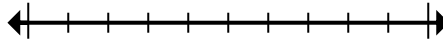
- 2) Round 768 to the nearest hundred.



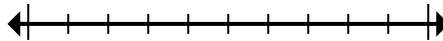
- 3) Round 318,652 to the nearest hundred.



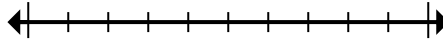
- 4) Round 5,553,802 to the nearest thousand.



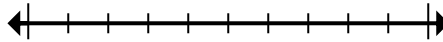
- 5) Round 447,430 to the nearest hundred thousand.



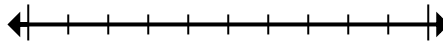
- 6) Round 619,618 to the nearest ten thousand.



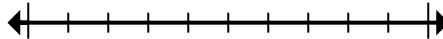
- 7) Round 59,257 to the nearest thousand.



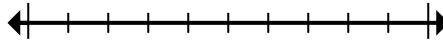
- 8) Round 2,862,338 to the nearest ten thousand.



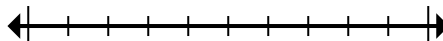
- 9) Round 39,911,169 to the nearest hundred thousand.



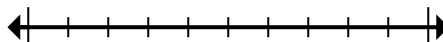
- 10) Round 404 to the nearest hundred.



- 11) Round 76,673 to the nearest ten thousand.



- 12) Round 4,894 to the nearest thousand.



1. _____
2. _____
3. _____
4. _____
5. _____
6. _____
7. _____
8. _____
9. _____
10. _____
11. _____
12. _____