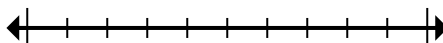




Mark the location (approximate) on the numberline and then solve.

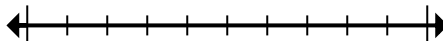
Answers

1) Round 52,817 to the nearest ten thousand.



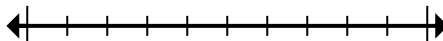
1. \_\_\_\_\_

2) Round 820,860 to the nearest hundred.



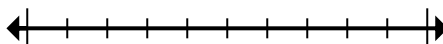
2. \_\_\_\_\_

3) Round 666,641 to the nearest ten thousand.



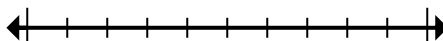
3. \_\_\_\_\_

4) Round 9,506 to the nearest thousand.



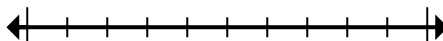
4. \_\_\_\_\_

5) Round 453,975 to the nearest hundred thousand.



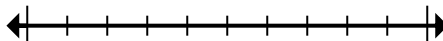
5. \_\_\_\_\_

6) Round 534,644 to the nearest hundred thousand.



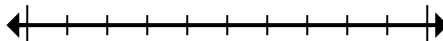
6. \_\_\_\_\_

7) Round 40,673,282 to the nearest hundred thousand.



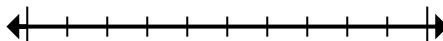
7. \_\_\_\_\_

8) Round 126,324 to the nearest ten thousand.



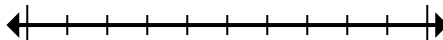
8. \_\_\_\_\_

9) Round 950 to the nearest hundred.



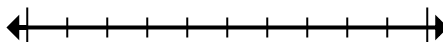
9. \_\_\_\_\_

10) Round 728,779 to the nearest thousand.



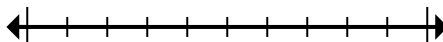
10. \_\_\_\_\_

11) Round 82,189 to the nearest ten thousand.



11. \_\_\_\_\_

12) Round 681,152 to the nearest thousand.

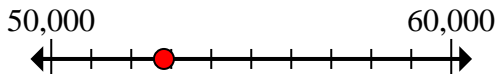


12. \_\_\_\_\_

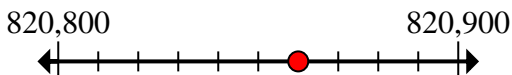


Mark the location (approximate) on the numberline and then solve.

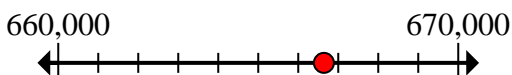
1) Round 52,817 to the nearest ten thousand.



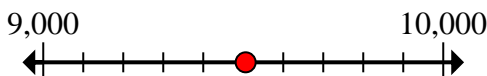
2) Round 820,860 to the nearest hundred.



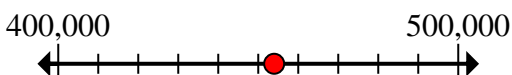
3) Round 666,641 to the nearest ten thousand.



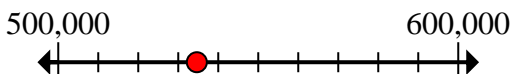
4) Round 9,506 to the nearest thousand.



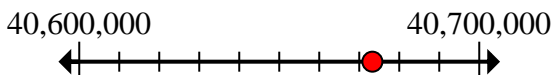
5) Round 453,975 to the nearest hundred thousand.



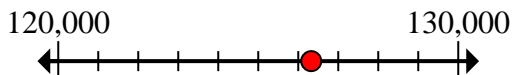
6) Round 534,644 to the nearest hundred thousand.



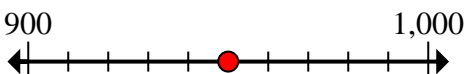
7) Round 40,673,282 to the nearest hundred thousand.



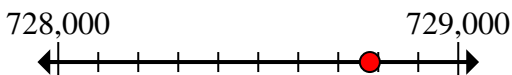
8) Round 126,324 to the nearest ten thousand.



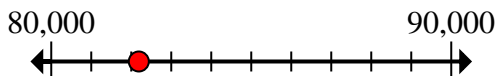
9) Round 950 to the nearest hundred.



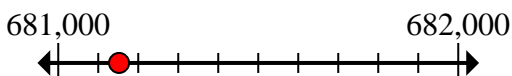
10) Round 728,779 to the nearest thousand.



11) Round 82,189 to the nearest ten thousand.



12) Round 681,152 to the nearest thousand.



Answers

1. 50,000

2. 820,900

3. 670,000

4. 10,000

5. 500,000

6. 500,000

7. 40,700,000

8. 130,000

9. 1,000

10. 729,000

11. 80,000

12. 681,000

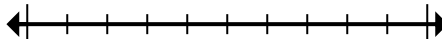


Mark the location (approximate) on the numberline and then solve.

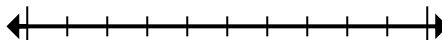
## Answers

670,000	80,000	681,000	729,000
500,000	130,000	50,000	10,000
40,700,000	500,000	1,000	820,900

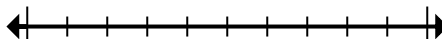
1) Round 52,817 to the nearest ten thousand.



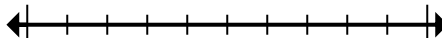
2) Round 820,860 to the nearest hundred.



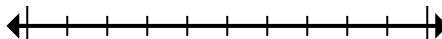
3) Round 666,641 to the nearest ten thousand.



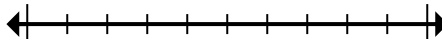
4) Round 9,506 to the nearest thousand.



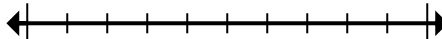
5) Round 453,975 to the nearest hundred thousand.



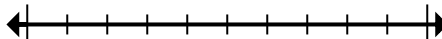
6) Round 534,644 to the nearest hundred thousand.



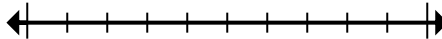
7) Round 40,673,282 to the nearest hundred thousand.



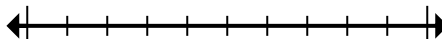
8) Round 126,324 to the nearest ten thousand.



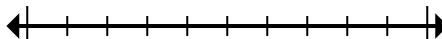
9) Round 950 to the nearest hundred.



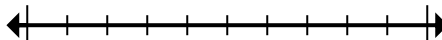
10) Round 728,779 to the nearest thousand.



11) Round 82,189 to the nearest ten thousand.



12) Round 681,152 to the nearest thousand.



1. \_\_\_\_\_
2. \_\_\_\_\_
3. \_\_\_\_\_
4. \_\_\_\_\_
5. \_\_\_\_\_
6. \_\_\_\_\_
7. \_\_\_\_\_
8. \_\_\_\_\_
9. \_\_\_\_\_
10. \_\_\_\_\_
11. \_\_\_\_\_
12. \_\_\_\_\_