



Use the numberlines to round each number to the nearest 100.

Answers

Ex)

612



Ex. 600

1)

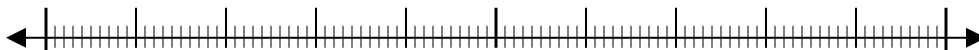
9,223



1. \_\_\_\_\_

2)

17,922



2. \_\_\_\_\_

3)

87,465



3. \_\_\_\_\_

4)

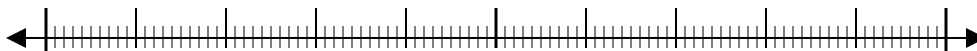
653



4. \_\_\_\_\_

5)

3,616



5. \_\_\_\_\_

6)

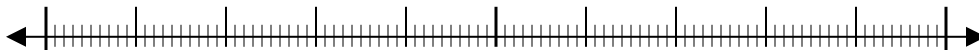
6,677



6. \_\_\_\_\_

7)

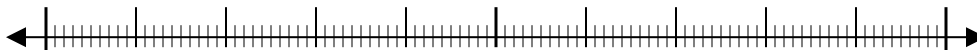
22,598



7. \_\_\_\_\_

8)

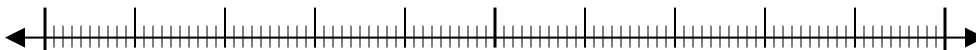
1,241



8. \_\_\_\_\_

9)

960



9. \_\_\_\_\_

10)

873

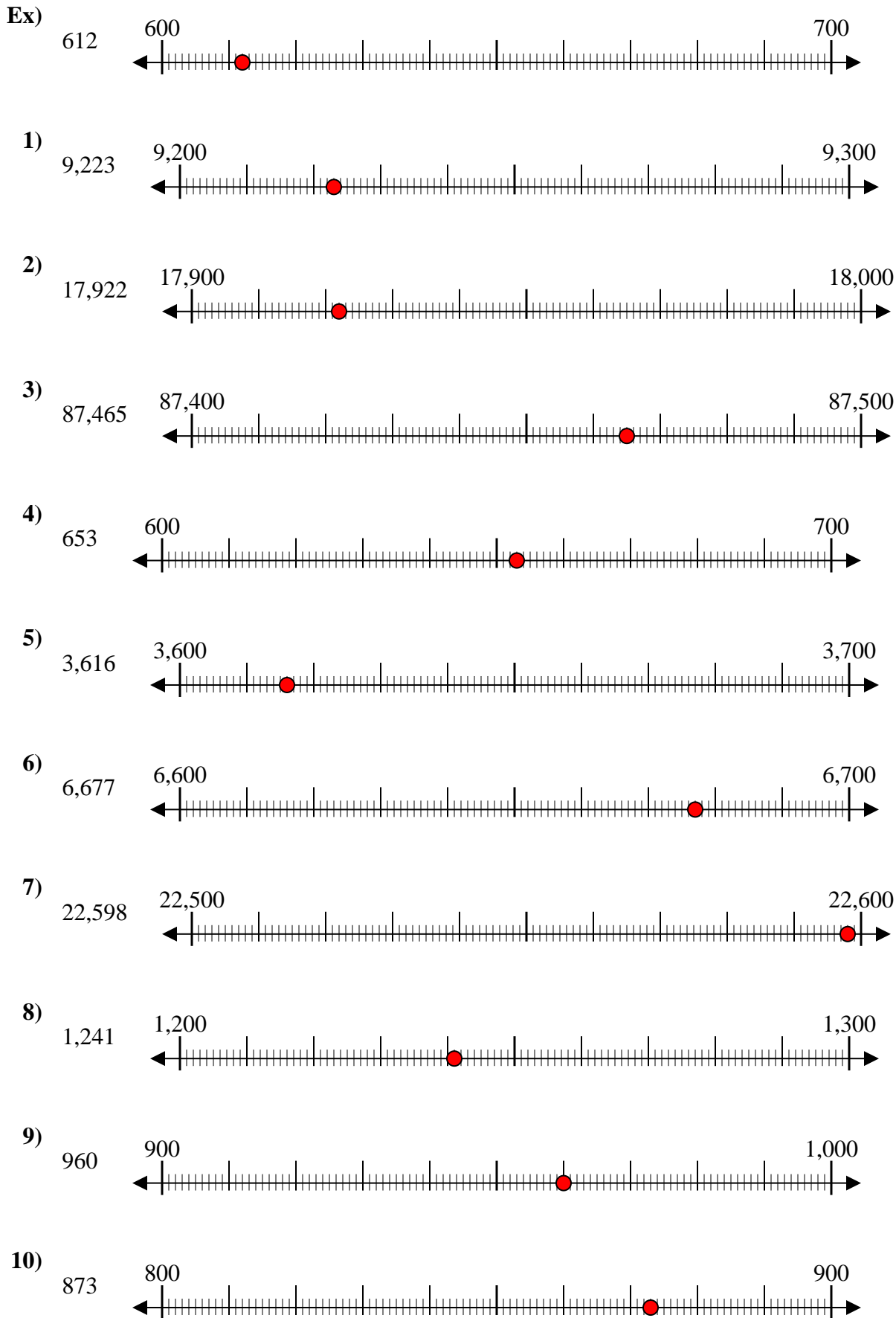


10. \_\_\_\_\_

10. \_\_\_\_\_



Use the numberlines to round each number to the nearest 100.



Answers

- Ex. 600
1. 9,200
2. 17,900
3. 87,500
4. 700
5. 3,600
6. 6,700
7. 22,600
8. 1,200
9. 1,000
10. 900



Use the numberlines to round each number to the nearest 100.

Answers

Ex)

356



Ex. 400

1)

1,360



1. \_\_\_\_\_

2)

7,216



2. \_\_\_\_\_

3)

51,669



3. \_\_\_\_\_

4)

670



4. \_\_\_\_\_

5)

171



5. \_\_\_\_\_

6)

80,458



6. \_\_\_\_\_

7)

9,425



7. \_\_\_\_\_

8)

616



8. \_\_\_\_\_

9)

88,299



9. \_\_\_\_\_

10)

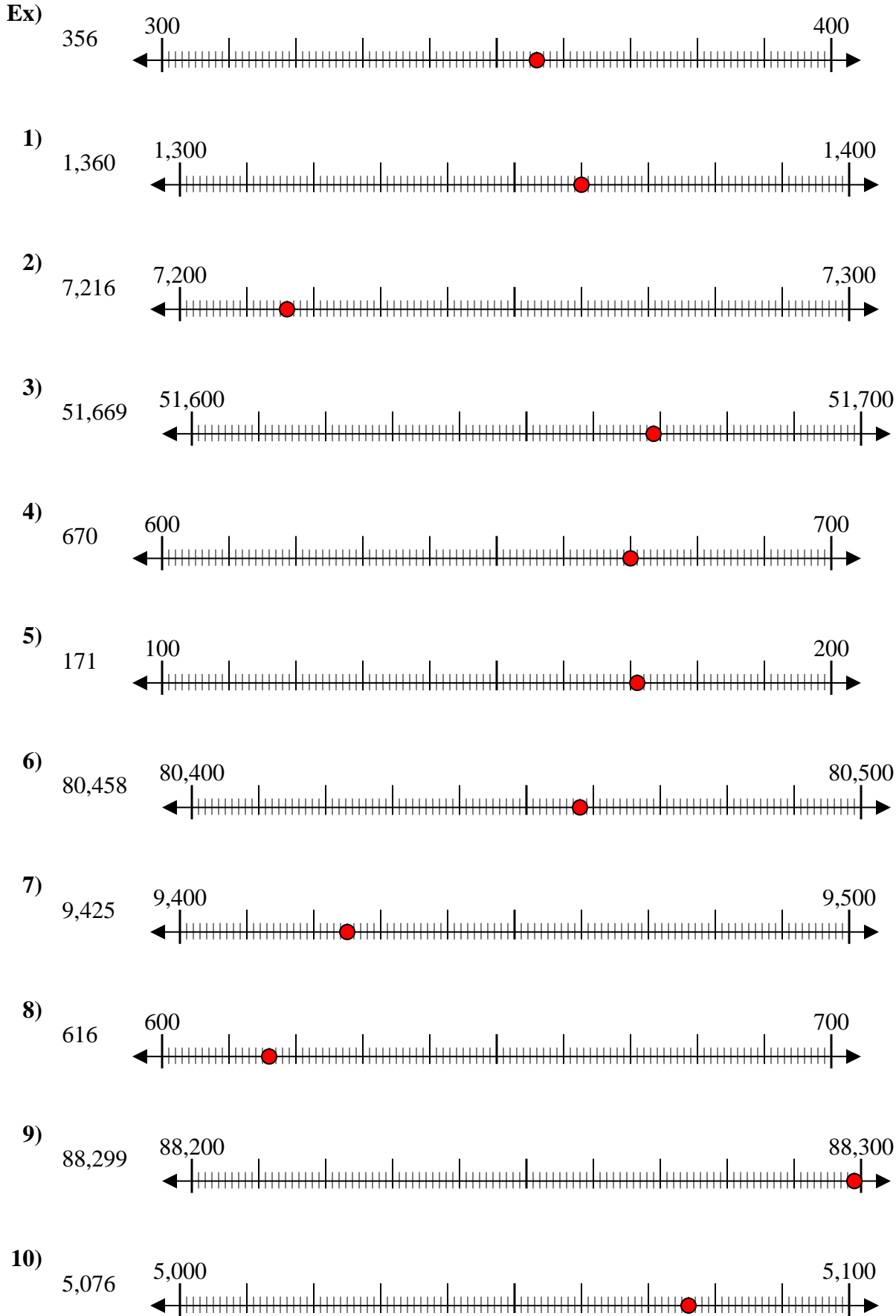
5,076



10. \_\_\_\_\_



Use the numberlines to round each number to the nearest 100.



Answers

- Ex. 400
1. 1,400
2. 7,200
3. 51,700
4. 700
5. 200
6. 80,500
7. 9,400
8. 600
9. 88,300
10. 5,100



Use the numberlines to round each number to the nearest 100.

Answers

Ex)

908



Ex. 900

1)

257



1. \_\_\_\_\_

2)

8,566



2. \_\_\_\_\_

3)

18,478



3. \_\_\_\_\_

4)

84,766



4. \_\_\_\_\_

5)

991



5. \_\_\_\_\_

6)

76,319



6. \_\_\_\_\_

7)

759



7. \_\_\_\_\_

8)

4,490



8. \_\_\_\_\_

9)

70,699



9. \_\_\_\_\_

10)

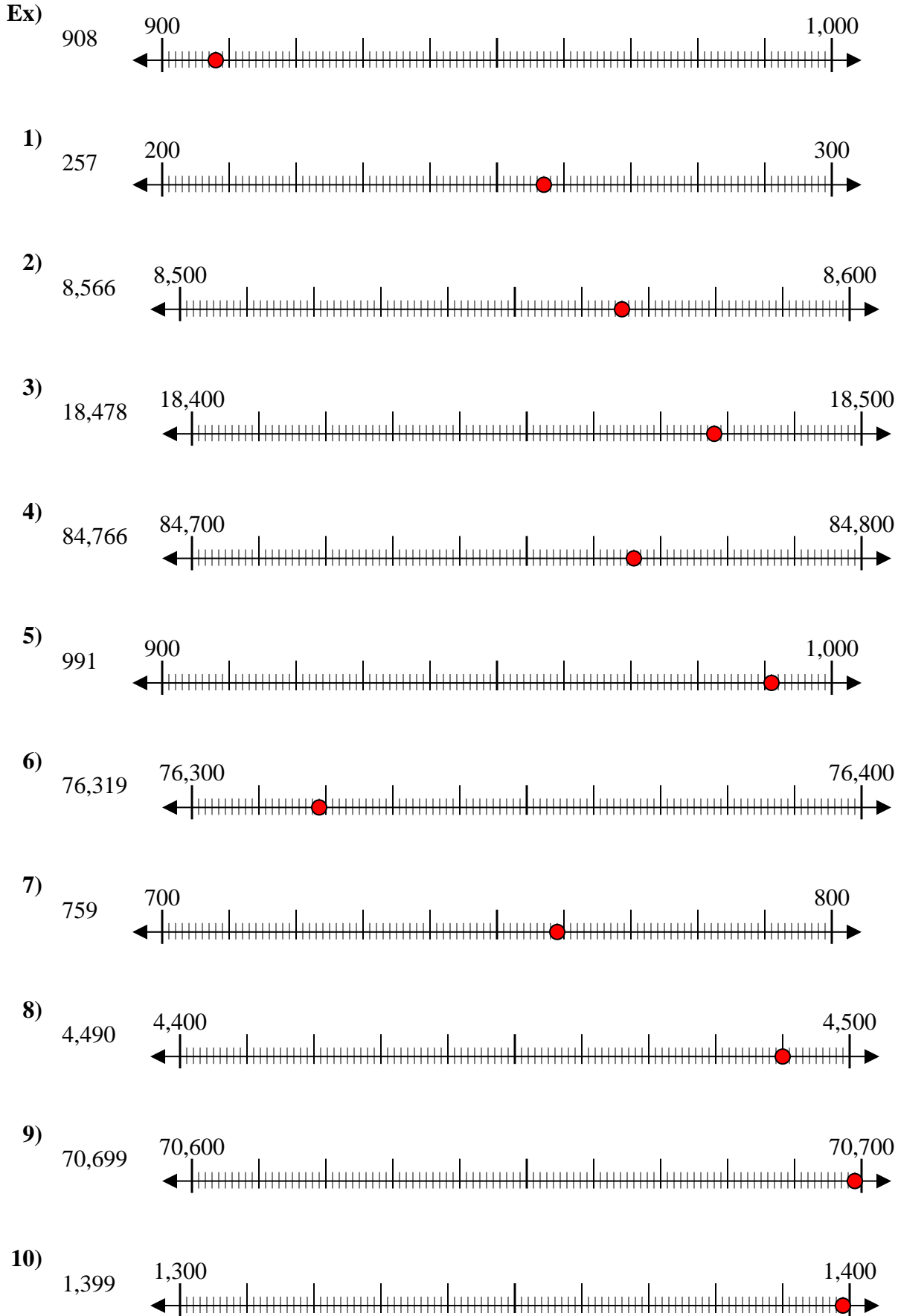
1,399



10. \_\_\_\_\_



Use the numberlines to round each number to the nearest 100.



Answers

- Ex. 900
1. 300
2. 8,600
3. 18,500
4. 84,800
5. 1,000
6. 76,300
7. 800
8. 4,500
9. 70,700
10. 1,400



Use the numberlines to round each number to the nearest 100.

Answers

Ex)

4,410



Ex. 4,400

1)

853



1. \_\_\_\_\_

2)

783



2. \_\_\_\_\_

3)

9,697



3. \_\_\_\_\_

4)

8,980



4. \_\_\_\_\_

5)

569



5. \_\_\_\_\_

6)

9,924



6. \_\_\_\_\_

7)

99,310



7. \_\_\_\_\_

8)

90,005



8. \_\_\_\_\_

9)

17,192



9. \_\_\_\_\_

10)

60,453



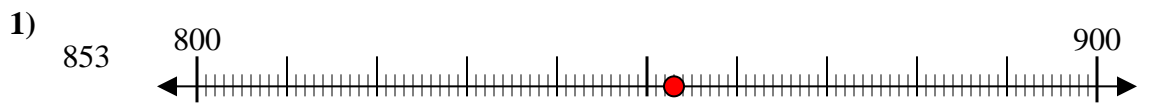
10. \_\_\_\_\_



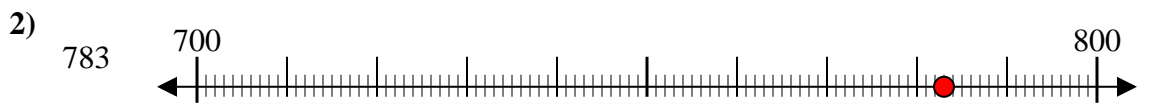
Use the numberlines to round each number to the nearest 100.



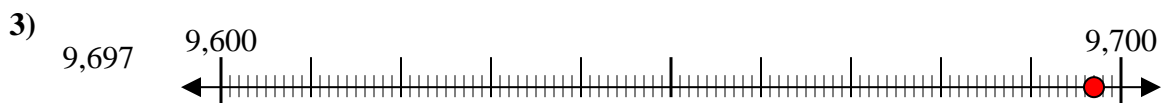
Answers  
Ex. **4,400**



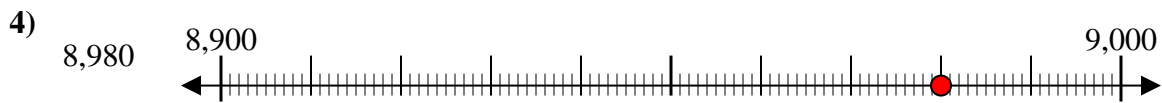
1. **900**



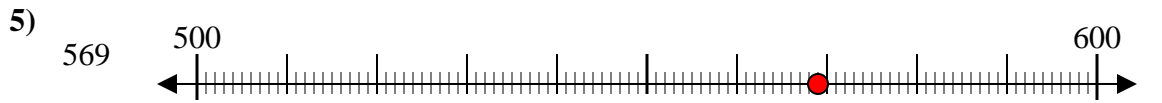
2. **800**



3. **9,700**



4. **9,000**



5. **600**



6. **9,900**



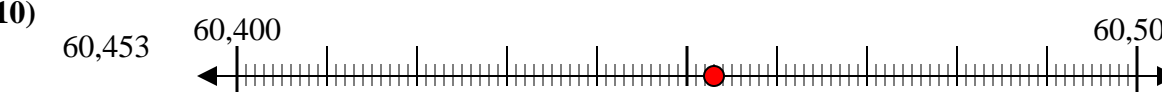
7. **99,300**



8. **90,000**



9. **17,200**



10. **60,500**





Use the numberlines to round each number to the nearest 100.

Ex)

1,224



Answers

Ex. 1,200

1)

9,937



1. \_\_\_\_\_

2)

81,895



2. \_\_\_\_\_

3)

791



3. \_\_\_\_\_

4)

3,821



4. \_\_\_\_\_

5)

216



5. \_\_\_\_\_

6)

45,078



6. \_\_\_\_\_

7)

21,436



7. \_\_\_\_\_

8)

85,063



8. \_\_\_\_\_

9)

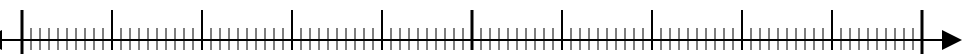
232



9. \_\_\_\_\_

10)

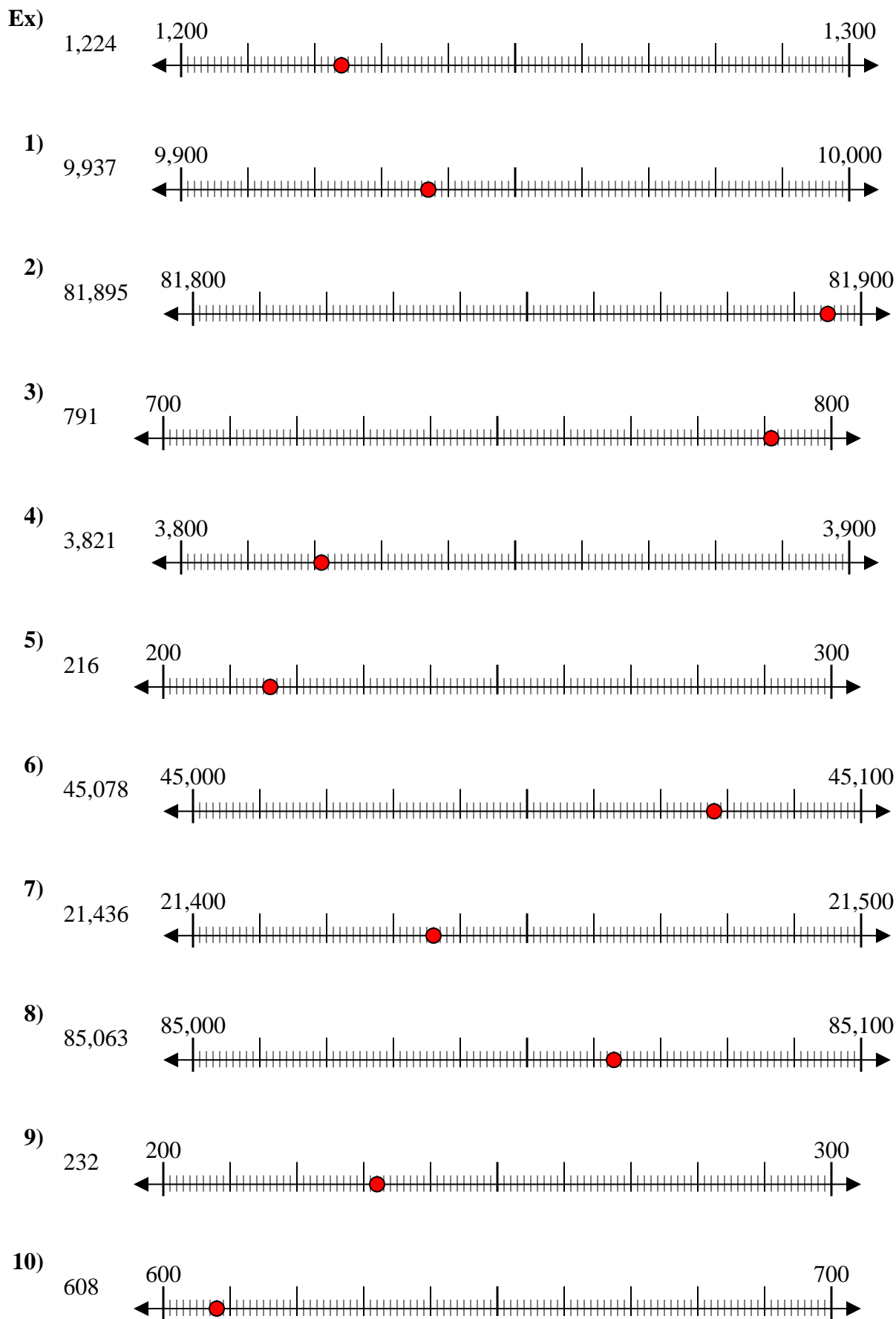
608



10. \_\_\_\_\_



Use the numberlines to round each number to the nearest 100.



Answers

- Ex. 1,200
1. 9,900
2. 81,900
3. 800
4. 3,800
5. 200
6. 45,100
7. 21,400
8. 85,100
9. 200
10. 600



Use the numberlines to round each number to the nearest 100.

Ex)

25,932



Answers

Ex. 25,900

1)

28,551



1. \_\_\_\_\_

2)

854



2. \_\_\_\_\_

3)

831



3. \_\_\_\_\_

4)

274



4. \_\_\_\_\_

5)

12,793



5. \_\_\_\_\_

6)

5,558



6. \_\_\_\_\_

7)

5,688



7. \_\_\_\_\_

8)

134



8. \_\_\_\_\_

9)

9,335



9. \_\_\_\_\_

10)

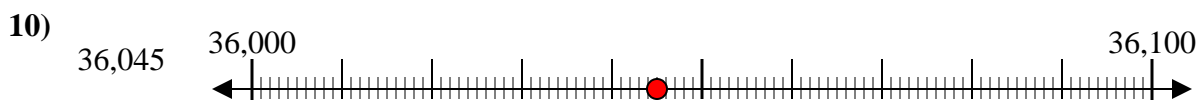
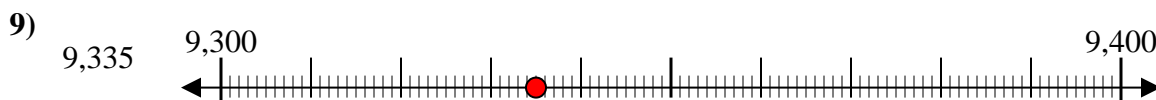
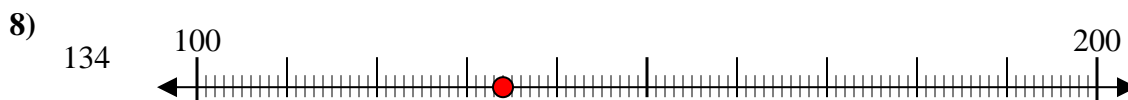
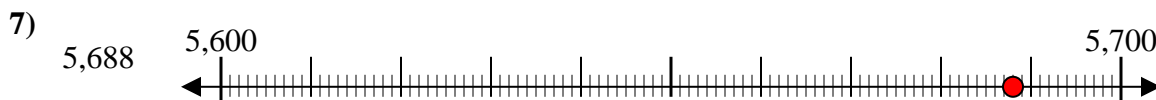
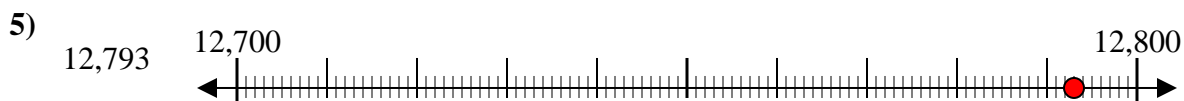
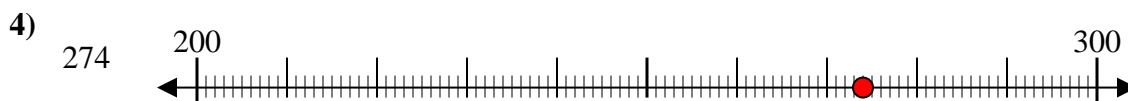
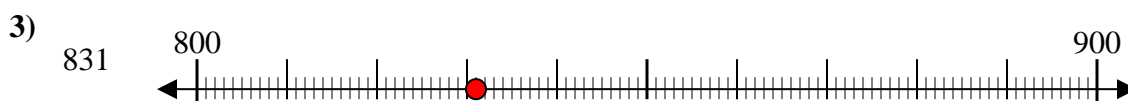
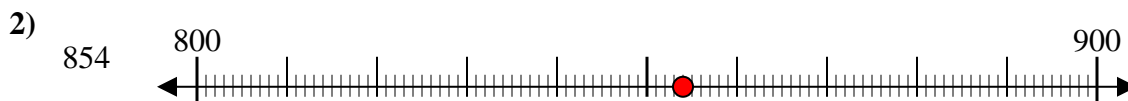
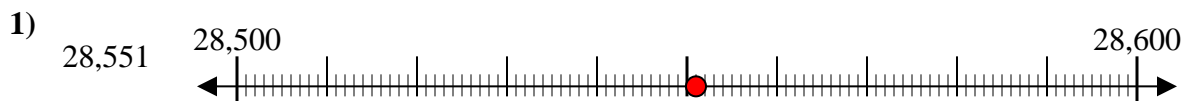
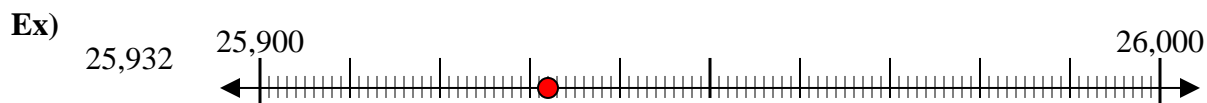
36,045



10. \_\_\_\_\_



Use the numberlines to round each number to the nearest 100.



Answers

Ex. 25,900

1. 28,600

2. 900

3. 800

4. 300

5. 12,800

6. 5,600

7. 5,700

8. 100

9. 9,300

10. 36,000



Use the numberlines to round each number to the nearest 100.

Ex)

803



Ex. 800

1)

589



1. \_\_\_\_\_

2)

35,102



2. \_\_\_\_\_

3)

6,126



3. \_\_\_\_\_

4)

5,531



4. \_\_\_\_\_

5)

5,313



5. \_\_\_\_\_

6)

951



6. \_\_\_\_\_

7)

8,816



7. \_\_\_\_\_

8)

152



8. \_\_\_\_\_

9)

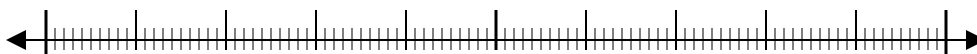
62,481



9. \_\_\_\_\_

10)

59,409



10. \_\_\_\_\_

Answers

Ex. 800

1. \_\_\_\_\_

2. \_\_\_\_\_

3. \_\_\_\_\_

4. \_\_\_\_\_

5. \_\_\_\_\_

6. \_\_\_\_\_

7. \_\_\_\_\_

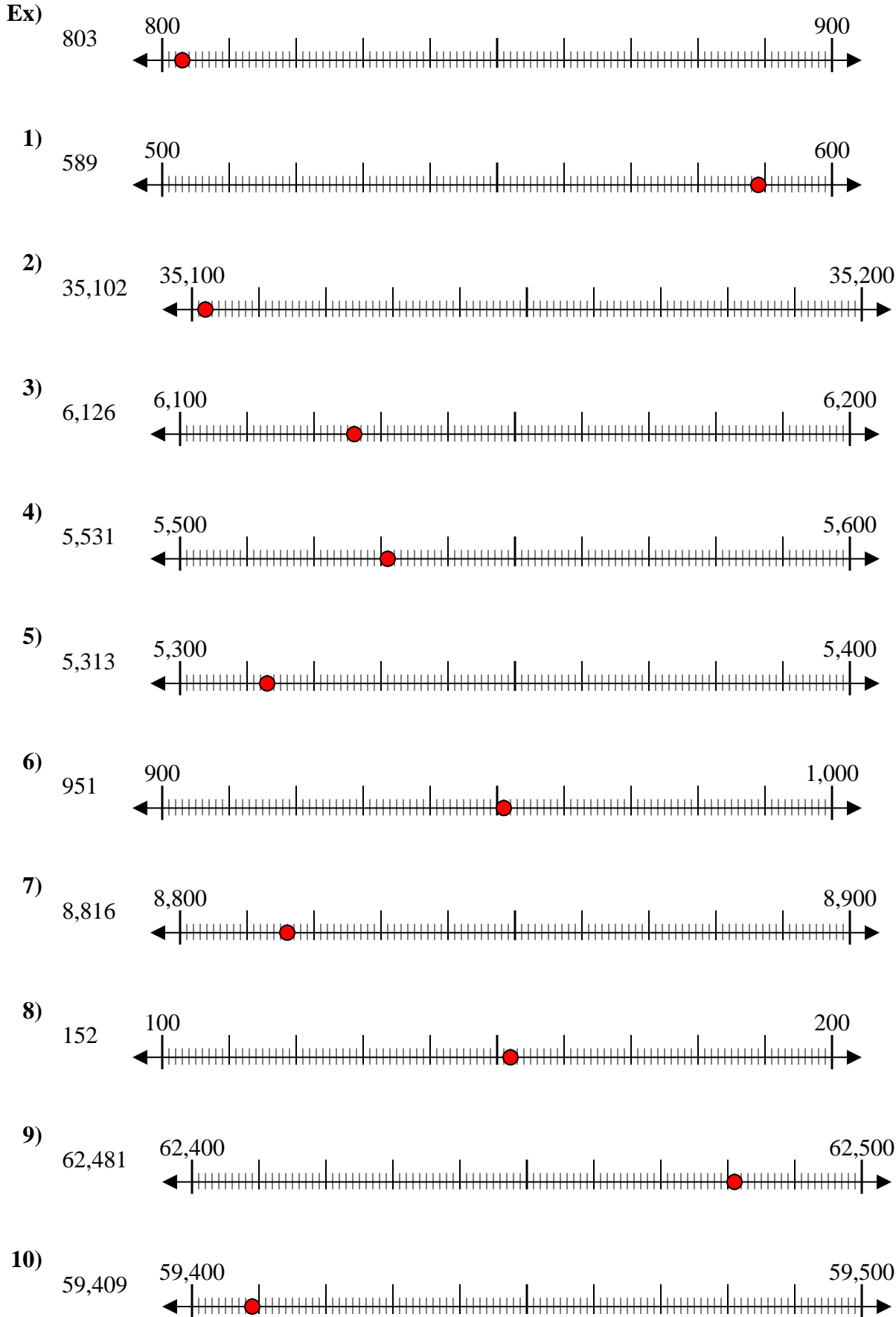
8. \_\_\_\_\_

9. \_\_\_\_\_

10. \_\_\_\_\_



Use the numberlines to round each number to the nearest 100.



Answers

- Ex. 800
1. 600
2. 35,100
3. 6,100
4. 5,500
5. 5,300
6. 1,000
7. 8,800
8. 200
9. 62,500
10. 59,400



Use the numberlines to round each number to the nearest 100.

Ex)

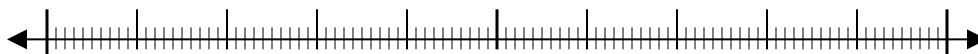
842



Ex. 800

1)

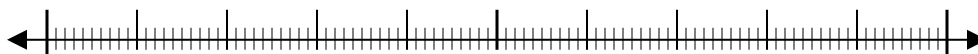
777



1. \_\_\_\_\_

2)

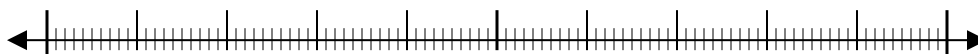
395



2. \_\_\_\_\_

3)

856



3. \_\_\_\_\_

4)

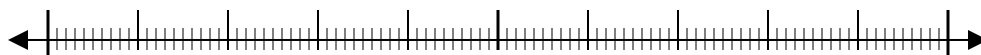
7,693



4. \_\_\_\_\_

5)

22,440



5. \_\_\_\_\_

6)

52,709



6. \_\_\_\_\_

7)

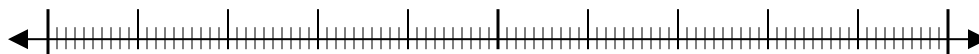
5,550



7. \_\_\_\_\_

8)

6,348



8. \_\_\_\_\_

9)

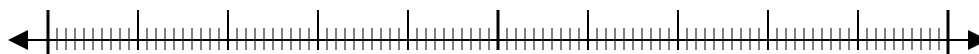
76,807



9. \_\_\_\_\_

10)

1,323

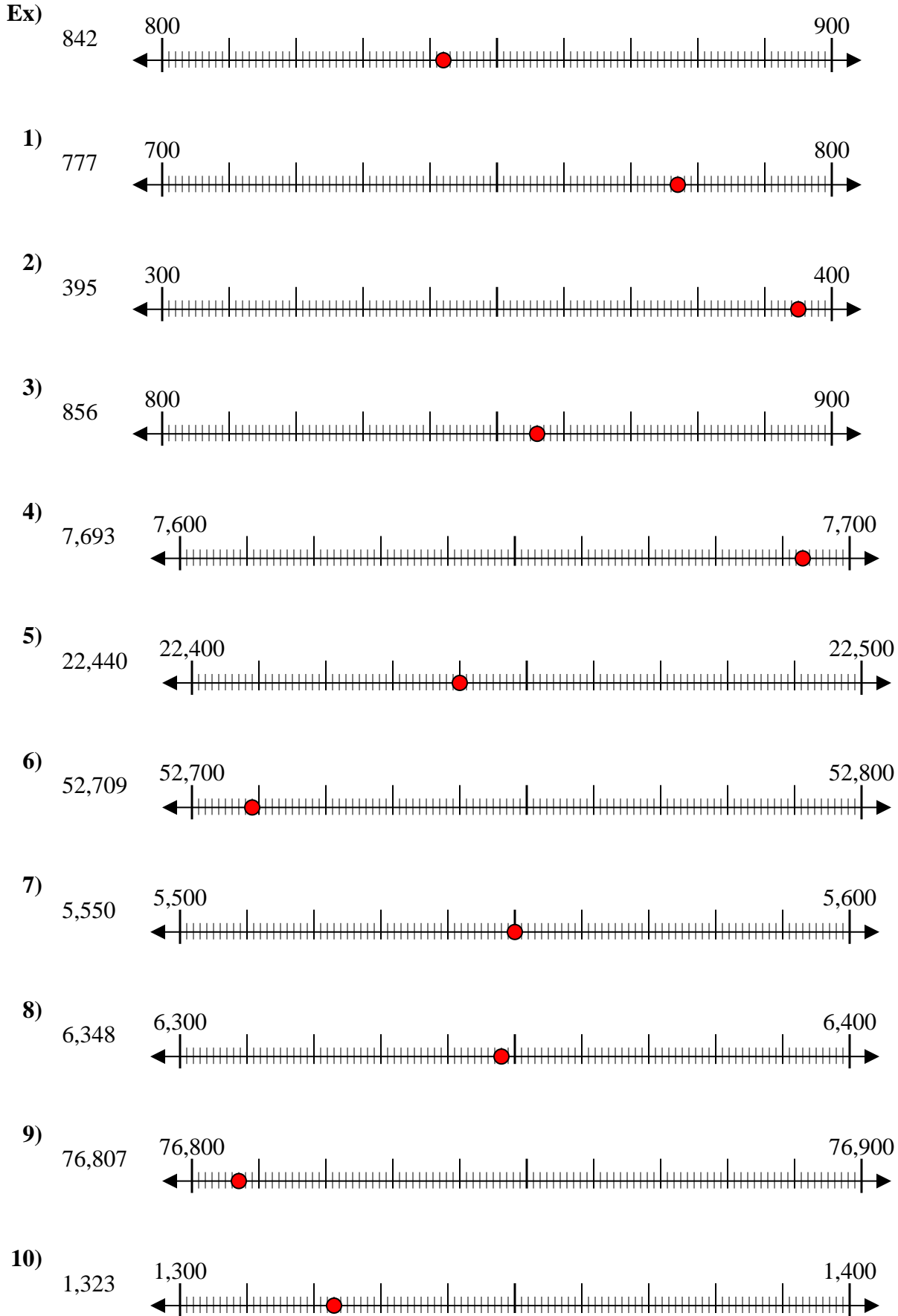


10. \_\_\_\_\_

Answers



Use the numberlines to round each number to the nearest 100.



Answers

- Ex. 800
1. 800
2. 400
3. 900
4. 7,700
5. 22,400
6. 52,700
7. 5,600
8. 6,300
9. 76,800
10. 1,300





Use the numberlines to round each number to the nearest 100.

Ex)

22,128



Answers

Ex. 22,100

1)

7,798



1. \_\_\_\_\_

2)

73,791



2. \_\_\_\_\_

3)

48,807



3. \_\_\_\_\_

4)

1,381



4. \_\_\_\_\_

5)

746



5. \_\_\_\_\_

6)

140



6. \_\_\_\_\_

7)

904



7. \_\_\_\_\_

8)

93,445



8. \_\_\_\_\_

9)

4,176



9. \_\_\_\_\_

10)

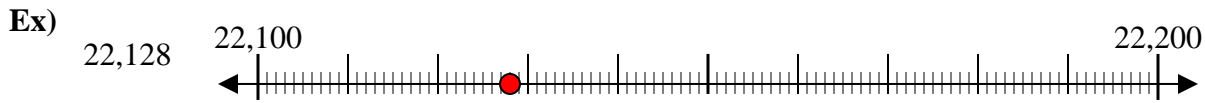
369



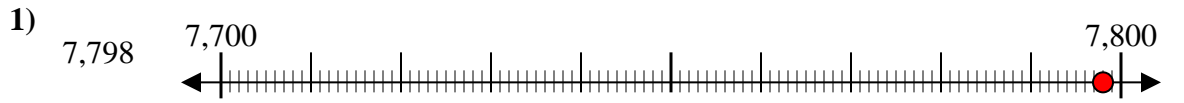
10. \_\_\_\_\_



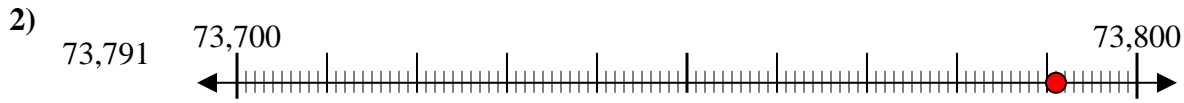
Use the numberlines to round each number to the nearest 100.



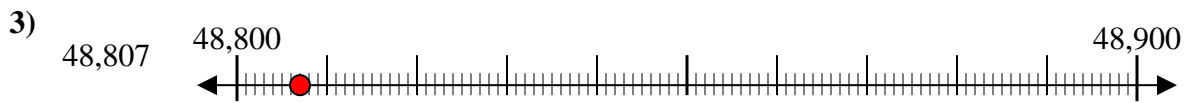
Answers  
Ex. 22,100



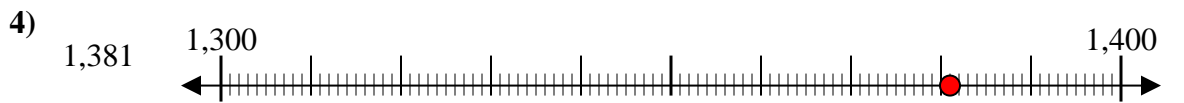
1. 7,800



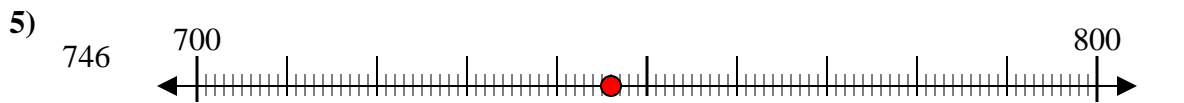
2. 73,800



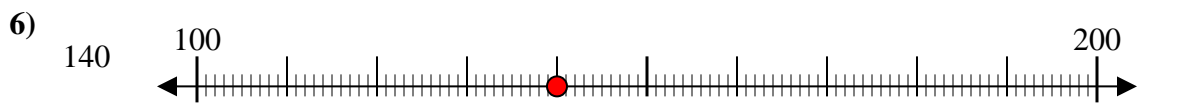
3. 48,800



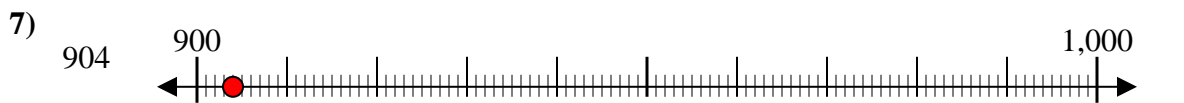
4. 1,400



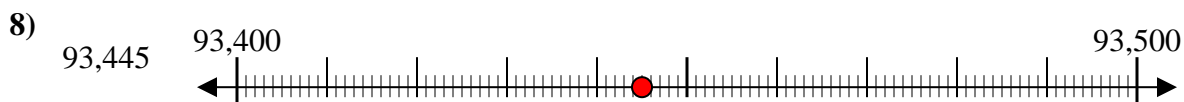
5. 700



6. 100



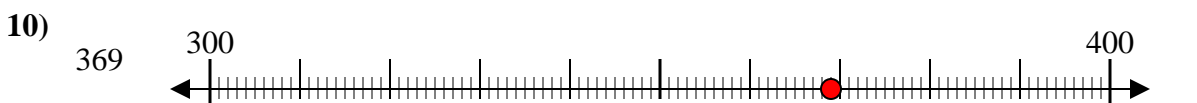
7. 900



8. 93,400



9. 4,200



10. 400



Use the numberlines to round each number to the nearest 100.

Answers

Ex)

4,028



Ex. 4,000

1)

905



1. \_\_\_\_\_

2)

4,915



2. \_\_\_\_\_

3)

984



3. \_\_\_\_\_

4)

6,410



4. \_\_\_\_\_

5)

43,902



5. \_\_\_\_\_

6)

20,088



6. \_\_\_\_\_

7)

59,370



7. \_\_\_\_\_

8)

815



8. \_\_\_\_\_

9)

38,901



9. \_\_\_\_\_

10)

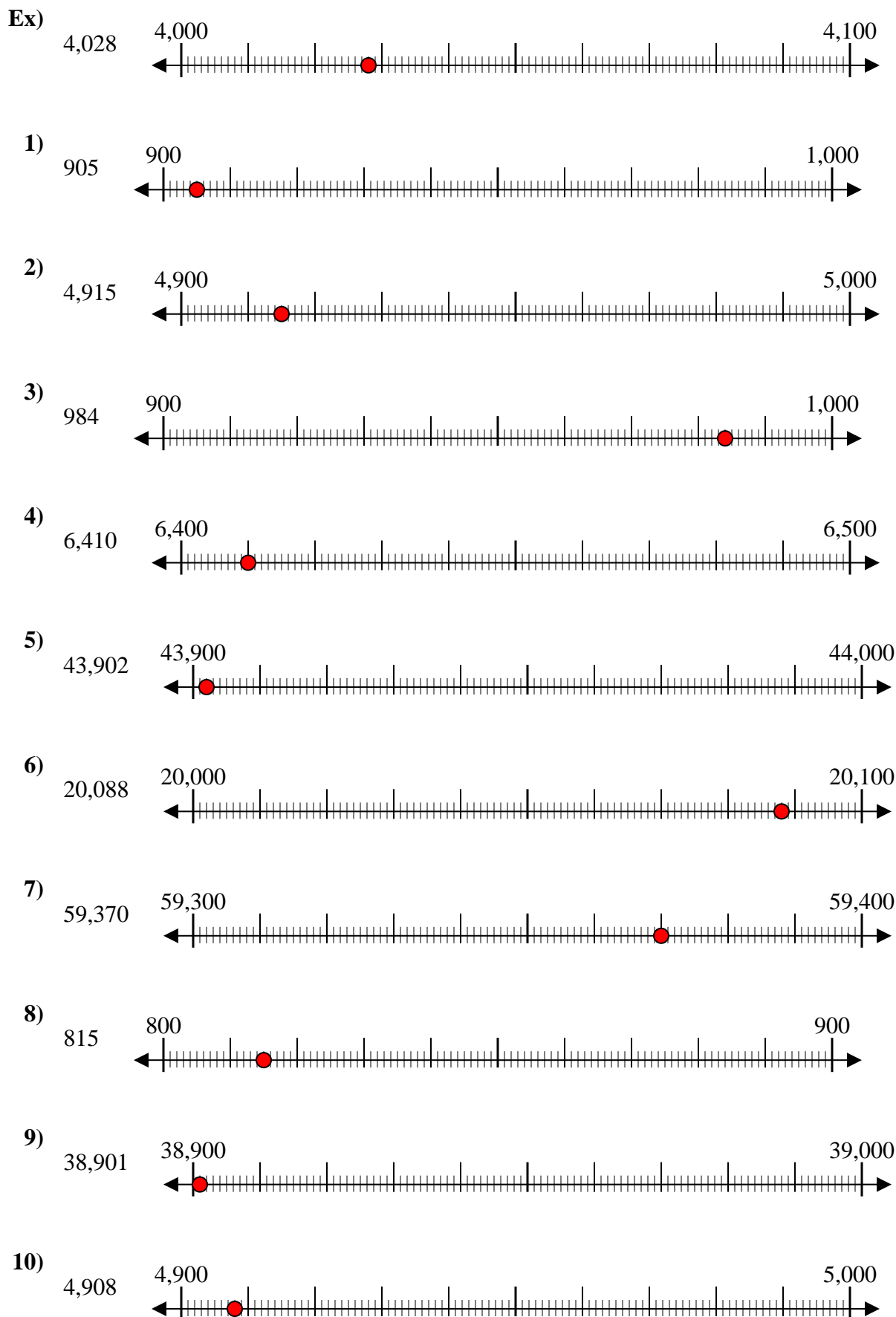
4,908



10. \_\_\_\_\_



Use the numberlines to round each number to the nearest 100.



Answers

- Ex. 4,000
1. 900
2. 4,900
3. 1,000
4. 6,400
5. 43,900
6. 20,100
7. 59,400
8. 800
9. 38,900
10. 4,900