



Use the numberlines to round each number to the nearest 100.

Ex)

842



Ex. 800

1)

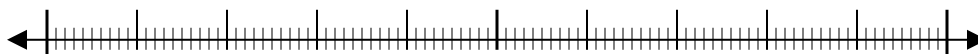
777



1. \_\_\_\_\_

2)

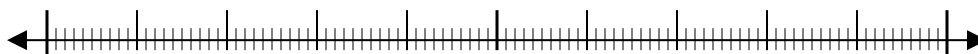
395



2. \_\_\_\_\_

3)

856



3. \_\_\_\_\_

4)

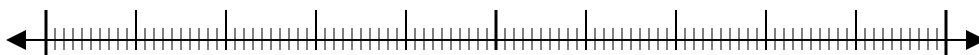
7,693



4. \_\_\_\_\_

5)

22,440



5. \_\_\_\_\_

6)

52,709



6. \_\_\_\_\_

7)

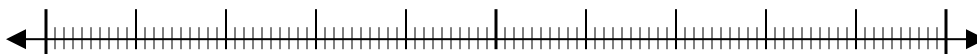
5,550



7. \_\_\_\_\_

8)

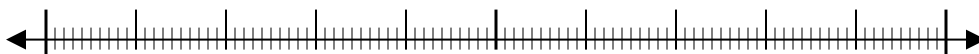
6,348



8. \_\_\_\_\_

9)

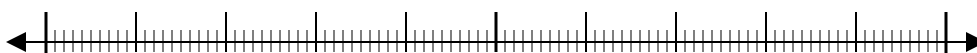
76,807



9. \_\_\_\_\_

10)

1,323

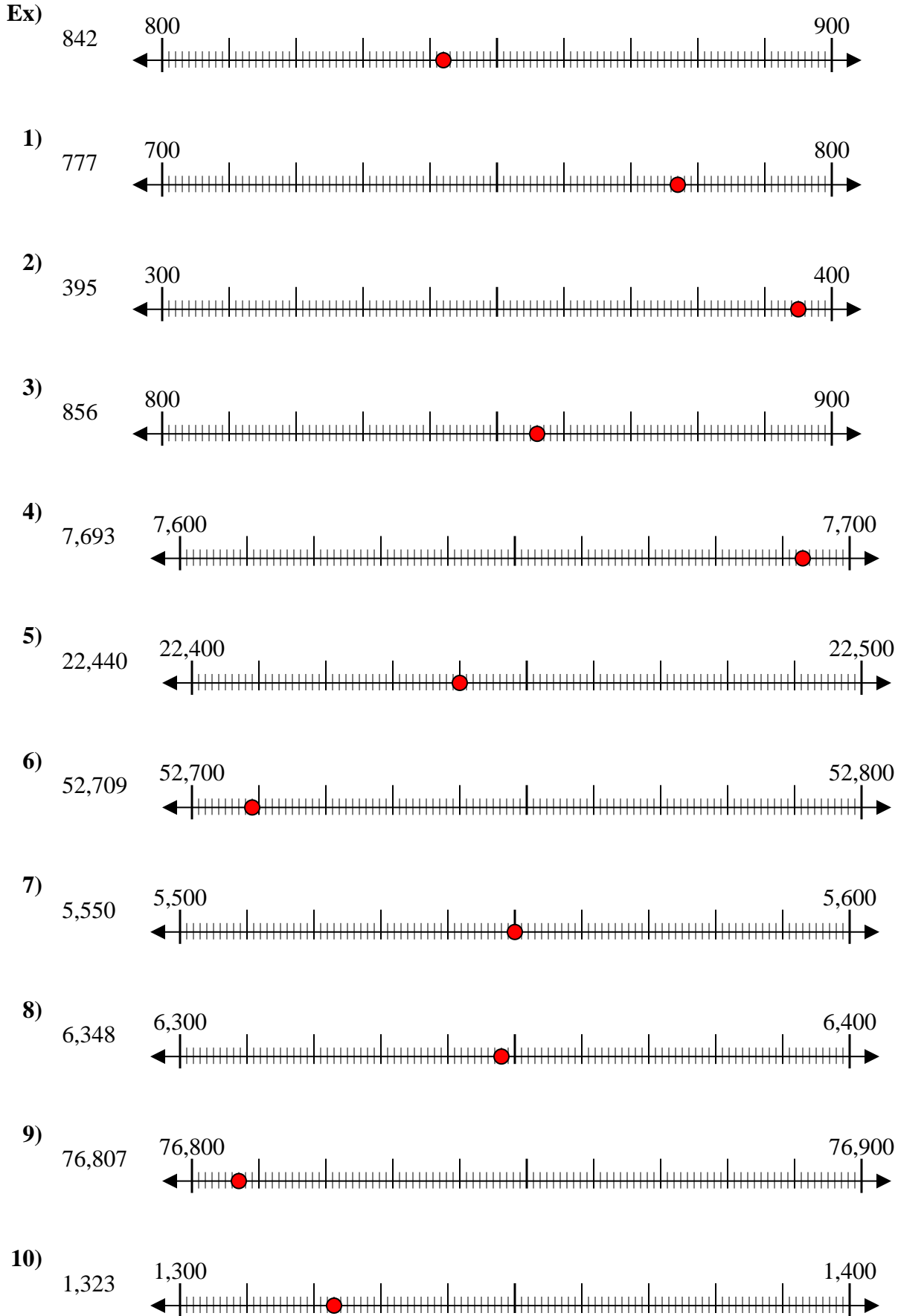


10. \_\_\_\_\_

Answers



Use the numberlines to round each number to the nearest 100.



Answers

- Ex. 800
1. 800
2. 400
3. 900
4. 7,700
5. 22,400
6. 52,700
7. 5,600
8. 6,300
9. 76,800
10. 1,300