


Solve each problem.

Answers

Ex) What is the ratio of hearts to pentagons? **1)** What is the ratio of pentagons to triangles?



Ex. 14:13

1. _____

2.

3.

4.

5.

6.

7.



8.

9.

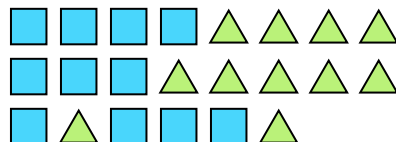
10.

11.


2) What is the ratio of pentagons to hearts? 3) What is the ratio of circles to stars?





4) What is the ratio of squares to triangles? **5)** What is the ratio of triangles to squares?





6) What is the ratio of circles to pentagons? **7)** What is the ratio of moons to triangles?



8) What is the ratio of moons to hearts? 9) What is the ratio of hearts to circles?



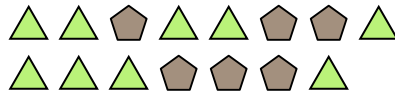

10) What is the ratio of pentagons to circles? **11)** What is the ratio of squares to stars?







Solve each problem.

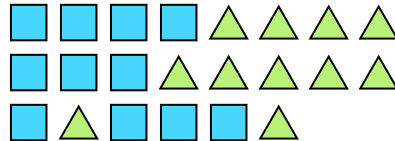

Ex) What is the ratio of hearts to pentagons? 1) What is the ratio of pentagons to triangles?

Ex. **14:13**1. **6:9**2. **11:14**3. **6:13**4. **2:2**5. **11:11**6. **3:7**7. **13:4**8. **5:15**9. **13:5**10. **4:9**11. **14:5**


2) What is the ratio of pentagons to hearts? 3) What is the ratio of circles to stars?





4) What is the ratio of squares to triangles? 5) What is the ratio of triangles to squares?



6) What is the ratio of circles to pentagons? 7) What is the ratio of moons to triangles?



8) What is the ratio of moons to hearts? 9) What is the ratio of hearts to circles?



10) What is the ratio of pentagons to circles? 11) What is the ratio of squares to stars?

