

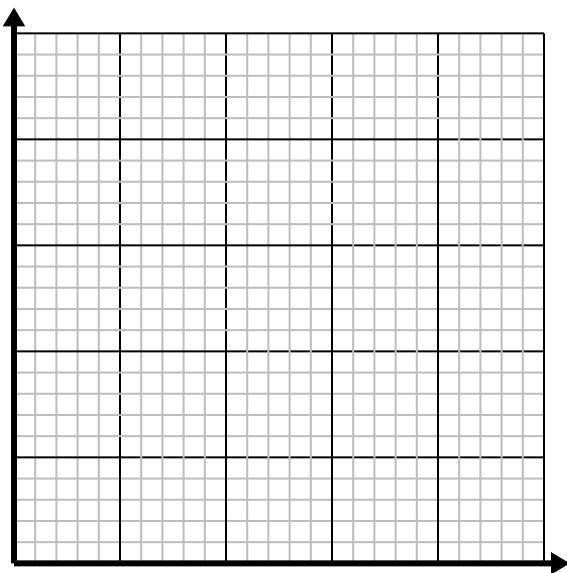


Solve each problem.

- 1) For every enemy defeated 5 points are earned.

Create a table showing the points earned for destroying up to 5 enemies, then plot the values on the coordinate plane.

| | | | | | |
|--|--|--|--|--|--|
| | | | | | |
| | | | | | |



- 2) For every shirts made 4 buttons are used.

Create a table showing the buttons needed for making up to 5 shirts, then plot the values on the coordinate plane.

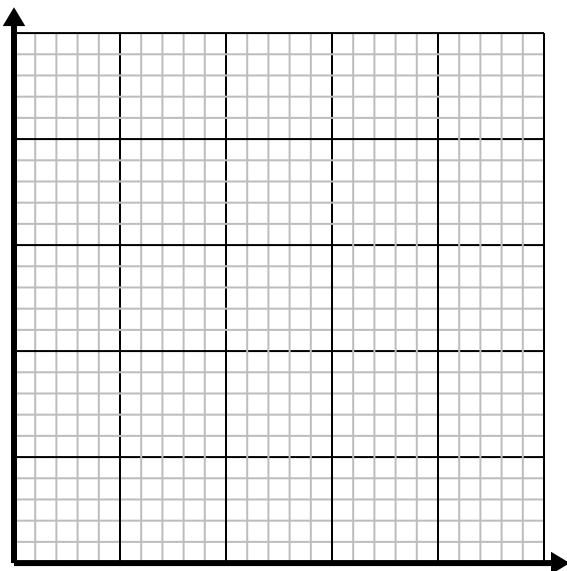
| | | | | | |
|--|--|--|--|--|--|
| | | | | | |
| | | | | | |



- 3) Every piece of chicken costs \$2.

Create a table showing the price for up to 5 pieces of chicken, then plot the values on the coordinate plane.

| | | | | | |
|--|--|--|--|--|--|
| | | | | | |
| | | | | | |



- 4) Every hour Dave walks 4 miles.

Create a table showing the miles travelled over the course of 5 hours, then plot the values on the coordinate plane.

| | | | | | |
|--|--|--|--|--|--|
| | | | | | |
| | | | | | |



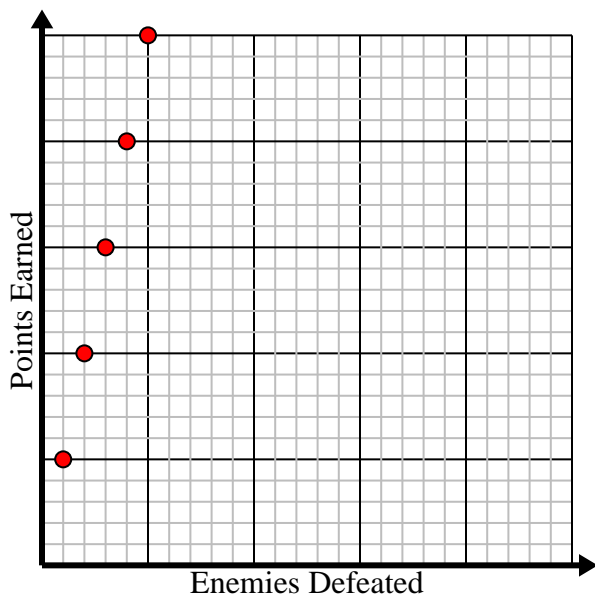


Solve each problem.

- 1) For every enemy defeated 5 points are earned.

Create a table showing the points earned for destroying up to 5 enemies, then plot the values on the coordinate plane.

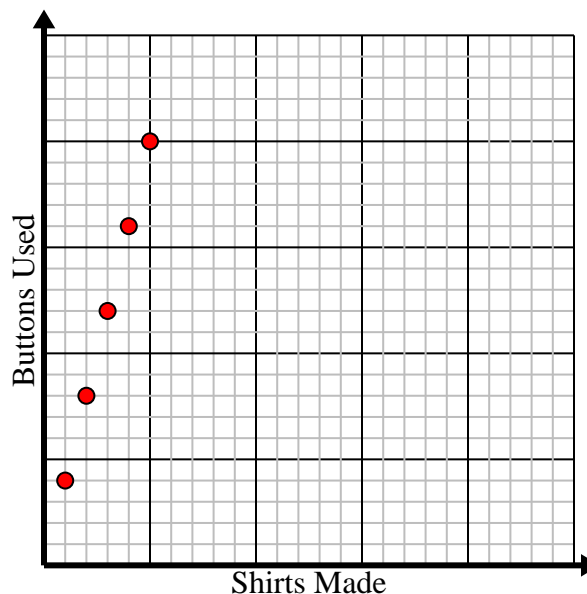
| | | | | | |
|------------------|---|----|----|----|----|
| Enemies Defeated | 1 | 2 | 3 | 4 | 5 |
| Points Earned | 5 | 10 | 15 | 20 | 25 |



- 2) For every shirts made 4 buttons are used.

Create a table showing the buttons needed for making up to 5 shirts, then plot the values on the coordinate plane.

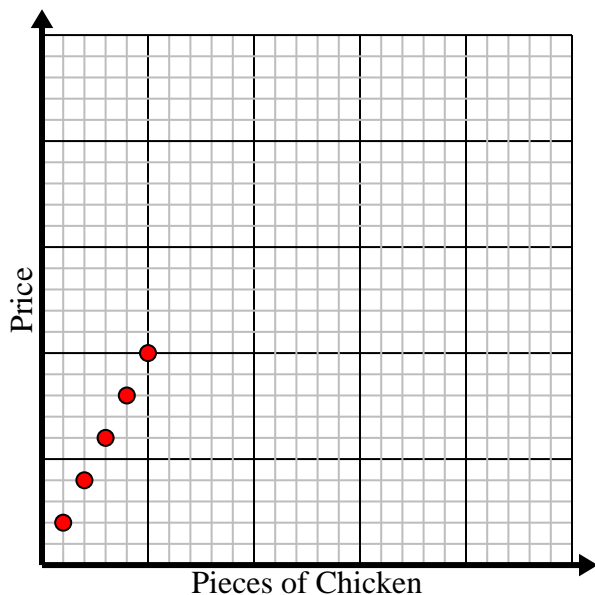
| | | | | | |
|--------------|---|---|----|----|----|
| Shirts Made | 1 | 2 | 3 | 4 | 5 |
| Buttons Used | 4 | 8 | 12 | 16 | 20 |



- 3) Every piece of chicken costs \$2.

Create a table showing the price for up to 5 pieces of chicken, then plot the values on the coordinate plane.

| | | | | | |
|-------------------|---|---|---|---|----|
| Pieces of Chicken | 1 | 2 | 3 | 4 | 5 |
| Price | 2 | 4 | 6 | 8 | 10 |



- 4) Every hour Dave walks 4 miles.

Create a table showing the miles travelled over the course of 5 hours, then plot the values on the coordinate plane.

| | | | | | |
|------------------|---|---|----|----|----|
| Hours | 1 | 2 | 3 | 4 | 5 |
| Distance (miles) | 4 | 8 | 12 | 16 | 20 |

