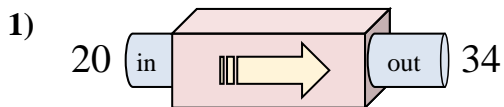


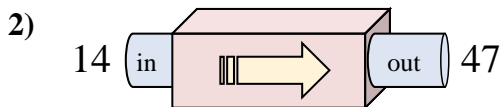


Determine which rule the function machine is using.

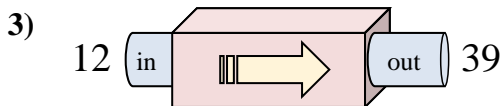
**Answers**



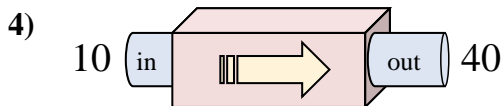
- A. Subtract 13
- B. Add 14
- C. Add 12
- D. Add 9



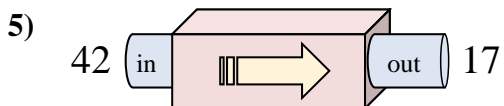
- A. Add 32
- B. Add 33
- C. Subtract 35
- D. Add 37



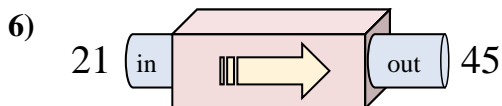
- A. Add 31
- B. Add 27
- C. Add 26
- D. Subtract 24



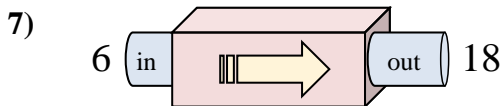
- A. Subtract 28
- B. Subtract 31
- C. Add 26
- D. Add 30



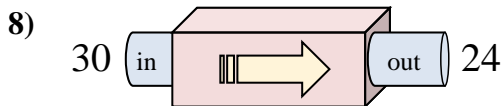
- A. Subtract 29
- B. Add 24
- C. Subtract 25
- D. Add 22



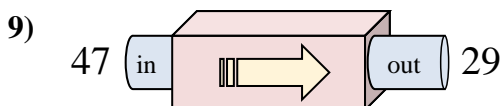
- A. Add 24
- B. Add 27
- C. Subtract 29
- D. Add 25



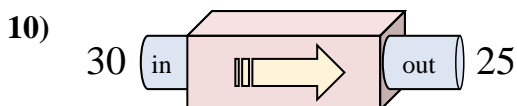
- A. Add 9
- B. Add 12
- C. Subtract 9
- D. Add 14



- A. Subtract 6
- B. Add 5
- C. Subtract 11
- D. Subtract 10



- A. Add 22
- B. Subtract 18
- C. Subtract 21
- D. Subtract 19

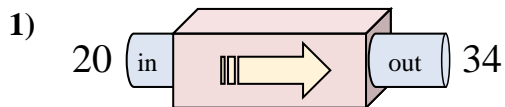


- A. Add 8
- B. Add 10
- C. Subtract 7
- D. Subtract 5

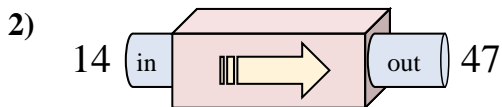
1. \_\_\_\_\_
2. \_\_\_\_\_
3. \_\_\_\_\_
4. \_\_\_\_\_
5. \_\_\_\_\_
6. \_\_\_\_\_
7. \_\_\_\_\_
8. \_\_\_\_\_
9. \_\_\_\_\_
10. \_\_\_\_\_



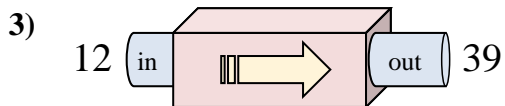
Determine which rule the function machine is using.



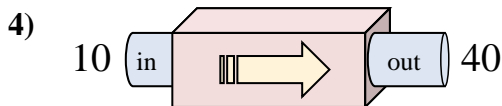
- A. Subtract 13
- B. Add 14
- C. Add 12
- D. Add 9



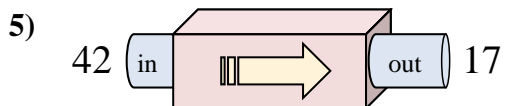
- A. Add 32
- B. Add 33
- C. Subtract 35
- D. Add 37



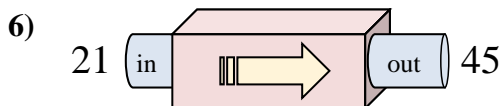
- A. Add 31
- B. Add 27
- C. Add 26
- D. Subtract 24



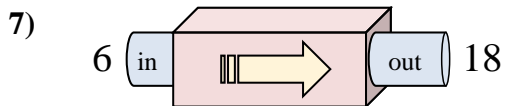
- A. Subtract 28
- B. Subtract 31
- C. Add 26
- D. Add 30



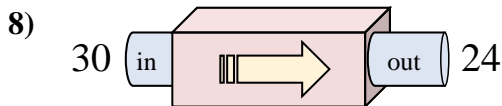
- A. Subtract 29
- B. Add 24
- C. Subtract 25
- D. Add 22



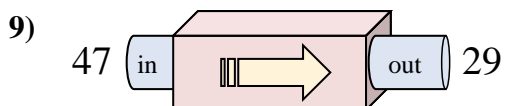
- A. Add 24
- B. Add 27
- C. Subtract 29
- D. Add 25



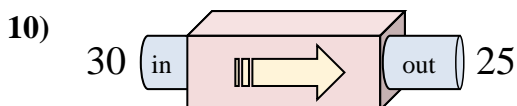
- A. Add 9
- B. Add 12
- C. Subtract 9
- D. Add 14



- A. Subtract 6
- B. Add 5
- C. Subtract 11
- D. Subtract 10



- A. Add 22
- B. Subtract 18
- C. Subtract 21
- D. Subtract 19



- A. Add 8
- B. Add 10
- C. Subtract 7
- D. Subtract 5

**Answers**

1. **B**

2. **B**

3. **B**

4. **D**

5. **C**

6. **A**

7. **B**

8. **A**

9. **B**

10. **D**