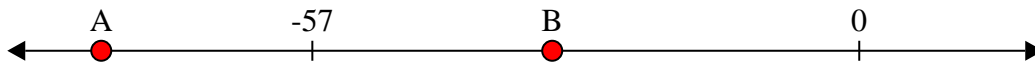




Solve each problem.


**Answers**

1) Which letter best shows -32?




1. \_\_\_\_\_

2) Which letter best shows -114?




2. \_\_\_\_\_

3) Which letter best shows -117?



3. \_\_\_\_\_

4) Which letter best shows -111?



4. \_\_\_\_\_

5) Which letter best shows -33?



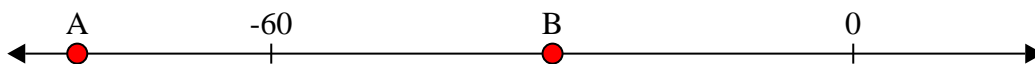
5. \_\_\_\_\_

6) Which letter best shows -29?




6. \_\_\_\_\_

7) Which letter best shows -80?



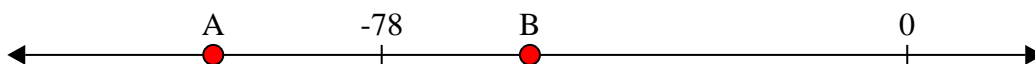
7. \_\_\_\_\_

8) Which letter best shows -86?




8. \_\_\_\_\_

9) Which letter best shows -56?



9. \_\_\_\_\_

10) Which letter best shows -24?



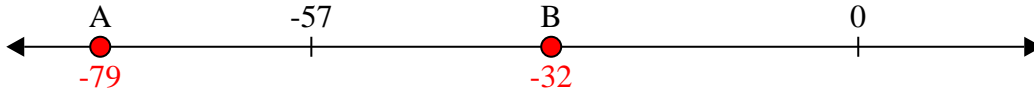
10. \_\_\_\_\_



Solve each problem.

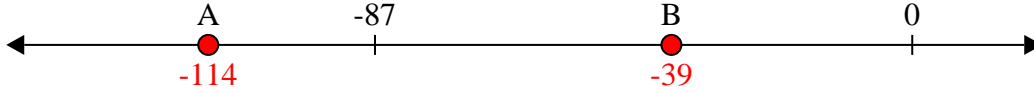
**Answers**

1) Which letter best shows -32?



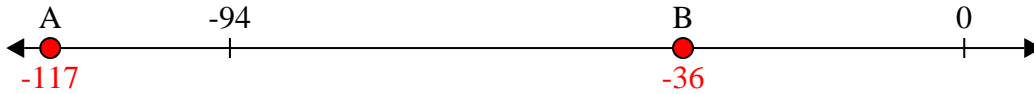
1.     **B**    

2) Which letter best shows -114?



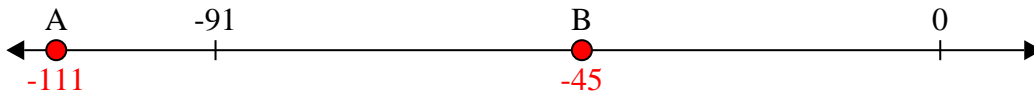
2.     **A**    

3) Which letter best shows -117?



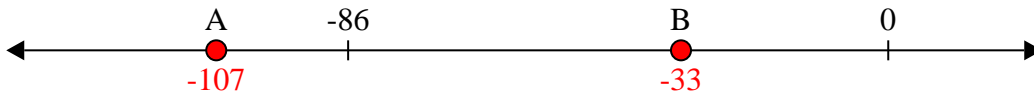
3.     **A**    

4) Which letter best shows -111?




4.     **A**    

5) Which letter best shows -33?



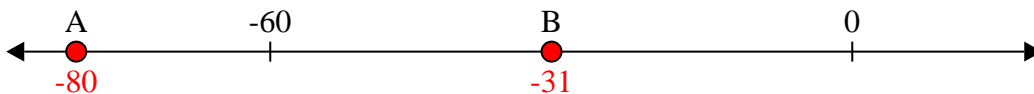
5.     **B**    

6) Which letter best shows -29?




6.     **B**    

7) Which letter best shows -80?



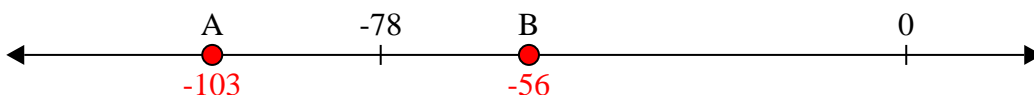
7.     **A**    

8) Which letter best shows -86?




8.     **A**    

9) Which letter best shows -56?



9.     **B**    

10) Which letter best shows -24?



10.     **B**