




Solve each problem.


**Answers**

1) Which letter best shows -128?




1. \_\_\_\_\_

2) Which letter best shows -114?



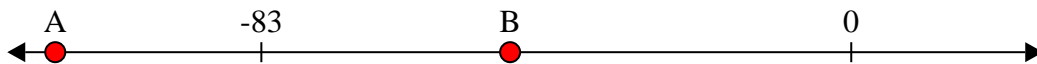
2. \_\_\_\_\_

3) Which letter best shows -76?



3. \_\_\_\_\_

4) Which letter best shows -48?



4. \_\_\_\_\_

5) Which letter best shows -47?



5. \_\_\_\_\_

6) Which letter best shows -115?



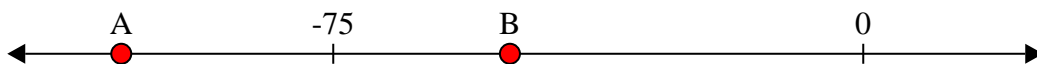
6. \_\_\_\_\_

7) Which letter best shows -115?




7. \_\_\_\_\_

8) Which letter best shows -105?




8. \_\_\_\_\_

9) Which letter best shows -10?



9. \_\_\_\_\_

10) Which letter best shows -82?




10. \_\_\_\_\_

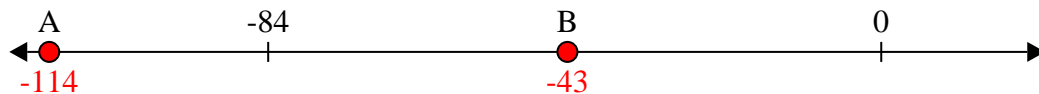


Solve each problem.

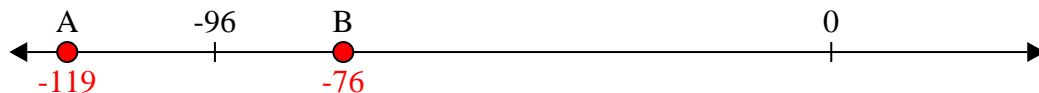
1) Which letter best shows -128?



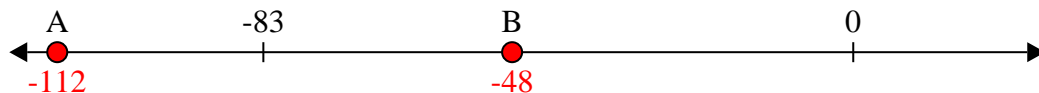
2) Which letter best shows -114?




3) Which letter best shows -76?




4) Which letter best shows -48?




5) Which letter best shows -47?



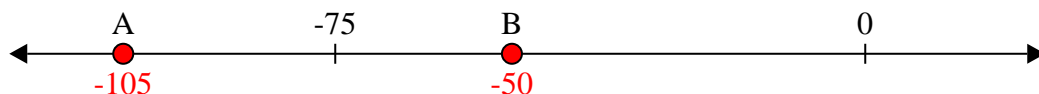
6) Which letter best shows -115?




7) Which letter best shows -115?




8) Which letter best shows -105?



9) Which letter best shows -10?



10) Which letter best shows -82?



**Answers**

1.   **A**  

2.   **A**  

3.   **B**  

4.   **B**  

5.   **B**  

6.   **A**  

7.   **A**  

8.   **A**  

9.   **B**  

10.   **A**