



Express each set as a multiplication problem.

Ex)

Answers

Ex. $5 \times 8 = 40$

1)

1. _____

2. _____

3. _____

2)

4. _____

5. _____

6. _____

3)

7. _____

8. _____

4)

5)


6)

7)

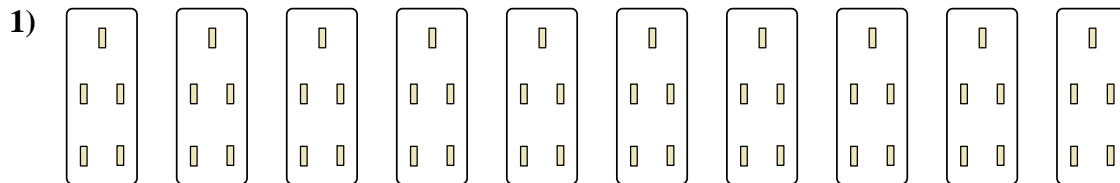
8)



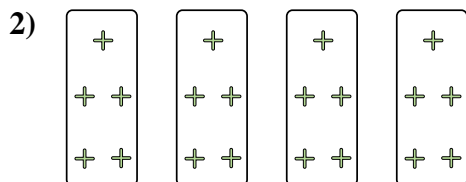
Express each set as a multiplication problem.



Ex. $5 \times 8 = 40$




1. $10 \times 5 = 50$



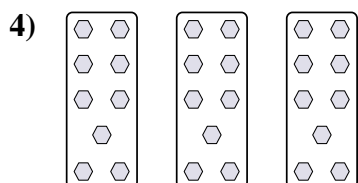
2. $4 \times 5 = 20$

3. $2 \times 8 = 16$



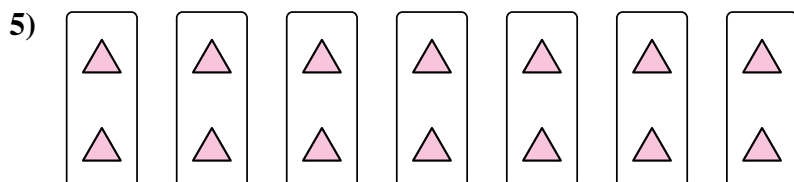
4. $3 \times 9 = 27$

5. $7 \times 2 = 14$



6. $4 \times 4 = 16$

7. $2 \times 2 = 4$



8. $8 \times 2 = 16$

