



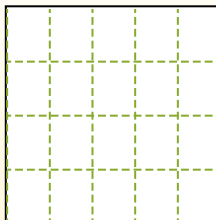
Partition the shape as described and then count to find the number of boxes.

Answers

Rows go left to right.

Columns go up and down.

This has 4 rows and 5 columns.
There are 20 boxes total.



1. _____
2. _____
3. _____
4. _____
5. _____
6. _____
7. _____
8. _____
9. _____


1) 3 rows
5 columns



2) 3 rows
3 columns



3) 2 rows
5 columns




4) 3 rows
2 columns



5) 4 rows
3 columns



6) 4 rows
4 columns




7) 4 rows
2 columns



8) 3 rows
4 columns



9) 5 rows
5 columns



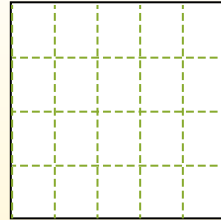
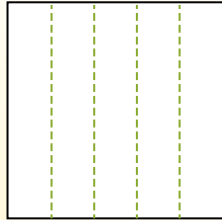
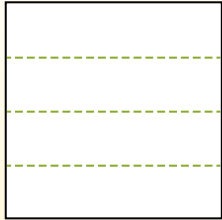


Partition the shape as described and then count to find the number of boxes.

Rows go left to right.

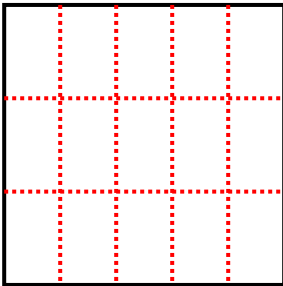
Columns go up and down.

This has 4 rows and 5 columns.
There are 20 boxes total.

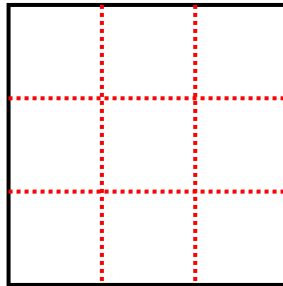


Answers

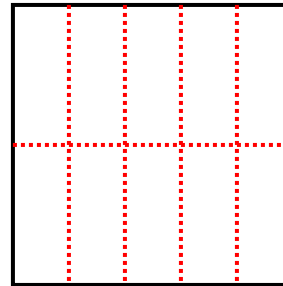
1) 3 rows
5 columns



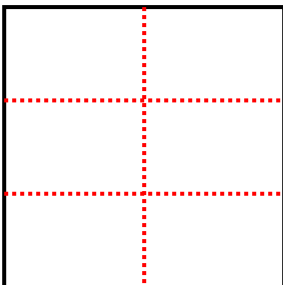
2) 3 rows
3 columns



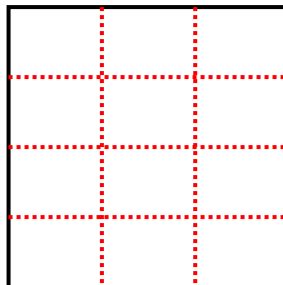
3) 2 rows
5 columns



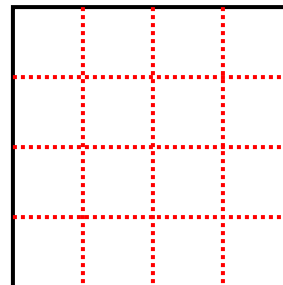
4) 3 rows
2 columns



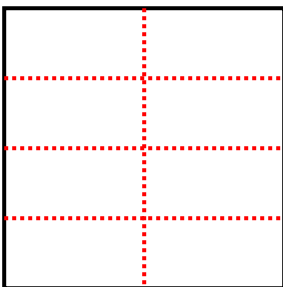
5) 4 rows
3 columns



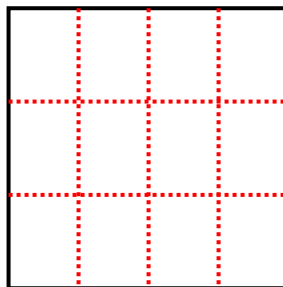
6) 4 rows
4 columns



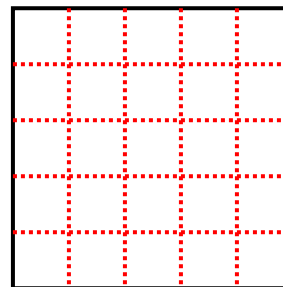
7) 4 rows
2 columns



8) 3 rows
4 columns



9) 5 rows
5 columns



- 1. 15
- 2. 9
- 3. 10
- 4. 6
- 5. 12
- 6. 16
- 7. 8
- 8. 12
- 9. 25