





Use the array provided to solve each problem.


1)  $17 \times 20 =$




2)  $10 \times 17 =$




3)  $11 \times 10 =$




4)  $10 \times 12 =$



5)  $10 \times 18 =$



6)  $10 \times 15 =$



Answers

1. \_\_\_\_\_

2. \_\_\_\_\_

3. \_\_\_\_\_

4. \_\_\_\_\_

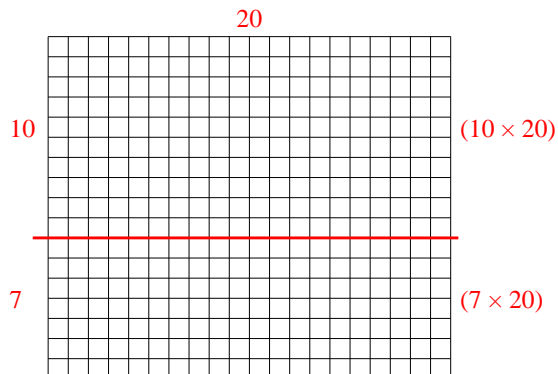
5. \_\_\_\_\_

6. \_\_\_\_\_

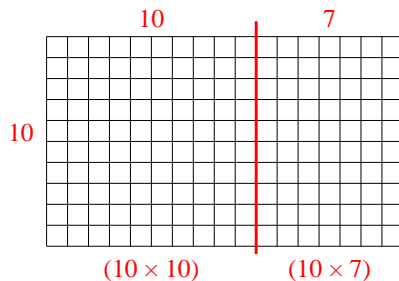


Use the array provided to solve each problem.

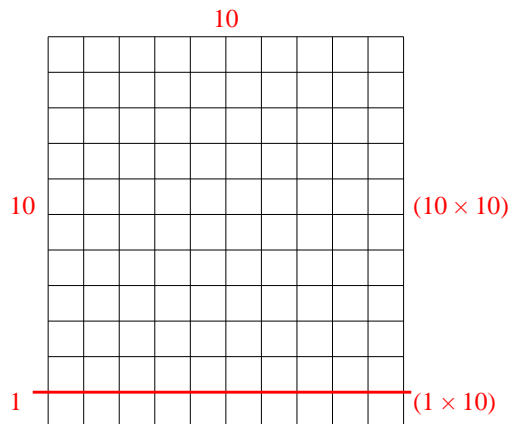
1)  $17 \times 20 =$



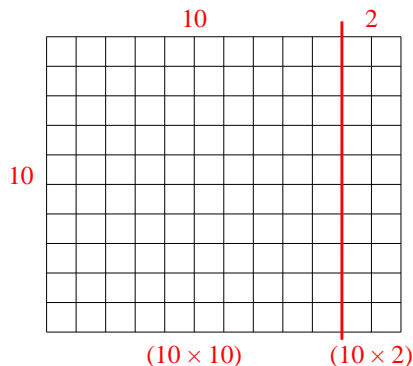
2)  $10 \times 17 =$



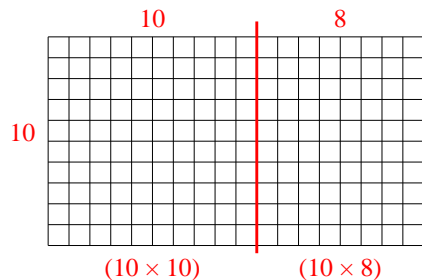
3)  $11 \times 10 =$



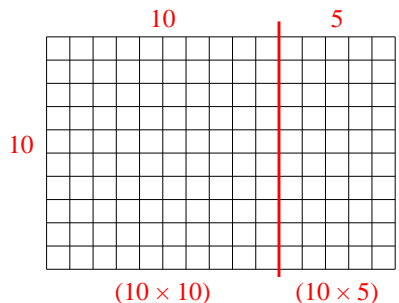
4)  $10 \times 12 =$



5)  $10 \times 18 =$



6)  $10 \times 15 =$



Answers

1. **340**

2. **170**

3. **110**

4. **120**

5. **180**

6. **150**