





Use the array provided to solve each problem.


1)  $23 \times 20 =$




2)  $10 \times 13 =$




3)  $10 \times 11 =$




4)  $10 \times 17 =$



5)  $10 \times 16 =$



6)  $19 \times 10 =$



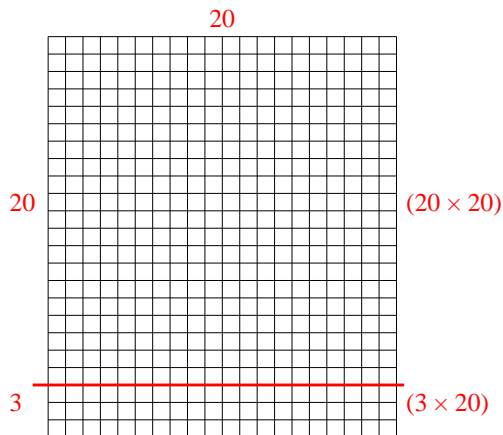
Answers

- 1. \_\_\_\_\_
- 2. \_\_\_\_\_
- 3. \_\_\_\_\_
- 4. \_\_\_\_\_
- 5. \_\_\_\_\_
- 6. \_\_\_\_\_

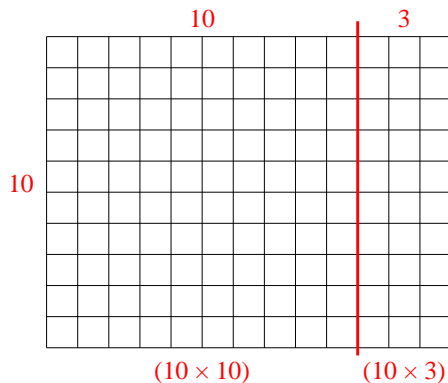


Use the array provided to solve each problem.

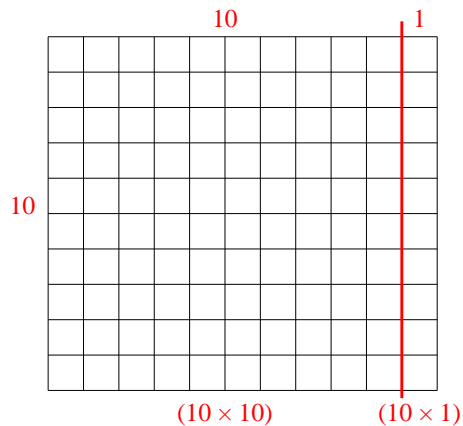
1)  $23 \times 20 =$



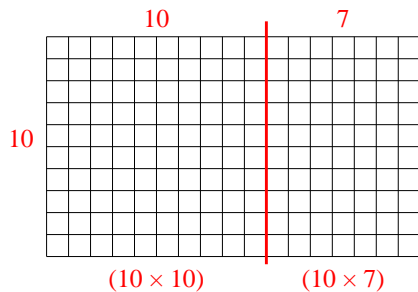
2)  $10 \times 13 =$



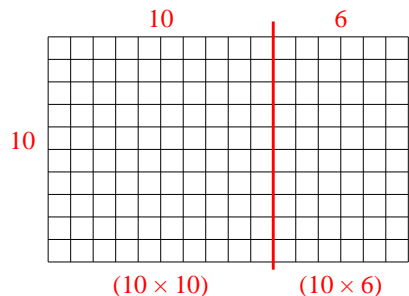
3)  $10 \times 11 =$



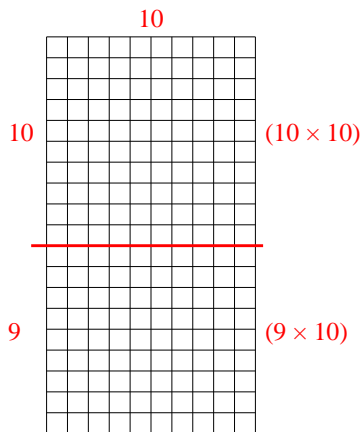
4)  $10 \times 17 =$



5)  $10 \times 16 =$



6)  $19 \times 10 =$



Answers

1. 460

2. 130

3. 110

4. 170

5. 160

6. 190