



Use lattice multiplication to solve each problem.

1)  $18 \times 35 =$



2)  $53 \times 85 =$



3)  $76 \times 55 =$



4)  $52 \times 57 =$



5)  $80 \times 99 =$



6)  $38 \times 19 =$



7)  $93 \times 53 =$



8)  $27 \times 83 =$



9)  $72 \times 60 =$



10)  $64 \times 16 =$



11)  $38 \times 21 =$



12)  $43 \times 70 =$



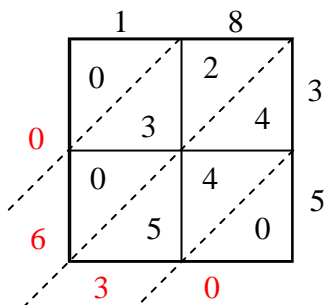
**Answers**

1. \_\_\_\_\_
2. \_\_\_\_\_
3. \_\_\_\_\_
4. \_\_\_\_\_
5. \_\_\_\_\_
6. \_\_\_\_\_
7. \_\_\_\_\_
8. \_\_\_\_\_
9. \_\_\_\_\_
10. \_\_\_\_\_
11. \_\_\_\_\_
12. \_\_\_\_\_

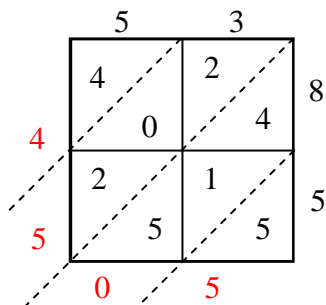


Use lattice multiplication to solve each problem.

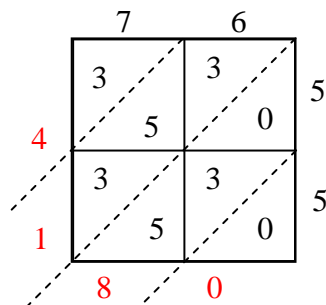
1)  $18 \times 35 =$



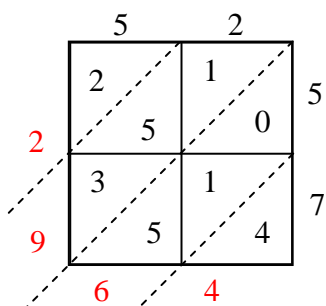
2)  $53 \times 85 =$



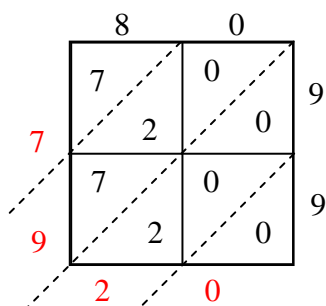
3)  $76 \times 55 =$



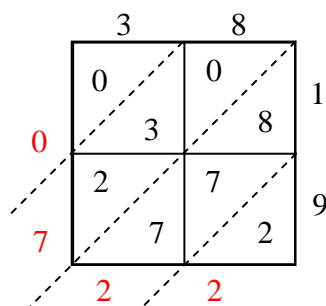
4)  $52 \times 57 =$



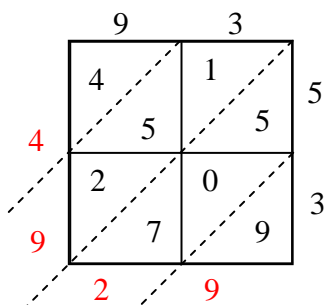
5)  $80 \times 99 =$



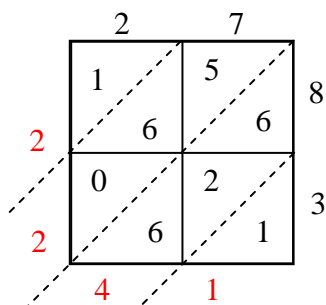
6)  $38 \times 19 =$



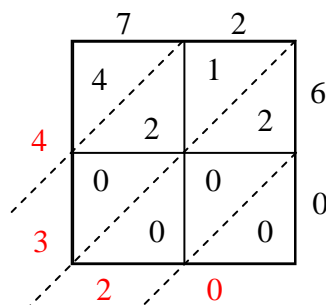
7)  $93 \times 53 =$



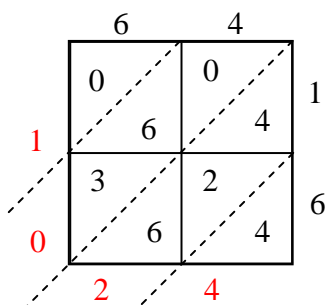
8)  $27 \times 83 =$



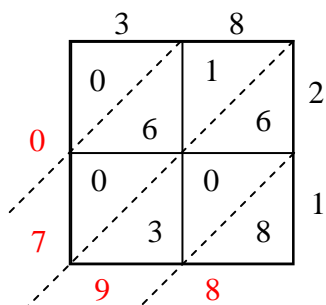
9)  $72 \times 60 =$



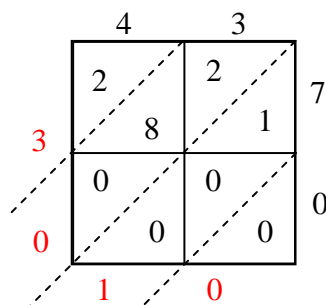
10)  $64 \times 16 =$



11)  $38 \times 21 =$



12)  $43 \times 70 =$



Answers

1. 630
2. 4,505
3. 4,180
4. 2,964
5. 7,920
6. 722
7. 4,929
8. 2,241
9. 4,320
10. 1,024
11. 798
12. 3,010