





Count the number of quarters (25¢), dimes(10¢), nickels(5¢) and pennies(1¢).

Answers


Ex) 

1) 

2) 

3) 


4) 

5) 

6) 

7) 

8) 

9) 

10) 

Ex. 2 2 2 3

1. _____

2. _____

3. _____

4. _____

5. _____

6. _____

7. _____

8. _____

9. _____

10. _____



Count the number of quarters (25¢), dimes(10¢), nickels(5¢) and pennies(1¢).

Ex)

1)

2)

3)

4)

5)

6)

7)

8)

9)

10)

Answers

| | | | | |
|-----|----------|----------|----------|----------|
| Ex. | <u>2</u> | <u>2</u> | <u>2</u> | <u>3</u> |
| 1. | <u>5</u> | <u>1</u> | <u>1</u> | <u>2</u> |
| 2. | <u>2</u> | <u>2</u> | <u>2</u> | <u>3</u> |
| 3. | <u>1</u> | <u>5</u> | <u>2</u> | <u>1</u> |
| 4. | <u>3</u> | <u>1</u> | <u>2</u> | <u>3</u> |
| 5. | <u>3</u> | <u>2</u> | <u>2</u> | <u>2</u> |
| 6. | <u>3</u> | <u>2</u> | <u>2</u> | <u>2</u> |
| 7. | <u>2</u> | <u>2</u> | <u>3</u> | <u>2</u> |
| 8. | <u>2</u> | <u>3</u> | <u>2</u> | <u>2</u> |
| 9. | <u>2</u> | <u>3</u> | <u>2</u> | <u>2</u> |
| 10. | <u>1</u> | <u>4</u> | <u>3</u> | <u>1</u> |