



Solve each problem.


Answers

1) At the fair Amy spent \$3.50 buying fair food. She gave the cashier a twenty dollar bill. How much change should she get back?




- 1. _____
- 2. _____
- 3. _____

2) Tom spent \$4.30 buying some new toys. He bought them using a ten dollar bill. How much change should he get back?



3) Carol spent \$14.99 on a movie ticket. She gave the cashier a twenty dollar bill. How much change should she get back?






Solve each problem.

1) At the fair Amy spent \$3.50 buying fair food. She gave the cashier a twenty dollar bill. How much change should she get back?



2) Tom spent \$4.30 buying some new toys. He bought them using a ten dollar bill. How much change should he get back?



3) Carol spent \$14.99 on a movie ticket. She gave the cashier a twenty dollar bill. How much change should she get back?



Answers

1. **B**

2. **A**

3. **C**