



Determine which letter best represents the length / height.

**Answers**

**Millimeter (mm)**

A millimeter is about the thickness of a credit card.



**Centimeter (cm)**

10 mm = 1 cm.

The metal portion of a pencil is about 1 cm. A ruler is about 30 centimeters.



**Meter (m)**

100 cm = 1 m

From the floor to a door knob is about 1 meter.



**Kilometer (km)**

1,000 m = 1 km

Most major roads are at least a kilometer long.



1. \_\_\_\_\_
2. \_\_\_\_\_
3. \_\_\_\_\_
4. \_\_\_\_\_
5. \_\_\_\_\_
6. \_\_\_\_\_
7. \_\_\_\_\_
8. \_\_\_\_\_
9. \_\_\_\_\_


1)



Popcorn

- A. 3 centimeters
- B. 90 centimeters
- C. 2 kilometers
- D. 3 millimeters

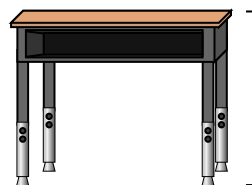
2)



Lollipop

- A. 2 kilometers
- B. 30 millimeters
- C. 10 centimeters
- D. 30 centimeters


3)



Desk

- A. 2 meters
- B. 70 centimeters
- C. 30 centimeters
- D. 15 centimeters

4)



Ferris Wheel

- A. 30 centimeters
- B. 50 kilometers
- C. 23 meters
- D. 5 meters


5)



Toothbrush

- A. 10 centimeters
- B. 3 meters
- C. 17 centimeters
- D. 1 meter

6)



Can of Soda

- A. 1 meter
- B. 10 centimeters
- C. 30 centimeters
- D. 3 centimeters

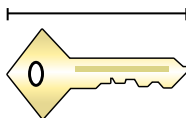
7)



Frog

- A. 60 centimeters
- B. 4 millimeters
- C. 8 centimeters
- D. 20 centimeters

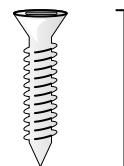
8)



Key

- A. 2 meters
- B. 5 centimeters
- C. 15 centimeters
- D. 150 centimeters

9)



Screw

- A. 1 meter
- B. 25 centimeters
- C. 20 centimeters
- D. 3 centimeters



Determine which letter best represents the length / height.

**Answers**

**Millimeter (mm)**

**Centimeter (cm)**

**Meter (m)**

**Kilometer (km)**

A millimeter is about the thickness of a credit card.

10 mm = 1 cm.  
The metal portion of a pencil is about 1 cm. A ruler is about 30 centimeters.

100 cm = 1 m  
From the floor to a door knob is about 1 meter.

1,000 m = 1 km  
Most major roads are at least a kilometer long.




1)



Popcorn

- A. 3 centimeters
- B. 90 centimeters
- C. 2 kilometers
- D. 3 millimeters

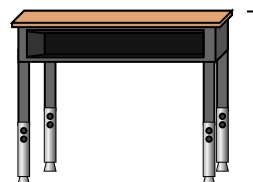
2)



Lollipop

- A. 2 kilometers
- B. 30 millimeters
- C. 10 centimeters
- D. 30 centimeters


3)



Desk

- A. 2 meters
- B. 70 centimeters
- C. 30 centimeters
- D. 15 centimeters

4)



Ferris Wheel

- A. 30 centimeters
- B. 50 kilometers
- C. 23 meters
- D. 5 meters


5)



Toothbrush

- A. 10 centimeters
- B. 3 meters
- C. 17 centimeters
- D. 1 meter

6)



Can of Soda

- A. 1 meter
- B. 10 centimeters
- C. 30 centimeters
- D. 3 centimeters

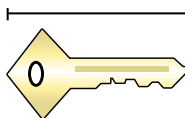
7)



Frog

- A. 60 centimeters
- B. 4 millimeters
- C. 8 centimeters
- D. 20 centimeters

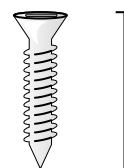
8)



Key

- A. 2 meters
- B. 5 centimeters
- C. 15 centimeters
- D. 150 centimeters

9)



Screw

- A. 1 meter
- B. 25 centimeters
- C. 20 centimeters
- D. 3 centimeters

- 1.   **A**
- 2.   **C**
- 3.   **B**
- 4.   **C**
- 5.   **C**
- 6.   **B**
- 7.   **C**
- 8.   **B**
- 9.   **D**



Determine which letter best represents the length / height.

**Answers**

**Millimeter (mm)**

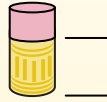
A millimeter is about the thickness of a credit card.



**Centimeter (cm)**

10 mm = 1 cm.

The metal portion of a pencil is about 1 cm. A ruler is about 30 centimeters.



**Meter (m)**

100 cm = 1 m

From the floor to a door knob is about 1 meter.



**Kilometer (km)**

1,000 m = 1 km

Most major roads are at least a kilometer long.



1. \_\_\_\_\_
2. \_\_\_\_\_
3. \_\_\_\_\_
4. \_\_\_\_\_
5. \_\_\_\_\_
6. \_\_\_\_\_
7. \_\_\_\_\_
8. \_\_\_\_\_
9. \_\_\_\_\_

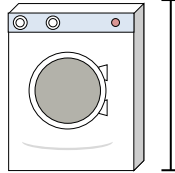
1)



Can of Beans

- A. 2 meters
- B. 2 kilometers
- C. 10 centimeters
- D. 120 centimeters

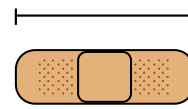
2)



Washing Machine

- A. 30 centimeters
- B. 10 centimeters
- C. 2 meters
- D. 1 meter

3)



Bandage

- A. 60 centimeters
- B. 3 kilometers
- C. 9 centimeters
- D. 1 meter


4)



Mountain

- A. 700 millimeters
- B. 9 meters
- C. 3 kilometers
- D. 60 centimeters


5)



Slice of Bread

- A. 10 centimeters
- B. 120 centimeters
- C. 2 meters
- D. 25 centimeters


6)



Elephant

- A. 150 millimeters
- B. 4 meters
- C. 2 kilometers
- D. 45 centimeters


7)



Dog

- A. 4 meters
- B. 60 centimeters
- C. 2 meters
- D. 10 centimeters


8)



Notebook Paper

- A. 25 centimeters
- B. 1 meter
- C. 15 centimeters
- D. 60 centimeters

9)


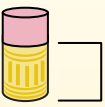
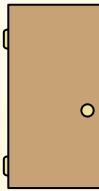



Clothes Iron

- A. 240 centimeters
- B. 60 centimeters
- C. 40 centimeters
- D. 15 centimeters



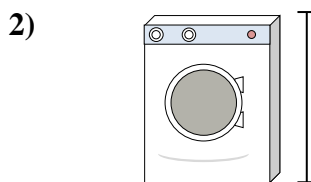
Determine which letter best represents the length / height.

Millimeter (mm)	Centimeter (cm)	Meter (m)	Kilometer (km)
A millimeter is about the thickness of a credit card.	10 mm = 1 cm. The metal portion of a pencil is about 1 cm. A ruler is about 30 centimeters.	100 cm = 1 m From the floor to a door knob is about 1 meter.	1,000 m = 1 km Most major roads are at least a kilometer long.
			

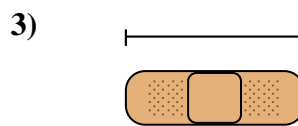
**Answers**




- Can of Beans  
A. 2 meters  
B. 2 kilometers  
C. 10 centimeters  
D. 120 centimeters




- Washing Machine  
A. 30 centimeters  
B. 10 centimeters  
C. 2 meters  
D. 1 meter




- Bandage  
A. 60 centimeters  
B. 3 kilometers  
C. 9 centimeters  
D. 1 meter




- Mountain  
A. 700 millimeters  
B. 9 meters  
C. 3 kilometers  
D. 60 centimeters




- Slice of Bread  
A. 10 centimeters  
B. 120 centimeters  
C. 2 meters  
D. 25 centimeters



- Elephant  
A. 150 millimeters  
B. 4 meters  
C. 2 kilometers  
D. 45 centimeters



- Dog  
A. 4 meters  
B. 60 centimeters  
C. 2 meters  
D. 10 centimeters



- Notebook Paper  
A. 25 centimeters  
B. 1 meter  
C. 15 centimeters  
D. 60 centimeters



- Clothes Iron  
A. 240 centimeters  
B. 60 centimeters  
C. 40 centimeters  
D. 15 centimeters

1.   **C**    
2.   **D**    
3.   **C**    
4.   **C**    
5.   **A**    
6.   **B**    
7.   **B**    
8.   **A**    
9.   **D**



Determine which letter best represents the length / height.

**Answers**

**Millimeter (mm)**

**Centimeter (cm)**

**Meter (m)**

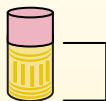
**Kilometer (km)**

A millimeter is about the thickness of a credit card.

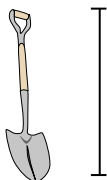
10 mm = 1 cm.  
The metal portion of a pencil is about 1 cm. A ruler is about 30 centimeters.

100 cm = 1 m  
From the floor to a door knob is about 1 meter.

1,000 m = 1 km  
Most major roads are at least a kilometer long.



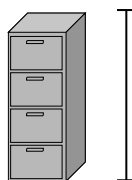
1)



Shovel

- A. 1 meter
- B. 60 centimeters
- C. 3 meters
- D. 30 centimeters


2)



File Cabinet

- A. 30 centimeters
- B. 60 centimeters
- C. 1.5 millimeters
- D. 30 millimeters


3)



Mountain

- A. 700 millimeters
- B. 3 kilometers
- C. 9 meters
- D. 60 centimeters

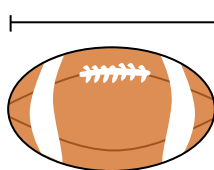
4)



Notebook Paper

- A. 1 meter
- B. 25 centimeters
- C. 15 centimeters
- D. 60 centimeters

5)



Football

- A. 25 centimeters
- B. 3 centimeters
- C. 60 centimeters
- D. 1 meter

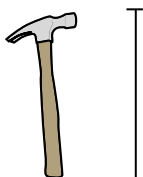
6)



Pen

- A. 12 centimeters
- B. 30 centimeters
- C. 30 millimeters
- D. 5 meters

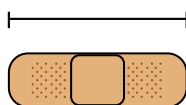
7)



Hammer

- A. 40 centimeters
- B. 1 meter
- C. 10 centimeters
- D. 3 centimeters

8)



Bandage

- A. 9 centimeters
- B. 1 meter
- C. 60 centimeters
- D. 3 kilometers

9)



Popcorn

- A. 3 centimeters
- B. 2 kilometers
- C. 3 millimeters
- D. 90 centimeters

- 1. \_\_\_\_\_
- 2. \_\_\_\_\_
- 3. \_\_\_\_\_
- 4. \_\_\_\_\_
- 5. \_\_\_\_\_
- 6. \_\_\_\_\_
- 7. \_\_\_\_\_
- 8. \_\_\_\_\_
- 9. \_\_\_\_\_



Determine which letter best represents the length / height.

**Millimeter (mm)**

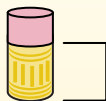
A millimeter is about the thickness of a credit card.



**Centimeter (cm)**

10 mm = 1 cm.

The metal portion of a pencil is about 1 cm. A ruler is about 30 centimeters.



**Meter (m)**

100 cm = 1 m

From the floor to a door knob is about 1 meter.



**Kilometer (km)**

1,000 m = 1 km

Most major roads are at least a kilometer long.



**Answers**

1. **A**

2. **C**

3. **B**

4. **B**

5. **A**

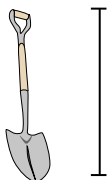
6. **A**

7. **A**

8. **A**

9. **A**

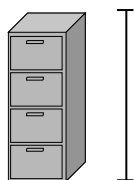
1)



Shovel

- A. 1 meter
- B. 60 centimeters
- C. 3 meters
- D. 30 centimeters


2)



File Cabinet

- A. 30 centimeters
- B. 60 centimeters
- C. 1.5 millimeters
- D. 30 millimeters


3)



Mountain

- A. 700 millimeters
- B. 3 kilometers
- C. 9 meters
- D. 60 centimeters

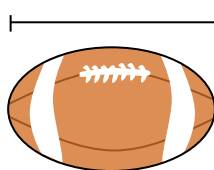
4)



Notebook Paper

- A. 1 meter
- B. 25 centimeters
- C. 15 centimeters
- D. 60 centimeters

5)



Football

- A. 25 centimeters
- B. 3 centimeters
- C. 60 centimeters
- D. 1 meter

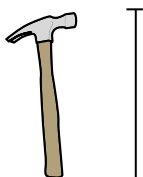
6)



Pen

- A. 12 centimeters
- B. 30 centimeters
- C. 30 millimeters
- D. 5 meters

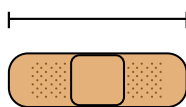
7)



Hammer

- A. 40 centimeters
- B. 1 meter
- C. 10 centimeters
- D. 3 centimeters

8)



Bandage

- A. 9 centimeters
- B. 1 meter
- C. 60 centimeters
- D. 3 kilometers

9)



Popcorn

- A. 3 centimeters
- B. 2 kilometers
- C. 3 millimeters
- D. 90 centimeters



Determine which letter best represents the length / height.

**Answers**

**Millimeter (mm)**

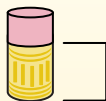
A millimeter is about the thickness of a credit card.



**Centimeter (cm)**

10 mm = 1 cm.

The metal portion of a pencil is about 1 cm. A ruler is about 30 centimeters.



**Meter (m)**

100 cm = 1 m

From the floor to a door knob is about 1 meter.



**Kilometer (km)**


1,000 m = 1 km

Most major roads are at least a kilometer long.



1. \_\_\_\_\_
2. \_\_\_\_\_
3. \_\_\_\_\_
4. \_\_\_\_\_
5. \_\_\_\_\_
6. \_\_\_\_\_
7. \_\_\_\_\_
8. \_\_\_\_\_
9. \_\_\_\_\_


1)



Notebook Paper

- A. 60 centimeters
- B. 15 centimeters
- C. 1 meter
- D. 25 centimeters

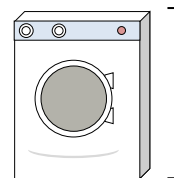
2)



Gallon of Milk

- A. 3 meters
- B. 20 centimeters
- C. 10 millimeters
- D. 8 centimeters

3)



Washing Machine

- A. 10 centimeters
- B. 30 centimeters
- C. 1 meter
- D. 2 meters


4)



Glue Stick

- A. 30 centimeters
- B. 10 centimeters
- C. 6 kilometers
- D. 25 centimeters

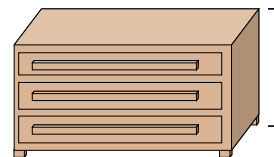
5)



Elephant

- A. 45 centimeters
- B. 4 meters
- C. 150 millimeters
- D. 2 kilometers

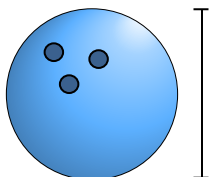
6)



Dresser

- A. 45 centimeters
- B. 30 centimeters
- C. 90 centimeters
- D. 3 meters

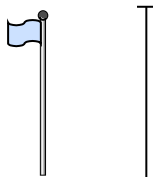
7)



Bowling Ball Height

- A. 10 centimeters
- B. 1 meter
- C. 25 centimeters
- D. 305 centimeters

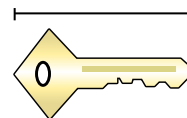
8)



Flag Pole

- A. 300 centimeters
- B. 9 meters
- C. 2 meters
- D. 2 kilometers

9)



Key

- A. 2 meters
- B. 5 centimeters
- C. 15 centimeters
- D. 150 centimeters



Determine which letter best represents the length / height.

**Millimeter (mm)**

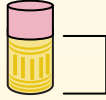
A millimeter is about the thickness of a credit card.



**Centimeter (cm)**

10 mm = 1 cm.

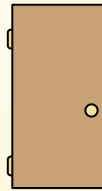
The metal portion of a pencil is about 1 cm. A ruler is about 30 centimeters.



**Meter (m)**

100 cm = 1 m

From the floor to a door knob is about 1 meter.



**Kilometer (km)**

1,000 m = 1 km

Most major roads are at least a kilometer long.



**Answers**

1. **D**

2. **B**

3. **C**

4. **B**


5. **B**

6. **C**


7. **C**

8. **B**

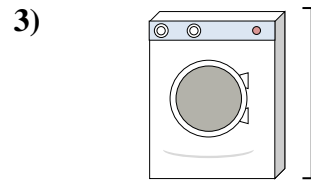
9. **B**



Notebook Paper  
A. 60 centimeters  
B. 15 centimeters  
C. 1 meter  
D. 25 centimeters




Gallon of Milk  
A. 3 meters  
B. 20 centimeters  
C. 10 millimeters  
D. 8 centimeters



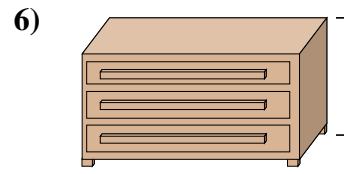
Washing Machine  
A. 10 centimeters  
B. 30 centimeters  
C. 1 meter  
D. 2 meters




Glue Stick  
A. 30 centimeters  
B. 10 centimeters  
C. 6 kilometers  
D. 25 centimeters



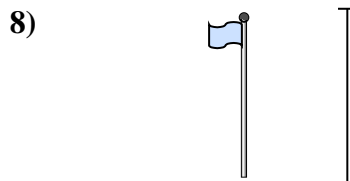
Elephant  
A. 45 centimeters  
B. 4 meters  
C. 150 millimeters  
D. 2 kilometers



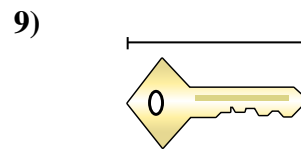
Dresser  
A. 45 centimeters  
B. 30 centimeters  
C. 90 centimeters  
D. 3 meters



Bowling Ball Height  
A. 10 centimeters  
B. 1 meter  
C. 25 centimeters  
D. 305 centimeters



Flag Pole  
A. 300 centimeters  
B. 9 meters  
C. 2 meters  
D. 2 kilometers



Key  
A. 2 meters  
B. 5 centimeters  
C. 15 centimeters  
D. 150 centimeters





Determine which letter best represents the length / height.

**Answers**

**Millimeter (mm)**

**Centimeter (cm)**

**Meter (m)**


**Kilometer (km)**

A millimeter is about the thickness of a credit card.


10 mm = 1 cm.  
The metal portion of a pencil is about 1 cm. A ruler is about 30 centimeters.

100 cm = 1 m  
From the floor to a door knob is about 1 meter.

1,000 m = 1 km  
Most major roads are at least a kilometer long.



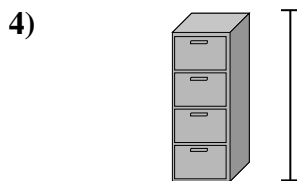
- Notebook Paper  
A. 15 centimeters  
B. 25 centimeters  
C. 60 centimeters  
D. 1 meter




- Mountain  
A. 9 meters  
B. 3 kilometers  
C. 60 centimeters  
D. 700 millimeters



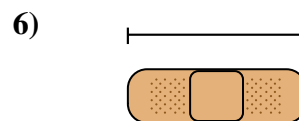
- Pen  
A. 5 meters  
B. 30 millimeters  
C. 12 centimeters  
D. 30 centimeters



- File Cabinet  
A. 30 millimeters  
B. 60 centimeters  
C. 1.5 millimeters  
D. 30 centimeters



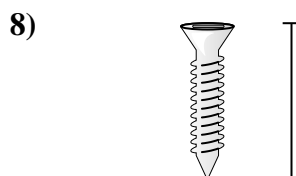
- Frog  
A. 4 millimeters  
B. 60 centimeters  
C. 8 centimeters  
D. 20 centimeters



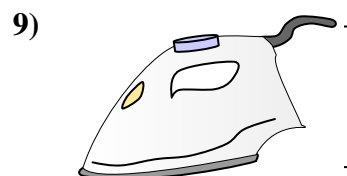
- Bandage  
A. 9 centimeters  
B. 3 kilometers  
C. 60 centimeters  
D. 1 meter



- Bug  
A. 30 centimeters  
B. 7 millimeters  
C. 5 centimeters  
D. 10 centimeters



- Screw  
A. 3 centimeters  
B. 25 centimeters  
C. 20 centimeters  
D. 1 meter



- Clothes Iron  
A. 40 centimeters  
B. 15 centimeters  
C. 60 centimeters  
D. 240 centimeters

- 1. \_\_\_\_\_
- 2. \_\_\_\_\_
- 3. \_\_\_\_\_
- 4. \_\_\_\_\_
- 5. \_\_\_\_\_
- 6. \_\_\_\_\_
- 7. \_\_\_\_\_
- 8. \_\_\_\_\_
- 9. \_\_\_\_\_



Determine which letter best represents the length / height.

**Answers**

**Millimeter (mm)**

**Centimeter (cm)**

**Meter (m)**


**Kilometer (km)**

A millimeter is about the thickness of a credit card.


10 mm = 1 cm.  
The metal portion of a pencil is about 1 cm. A ruler is about 30 centimeters.

100 cm = 1 m  
From the floor to a door knob is about 1 meter.

1,000 m = 1 km  
Most major roads are at least a kilometer long.



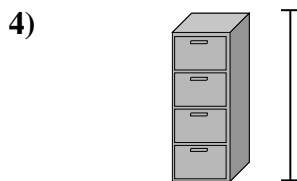
- Notebook Paper  
A. 15 centimeters  
B. 25 centimeters  
C. 60 centimeters  
D. 1 meter




- Mountain  
A. 9 meters  
B. 3 kilometers  
C. 60 centimeters  
D. 700 millimeters



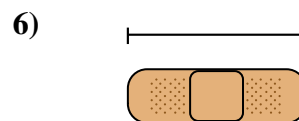
- Pen  
A. 5 meters  
B. 30 millimeters  
C. 12 centimeters  
D. 30 centimeters




- File Cabinet  
A. 30 millimeters  
B. 60 centimeters  
C. 1.5 millimeters  
D. 30 centimeters



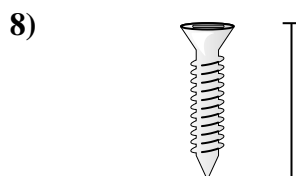
- Frog  
A. 4 millimeters  
B. 60 centimeters  
C. 8 centimeters  
D. 20 centimeters



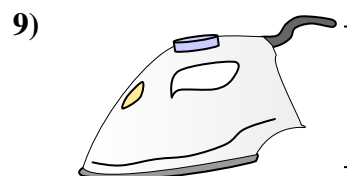
- Bandage  
A. 9 centimeters  
B. 3 kilometers  
C. 60 centimeters  
D. 1 meter



- Bug  
A. 30 centimeters  
B. 7 millimeters  
C. 5 centimeters  
D. 10 centimeters



- Screw  
A. 3 centimeters  
B. 25 centimeters  
C. 20 centimeters  
D. 1 meter



- Clothes Iron  
A. 40 centimeters  
B. 15 centimeters  
C. 60 centimeters  
D. 240 centimeters

1.   **B**    
2.   **B**    
3.   **C**    
4.   **C**    
5.   **C**    
6.   **A**    
7.   **B**    
8.   **A**    
9.   **B**



Determine which letter best represents the length / height.

**Answers**

**Millimeter (mm)**

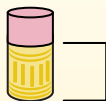
A millimeter is about the thickness of a credit card.



**Centimeter (cm)**

10 mm = 1 cm.

The metal portion of a pencil is about 1 cm. A ruler is about 30 centimeters.



**Meter (m)**

100 cm = 1 m

From the floor to a door knob is about 1 meter.



**Kilometer (km)**


1,000 m = 1 km

Most major roads are at least a kilometer long.



1. \_\_\_\_\_
2. \_\_\_\_\_
3. \_\_\_\_\_
4. \_\_\_\_\_
5. \_\_\_\_\_
6. \_\_\_\_\_
7. \_\_\_\_\_
8. \_\_\_\_\_
9. \_\_\_\_\_


1)



Cooking Pot

- A. 10 centimeters
- B. 3 centimeters
- C. 60 centimeters
- D. 25 centimeters

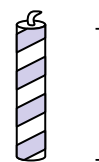
2)



Hammer

- A. 3 centimeters
- B. 40 centimeters
- C. 10 centimeters
- D. 1 meter

3)



Candle

- A. 20 centimeters
- B. 30 centimeters
- C. 5 centimeters
- D. 2 kilometers

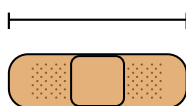
4)



Glue Stick

- A. 30 centimeters
- B. 6 kilometers
- C. 25 centimeters
- D. 10 centimeters

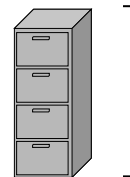
5)



Bandage

- A. 60 centimeters
- B. 3 kilometers
- C. 9 centimeters
- D. 1 meter

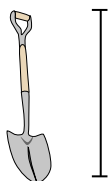
6)



File Cabinet

- A. 1.5 millimeters
- B. 30 millimeters
- C. 60 centimeters
- D. 30 centimeters

7)



Shovel

- A. 60 centimeters
- B. 1 meter
- C. 30 centimeters
- D. 3 meters

8)



Tree Height

- A. 2 kilometers
- B. 100 centimeters
- C. 5 meters
- D. 30 centimeters

9)

Flash Drive

- A. 60 centimeters
- B. 30 centimeters
- C. 15 centimeters
- D. 6 centimeters



Determine which letter best represents the length / height.

**Answers**

**Millimeter (mm)**

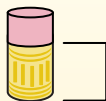
A millimeter is about the thickness of a credit card.



**Centimeter (cm)**

10 mm = 1 cm.

The metal portion of a pencil is about 1 cm. A ruler is about 30 centimeters.



**Meter (m)**

100 cm = 1 m

From the floor to a door knob is about 1 meter.



**Kilometer (km)**

1,000 m = 1 km

Most major roads are at least a kilometer long.



1. **D**

2. **B**

3. **C**

4. **D**

5. **C**


6. **A**

7. **B**

8. **C**

9. **D**


1)



Cooking Pot

- A. 10 centimeters
- B. 3 centimeters
- C. 60 centimeters
- D. 25 centimeters


2)



Hammer

- A. 3 centimeters
- B. 40 centimeters
- C. 10 centimeters
- D. 1 meter

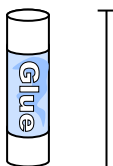
3)



Candle

- A. 20 centimeters
- B. 30 centimeters
- C. 5 centimeters
- D. 2 kilometers

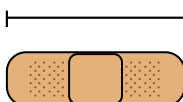
4)



Glue Stick

- A. 30 centimeters
- B. 6 kilometers
- C. 25 centimeters
- D. 10 centimeters

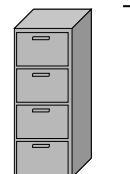
5)



Bandage

- A. 60 centimeters
- B. 3 kilometers
- C. 9 centimeters
- D. 1 meter

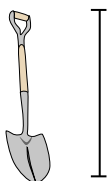
6)



File Cabinet

- A. 1.5 millimeters
- B. 30 millimeters
- C. 60 centimeters
- D. 30 centimeters

7)



Shovel

- A. 60 centimeters
- B. 1 meter
- C. 30 centimeters
- D. 3 meters

8)



Tree Height

- A. 2 kilometers
- B. 100 centimeters
- C. 5 meters
- D. 30 centimeters

9)

Flash Drive

- A. 60 centimeters
- B. 30 centimeters
- C. 15 centimeters
- D. 6 centimeters



Determine which letter best represents the length / height.

**Answers**

**Millimeter (mm)**

**Centimeter (cm)**

**Meter (m)**

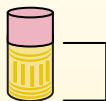
**Kilometer (km)**

A millimeter is about the thickness of a credit card.

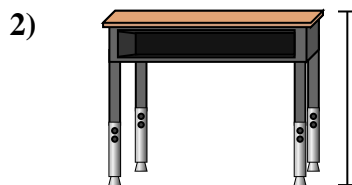
10 mm = 1 cm.  
The metal portion of a pencil is about 1 cm. A ruler is about 30 centimeters.

100 cm = 1 m  
From the floor to a door knob is about 1 meter.


1,000 m = 1 km  
Most major roads are at least a kilometer long.



- Pen  
A. 12 centimeters  
B. 30 millimeters  
C. 30 centimeters  
D. 5 meters



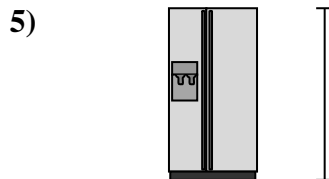
- Desk  
A. 15 centimeters  
B. 2 meters  
C. 70 centimeters  
D. 30 centimeters



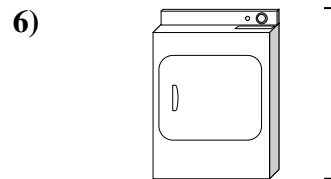
- Frog  
A. 20 centimeters  
B. 8 centimeters  
C. 4 millimeters  
D. 60 centimeters



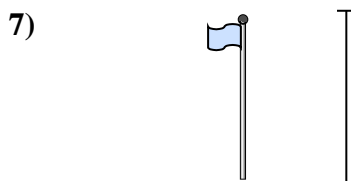
- Bicycle  
A. 10 centimeters  
B. 1 meter  
C. 3 meters  
D. 25 centimeters




- Refrigerator  
A. 180 centimeters  
B. 30 centimeters  
C. 5 kilometers  
D. 4 meters



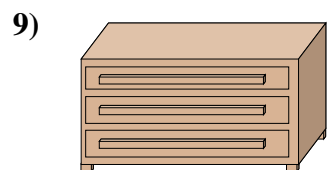
- Clothes Dryer  
A. 60 centimeters  
B. 1 meter  
C. 25 centimeters  
D. 15 centimeters



- Flag Pole  
A. 2 kilometers  
B. 9 meters  
C. 300 centimeters  
D. 2 meters



- Tennis Ball  
A. 3 millimeters  
B. 25 centimeters  
C. 8 centimeters  
D. 60 centimeters



- Dresser  
A. 45 centimeters  
B. 90 centimeters  
C. 3 meters  
D. 30 centimeters

- 1. \_\_\_\_\_
- 2. \_\_\_\_\_
- 3. \_\_\_\_\_
- 4. \_\_\_\_\_
- 5. \_\_\_\_\_
- 6. \_\_\_\_\_
- 7. \_\_\_\_\_
- 8. \_\_\_\_\_
- 9. \_\_\_\_\_



Determine which letter best represents the length / height.

**Millimeter (mm)**

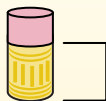
A millimeter is about the thickness of a credit card.



**Centimeter (cm)**

10 mm = 1 cm.

The metal portion of a pencil is about 1 cm. A ruler is about 30 centimeters.



**Meter (m)**

100 cm = 1 m

From the floor to a door knob is about 1 meter.



**Kilometer (km)**

1,000 m = 1 km

Most major roads are at least a kilometer long.



**Answers**

1. **A**

2. **C**

3. **B**

4. **B**

5. **A**

6. **B**

7. **B**

8. **C**

9. **B**

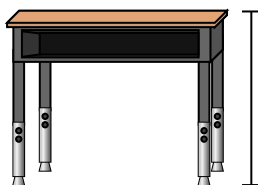
1)



Pen

- A. 12 centimeters
- B. 30 millimeters
- C. 30 centimeters
- D. 5 meters

2)



Desk

- A. 15 centimeters
- B. 2 meters
- C. 70 centimeters
- D. 30 centimeters

3)



Frog

- A. 20 centimeters
- B. 8 centimeters
- C. 4 millimeters
- D. 60 centimeters

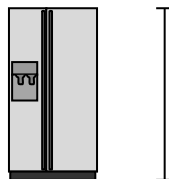
4)



Bicycle

- A. 10 centimeters
- B. 1 meter
- C. 3 meters
- D. 25 centimeters


5)



Refrigerator

- A. 180 centimeters
- B. 30 centimeters
- C. 5 kilometers
- D. 4 meters

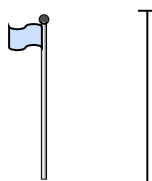
6)



Clothes Dryer

- A. 60 centimeters
- B. 1 meter
- C. 25 centimeters
- D. 15 centimeters


7)



Flag Pole

- A. 2 kilometers
- B. 9 meters
- C. 300 centimeters
- D. 2 meters

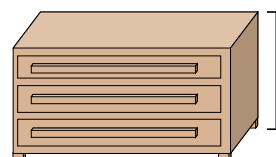
8)



Tennis Ball

- A. 3 millimeters
- B. 25 centimeters
- C. 8 centimeters
- D. 60 centimeters

9)



Dresser

- A. 45 centimeters
- B. 90 centimeters
- C. 3 meters
- D. 30 centimeters



Determine which letter best represents the length / height.

**Answers**

**Millimeter (mm)**

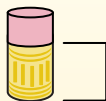
A millimeter is about the thickness of a credit card.



**Centimeter (cm)**

10 mm = 1 cm.

The metal portion of a pencil is about 1 cm. A ruler is about 30 centimeters.



**Meter (m)**

100 cm = 1 m

From the floor to a door knob is about 1 meter.



**Kilometer (km)**

1,000 m = 1 km

Most major roads are at least a kilometer long.



1. \_\_\_\_\_
2. \_\_\_\_\_
3. \_\_\_\_\_
4. \_\_\_\_\_
5. \_\_\_\_\_
6. \_\_\_\_\_
7. \_\_\_\_\_
8. \_\_\_\_\_
9. \_\_\_\_\_

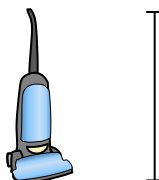
1)



Bicycle

- A. 10 centimeters
- B. 25 centimeters
- C. 1 meter
- D. 3 meters

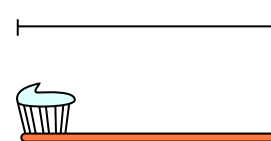
2)



Vacuum

- A. 30 centimeters
- B. 120 centimeters
- C. 3 meters
- D. 35 centimeters


3)



Toothbrush

- A. 3 meters
- B. 10 centimeters
- C. 17 centimeters
- D. 1 meter


4)



Cereal Box Height

- A. 10 centimeters
- B. 60 centimeters
- C. 3 centimeters
- D. 30 centimeters


5)



Elephant

- A. 2 kilometers
- B. 150 millimeters
- C. 45 centimeters
- D. 4 meters

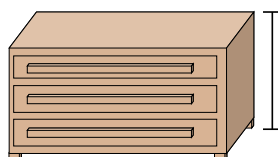
6)



Clothes Dryer

- A. 15 centimeters
- B. 60 centimeters
- C. 25 centimeters
- D. 1 meter

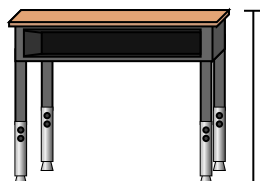
7)



Dresser

- A. 30 centimeters
- B. 3 meters
- C. 90 centimeters
- D. 45 centimeters

8)



Desk

- A. 15 centimeters
- B. 30 centimeters
- C. 70 centimeters
- D. 2 meters

9)



Bug

- A. 30 centimeters
- B. 10 centimeters
- C. 5 centimeters
- D. 7 millimeters



Determine which letter best represents the length / height.

**Millimeter (mm)**

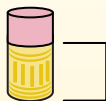
A millimeter is about the thickness of a credit card.



**Centimeter (cm)**

10 mm = 1 cm.

The metal portion of a pencil is about 1 cm. A ruler is about 30 centimeters.



**Meter (m)**

100 cm = 1 m

From the floor to a door knob is about 1 meter.



**Kilometer (km)**

1,000 m = 1 km

Most major roads are at least a kilometer long.



**Answers**

1. **C**

2. **B**

3. **C**

4. **D**

5. **D**

6. **D**

7. **C**

8. **C**

9. **D**




Bicycle

- A. 10 centimeters
- B. 25 centimeters
- C. 1 meter
- D. 3 meters



Vacuum

- A. 30 centimeters
- B. 120 centimeters
- C. 3 meters
- D. 35 centimeters




Toothbrush

- A. 3 meters
- B. 10 centimeters
- C. 17 centimeters
- D. 1 meter



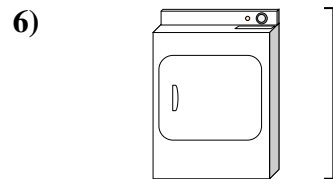
Cereal Box Height

- A. 10 centimeters
- B. 60 centimeters
- C. 3 centimeters
- D. 30 centimeters



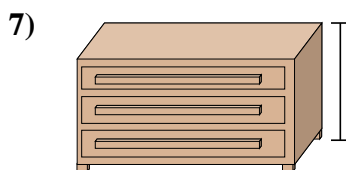
Elephant

- A. 2 kilometers
- B. 150 millimeters
- C. 45 centimeters
- D. 4 meters



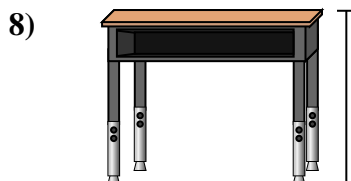
Clothes Dryer

- A. 15 centimeters
- B. 60 centimeters
- C. 25 centimeters
- D. 1 meter



Dresser

- A. 30 centimeters
- B. 3 meters
- C. 90 centimeters
- D. 45 centimeters



Desk

- A. 15 centimeters
- B. 30 centimeters
- C. 70 centimeters
- D. 2 meters



Bug

- A. 30 centimeters
- B. 10 centimeters
- C. 5 centimeters
- D. 7 millimeters





Determine which letter best represents the length / height.

**Answers**

**Millimeter (mm)**

**Centimeter (cm)**

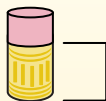
**Meter (m)**

**Kilometer (km)**

A millimeter is about the thickness of a credit card.



10 mm = 1 cm.  
The metal portion of a pencil is about 1 cm. A ruler is about 30 centimeters.



100 cm = 1 m  
From the floor to a door knob is about 1 meter.




1,000 m = 1 km  
Most major roads are at least a kilometer long.



1. \_\_\_\_\_
2. \_\_\_\_\_
3. \_\_\_\_\_
4. \_\_\_\_\_
5. \_\_\_\_\_
6. \_\_\_\_\_
7. \_\_\_\_\_
8. \_\_\_\_\_
9. \_\_\_\_\_



1)



Can of Soda

- A. 30 centimeters
- B. 3 centimeters
- C. 1 meter
- D. 10 centimeters



2)



Washing Machine

- A. 1 meter
- B. 30 centimeters
- C. 2 meters
- D. 10 centimeters

3)



Lollipop

- A. 30 millimeters
- B. 30 centimeters
- C. 2 kilometers
- D. 10 centimeters

4)



Bicycle

- A. 25 centimeters
- B. 10 centimeters
- C. 1 meter
- D. 3 meters

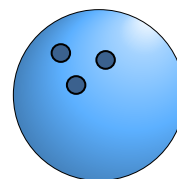
5)



Shovel

- A. 30 centimeters
- B. 60 centimeters
- C. 1 meter
- D. 3 meters

6)



Bowling Ball Height

- A. 25 centimeters
- B. 305 centimeters
- C. 1 meter
- D. 10 centimeters

7)



File Cabinet

- A. 30 centimeters
- B. 1.5 millimeters
- C. 30 millimeters
- D. 60 centimeters

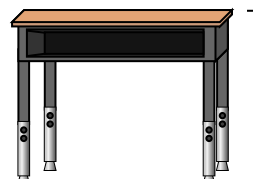
8)



Pencil

- A. 30 millimeters
- B. 20 centimeters
- C. 150 centimeters
- D. 1 meter

9)



Desk

- A. 2 meters
- B. 15 centimeters
- C. 30 centimeters
- D. 70 centimeters



Determine which letter best represents the length / height.

**Millimeter (mm)**

A millimeter is about the thickness of a credit card.



**Centimeter (cm)**

10 mm = 1 cm.

The metal portion of a pencil is about 1 cm. A ruler is about 30 centimeters.



**Meter (m)**

100 cm = 1 m

From the floor to a door knob is about 1 meter.



**Kilometer (km)**

1,000 m = 1 km

Most major roads are at least a kilometer long.



**Answers**

1. **D**

2. **A**

3. **D**

4. **C**

5. **C**


6. **A**

7. **B**

8. **B**

9. **D**


1)



Can of Soda

- A. 30 centimeters
- B. 3 centimeters
- C. 1 meter
- D. 10 centimeters


2)



Washing Machine

- A. 1 meter
- B. 30 centimeters
- C. 2 meters
- D. 10 centimeters

3)



Lollipop

- A. 30 millimeters
- B. 30 centimeters
- C. 2 kilometers
- D. 10 centimeters

4)



Bicycle

- A. 25 centimeters
- B. 10 centimeters
- C. 1 meter
- D. 3 meters

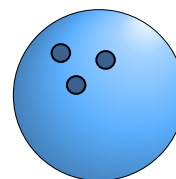
5)



Shovel

- A. 30 centimeters
- B. 60 centimeters
- C. 1 meter
- D. 3 meters

6)



Bowling Ball Height

- A. 25 centimeters
- B. 305 centimeters
- C. 1 meter
- D. 10 centimeters

7)



File Cabinet

- A. 30 centimeters
- B. 1.5 millimeters
- C. 30 millimeters
- D. 60 centimeters

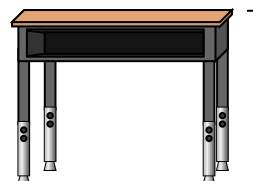
8)



Pencil

- A. 30 millimeters
- B. 20 centimeters
- C. 150 centimeters
- D. 1 meter

9)



Desk

- A. 2 meters
- B. 15 centimeters
- C. 30 centimeters
- D. 70 centimeters



Determine which letter best represents the length / height.

**Answers**

**Millimeter (mm)**

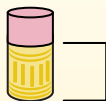
A millimeter is about the thickness of a credit card.



**Centimeter (cm)**

10 mm = 1 cm.

The metal portion of a pencil is about 1 cm. A ruler is about 30 centimeters.



**Meter (m)**

100 cm = 1 m

From the floor to a door knob is about 1 meter.



**Kilometer (km)**

1,000 m = 1 km

Most major roads are at least a kilometer long.




1. \_\_\_\_\_
2. \_\_\_\_\_
3. \_\_\_\_\_
4. \_\_\_\_\_
5. \_\_\_\_\_
6. \_\_\_\_\_
7. \_\_\_\_\_
8. \_\_\_\_\_
9. \_\_\_\_\_

1)

DVD

- A. 10 centimeters
- B. 1 meter
- C. 30 millimeters
- D. 30 centimeters


2)



Mountain

- A. 700 millimeters
- B. 3 kilometers
- C. 60 centimeters
- D. 9 meters

3)



Slice of Bread

- A. 120 centimeters
- B. 2 meters
- C. 10 centimeters
- D. 25 centimeters

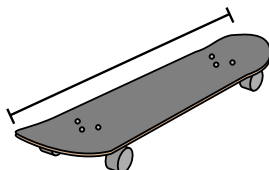
4)



Bicycle

- A. 3 meters
- B. 25 centimeters
- C. 10 centimeters
- D. 1 meter

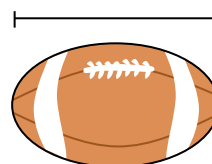
5)



Skateboard

- A. 80 centimeters
- B. 2 meters
- C. 30 centimeters
- D. 3 centimeters

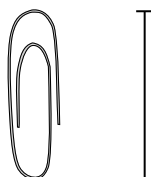
6)



Football

- A. 1 meter
- B. 25 centimeters
- C. 3 centimeters
- D. 60 centimeters

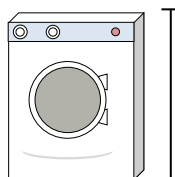
7)



Paperclip

- A. 3 centimeters
- B. 60 centimeters
- C. 10 centimeters
- D. 30 centimeters

8)



Washing Machine

- A. 30 centimeters
- B. 1 meter
- C. 2 meters
- D. 10 centimeters

9)



Glue Stick

- A. 10 centimeters
- B. 30 centimeters
- C. 25 centimeters
- D. 6 kilometers



Determine which letter best represents the length / height.

**Answers**

**Millimeter (mm)**

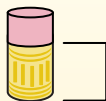
A millimeter is about the thickness of a credit card.



**Centimeter (cm)**

10 mm = 1 cm.

The metal portion of a pencil is about 1 cm. A ruler is about 30 centimeters.



**Meter (m)**

100 cm = 1 m

From the floor to a door knob is about 1 meter.



**Kilometer (km)**

1,000 m = 1 km

Most major roads are at least a kilometer long.



1. **A**

2. **B**

3. **C**

4. **D**

5. **A**

6. **B**

7. **A**

8. **B**


9. **A**

1)

DVD

- A. 10 centimeters
- B. 1 meter
- C. 30 millimeters
- D. 30 centimeters


2)



Mountain

- A. 700 millimeters
- B. 3 kilometers
- C. 60 centimeters
- D. 9 meters

3)



Slice of Bread

- A. 120 centimeters
- B. 2 meters
- C. 10 centimeters
- D. 25 centimeters

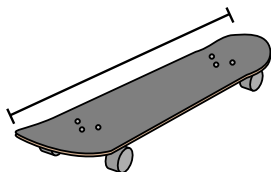
4)



Bicycle

- A. 3 meters
- B. 25 centimeters
- C. 10 centimeters
- D. 1 meter

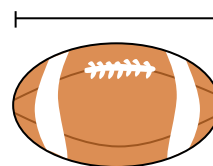
5)



Skateboard

- A. 80 centimeters
- B. 2 meters
- C. 30 centimeters
- D. 3 centimeters

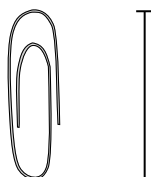
6)



Football

- A. 1 meter
- B. 25 centimeters
- C. 3 centimeters
- D. 60 centimeters

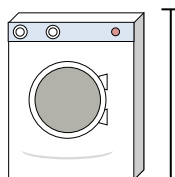
7)



Paperclip

- A. 3 centimeters
- B. 60 centimeters
- C. 10 centimeters
- D. 30 centimeters

8)



Washing Machine

- A. 30 centimeters
- B. 1 meter
- C. 2 meters
- D. 10 centimeters

9)



Glue Stick

- A. 10 centimeters
- B. 30 centimeters
- C. 25 centimeters
- D. 6 kilometers