




Measure the width of each block in inches and in centimeters.



Answers

Ex. 1 2-3

1. \_\_\_\_\_

2. \_\_\_\_\_

3. \_\_\_\_\_

4. \_\_\_\_\_

5. \_\_\_\_\_

6. \_\_\_\_\_



7. \_\_\_\_\_

8. \_\_\_\_\_

9. \_\_\_\_\_



Measure the width of each block in inches and in centimeters.



**Answers**

Ex. 1    2 - 3

1. 3 1/2    8 - 9

2. 5 1/2    13 - 14

3. 5    12 - 13

4. 4 1/2    11 - 12

5. 1 1/2    3 - 4

6. 4    10 - 11

7. 2    5 - 6

8. 3    7 - 8

9. 0 1/2    1 - 2