



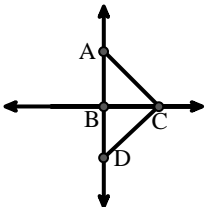
Match the description on the top with the visual image on the bottom.

Answers

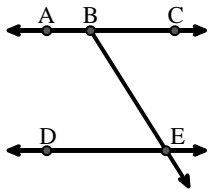
- 1) \overleftrightarrow{BA} intersecting \overleftrightarrow{AD}
- 2) \overleftrightarrow{BD} intersecting $\angle ACE$
- 3) $\angle DEC$ intersected by \overleftrightarrow{AC}
- 4) Right $\angle ADE$
- 5) \overleftrightarrow{BC} intersecting $\angle ACD$
- 6) D as the midpoint of \overleftrightarrow{CE}
- 7) \overleftrightarrow{AC} perpendicular to \overleftrightarrow{AD}
- 8) \overleftrightarrow{AE} intersecting \overleftrightarrow{DB}
- 9) \overleftrightarrow{AC} parallel to \overleftrightarrow{EB}
- 10) \overleftrightarrow{BD} intersecting \overline{CE}
- 11) Acute $\angle BED$
- 12) Acute $\angle BDE$

1. _____
2. _____
3. _____
4. _____
5. _____
6. _____
7. _____
8. _____
9. _____
10. _____
11. _____
12. _____

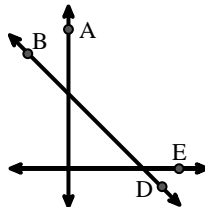
A.



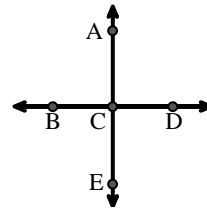
B.



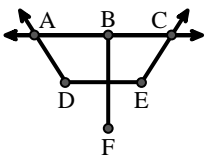
C.



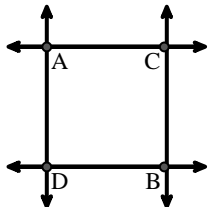
D.



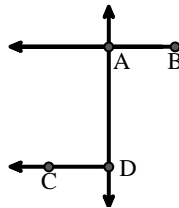
E.



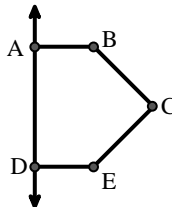
F.



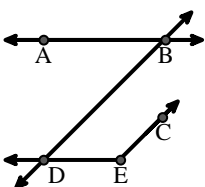
G.



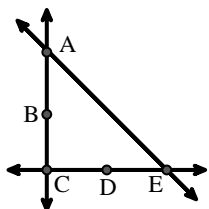
H.



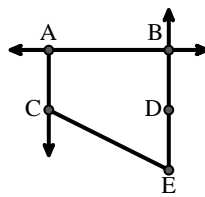
I.



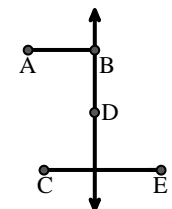
J.



K.



L.





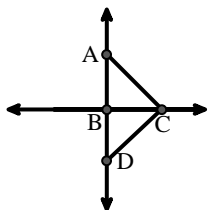
Match the description on the top with the visual image on the bottom.

Answers

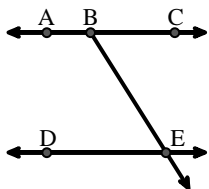
- 1) \overleftrightarrow{BA} intersecting \overleftrightarrow{AD}
- 2) \overleftrightarrow{BD} intersecting $\angle ACE$
- 3) $\angle DEC$ intersected by \overleftrightarrow{AC}
- 4) Right $\angle ADE$
- 5) \overleftrightarrow{BC} intersecting $\angle ACD$
- 6) D as the midpoint of \overleftrightarrow{CE}
- 7) \overleftrightarrow{AC} perpendicular to \overleftrightarrow{AD}
- 8) \overleftrightarrow{AE} intersecting \overleftrightarrow{DB}
- 9) \overleftrightarrow{AC} parallel to \overleftrightarrow{EB}
- 10) \overleftrightarrow{BD} intersecting \overline{CE}
- 11) Acute $\angle BED$
- 12) Acute $\angle BDE$

1. **G**
2. **C**
3. **E**
4. **H**
5. **A**
6. **J**
7. **F**
8. **D**
9. **K**
10. **L**
11. **B**
12. **I**

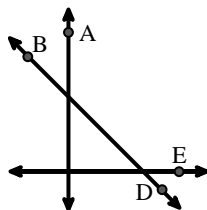
A.



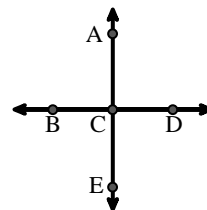
B.



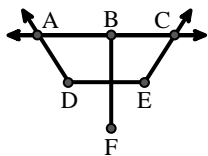
C.



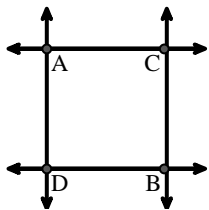
D.



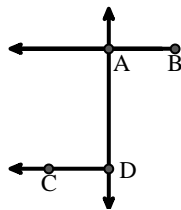
E.



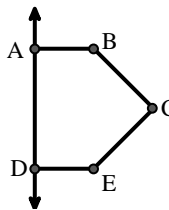
F.



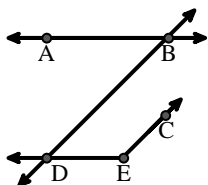
G.



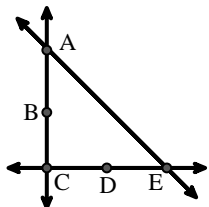
H.



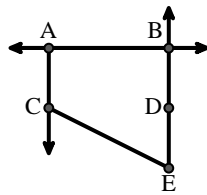
I.



J.



K.



L.

